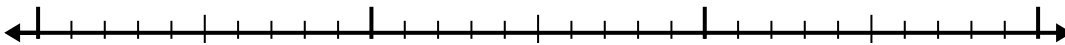




Use the number line to solve each problem.

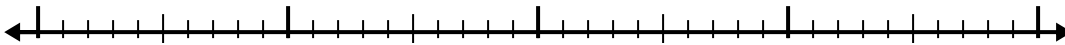
Answers

1) $5 - 1.9 =$



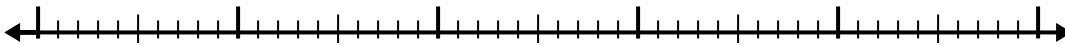
1. _____

2) $3.3 - 2.2 =$



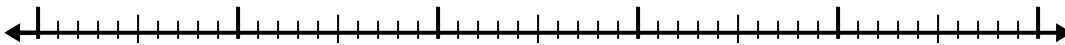
2. _____

3) $11.5 - 3.5 =$



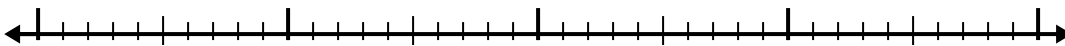
3. _____

4) $7.7 - 2.6 =$



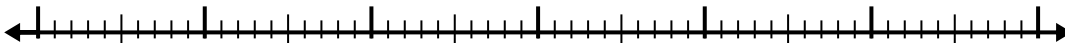
4. _____

5) $3.2 - 1.1 =$



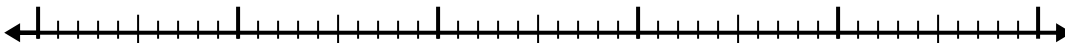
5. _____

6) $10.7 - 3.7 =$



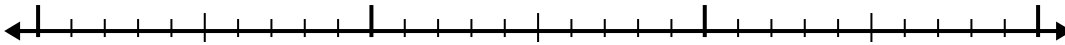
6. _____

7) $3.6 - 2.1 =$



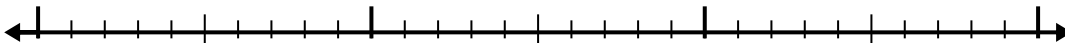
7. _____

8) $9.9 - 1.8 =$



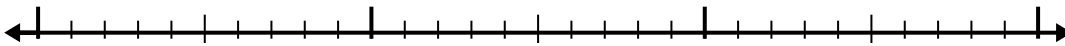
8. _____

9) $3.7 - 1.8 =$



9. _____

10) $10 - 1.8 =$

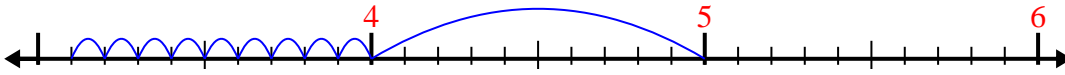


10. _____

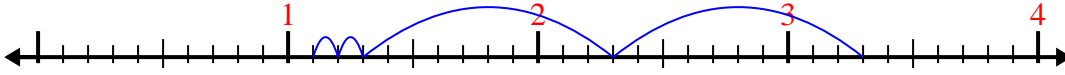


Use the number line to solve each problem.

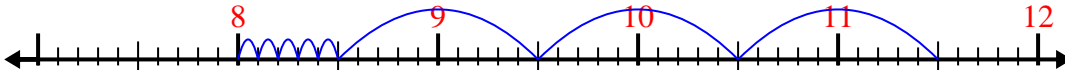
1) $5 - 1.9 =$



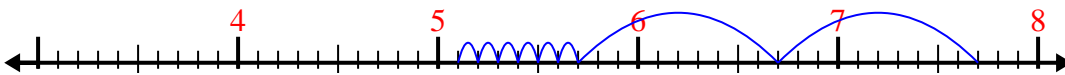
2) $3.3 - 2.2 =$



3) $11.5 - 3.5 =$



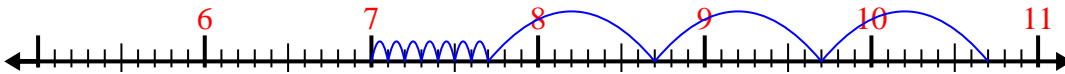
4) $7.7 - 2.6 =$




5) $3.2 - 1.1 =$



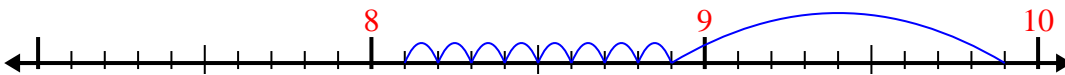
6) $10.7 - 3.7 =$



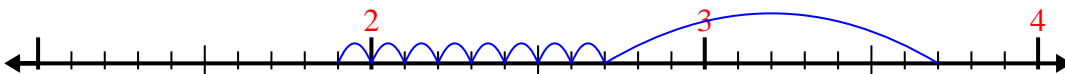
7) $3.6 - 2.1 =$



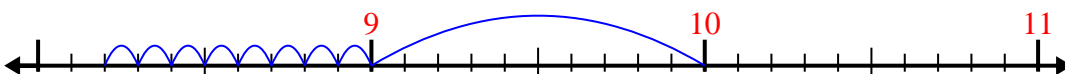
8) $9.9 - 1.8 =$



9) $3.7 - 1.8 =$



10) $10 - 1.8 =$



Answers

1. 3.1

2. 1.1

3. 8

4. 5.1

5. 2.1

6. 7

7. 1.5

8. 8.1

9. 1.9

10. 8.2