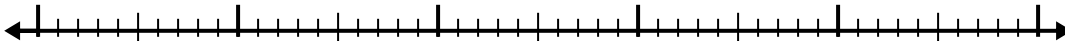


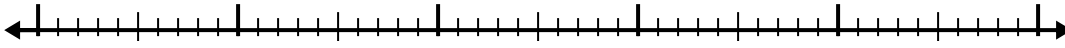


Use the number line to solve each problem.

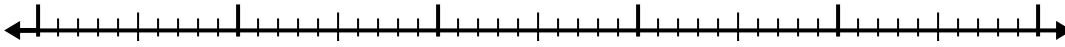
1) $3.8 - 2.7 =$



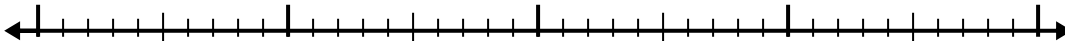
2) $6.3 - 2.7 =$



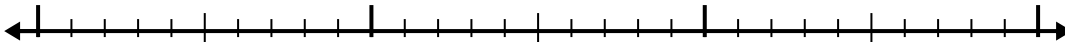
3) $4.7 - 3.6 =$



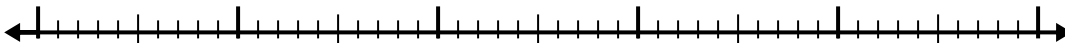
4) $9.9 - 1.1 =$




5) $6 - 1.4 =$



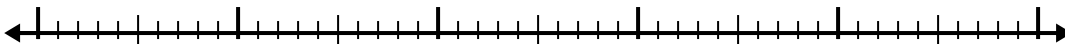
6) $6.2 - 3.9 =$




7) $7 - 3.6 =$




8) $11.4 - 3.6 =$



9) $8 - 3.9 =$



10) $9.4 - 3.4 =$



Answers

1. _____

2. _____

3. _____

4. _____

5. _____

6. _____

7. _____

8. _____

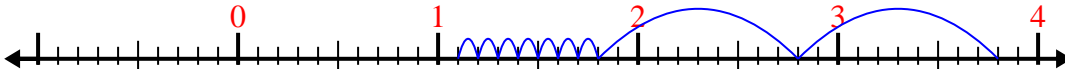
9. _____

10. _____

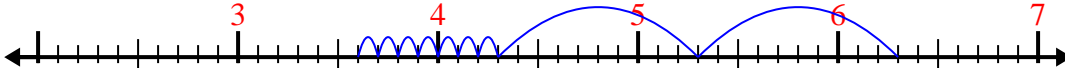


Use the number line to solve each problem.

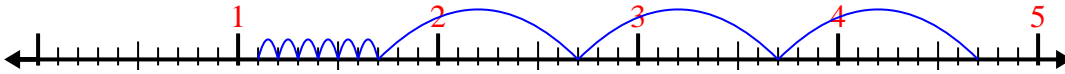
1) $3.8 - 2.7 =$



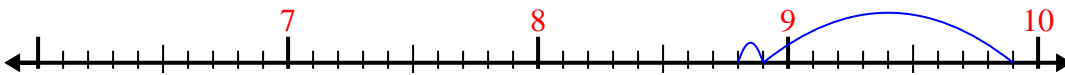
2) $6.3 - 2.7 =$



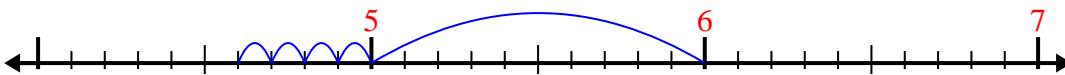
3) $4.7 - 3.6 =$



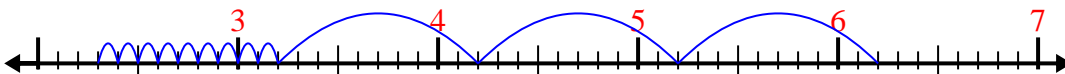
4) $9.9 - 1.1 =$



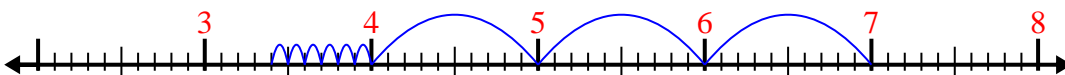
5) $6 - 1.4 =$



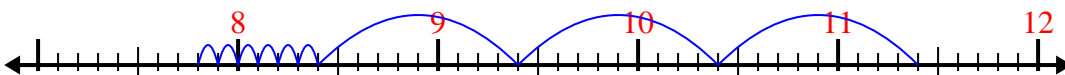
6) $6.2 - 3.9 =$



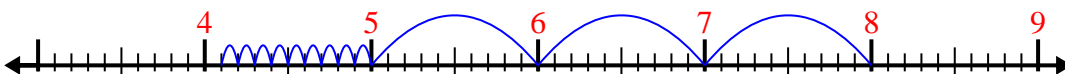
7) $7 - 3.6 =$



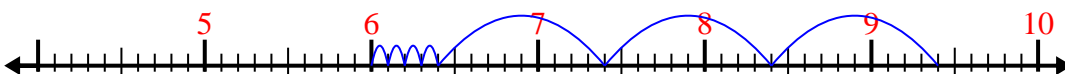
8) $11.4 - 3.6 =$



9) $8 - 3.9 =$



10) $9.4 - 3.4 =$



Answers

1. 1.1

2. 3.6

3. 1.1

4. 8.8

5. 4.6

6. 2.3

7. 3.4

8. 7.8

9. 4.1

10. 6