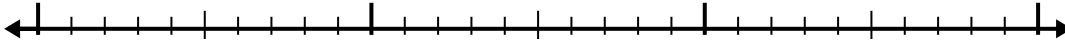


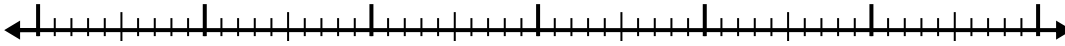


Use the number line to solve each problem.

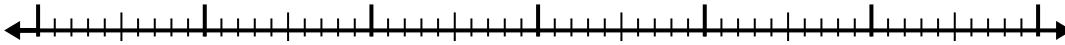
1) $4 - 1.1 =$



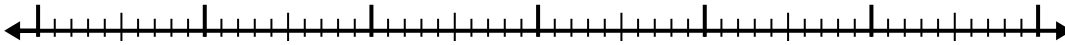
2) $9.6 - 3.5 =$



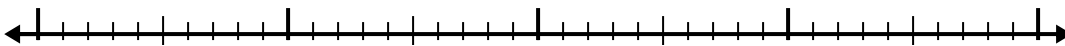
3) $11.9 - 3.4 =$



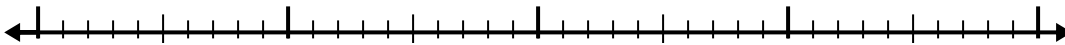
4) $11.1 - 3.1 =$



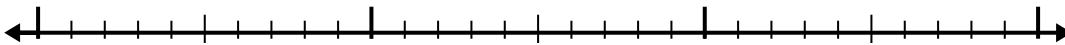
5) $9.1 - 1.5 =$



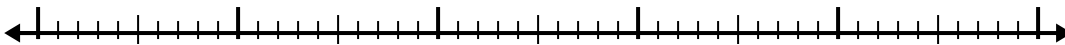
6) $7.6 - 2.4 =$



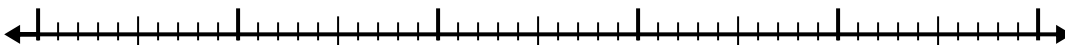
7) $7.7 - 1.3 =$



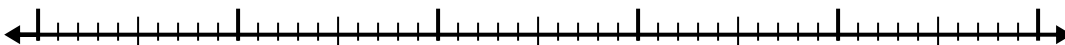
8) $8.5 - 2.5 =$



9) $7.8 - 2.9 =$



10) $11 - 3.8 =$



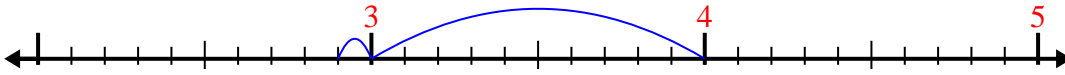
Answers

- 1. _____
- 2. _____
- 3. _____
- 4. _____
- 5. _____
- 6. _____
- 7. _____
- 8. _____
- 9. _____
- 10. _____

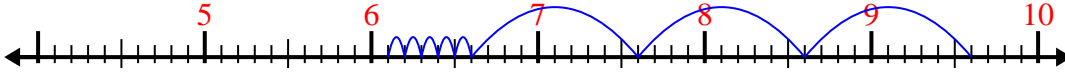


Use the number line to solve each problem.

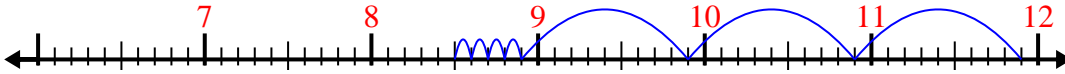
1) $4 - 1.1 =$



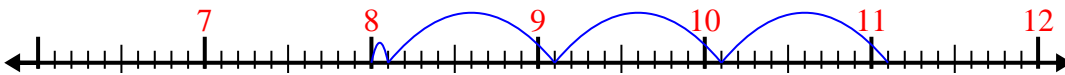
2) $9.6 - 3.5 =$



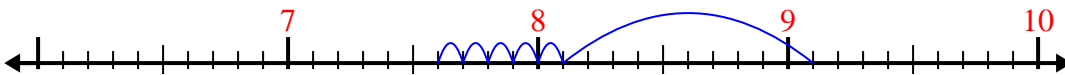
3) $11.9 - 3.4 =$



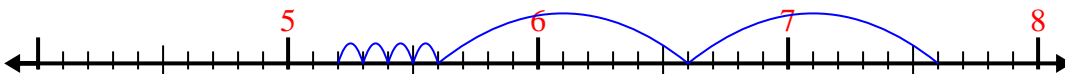
4) $11.1 - 3.1 =$



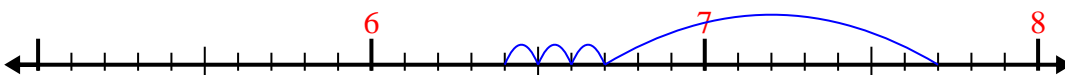
5) $9.1 - 1.5 =$



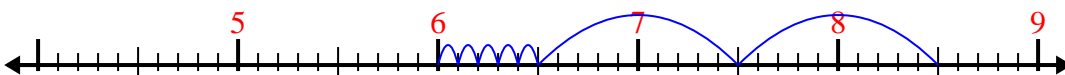
6) $7.6 - 2.4 =$



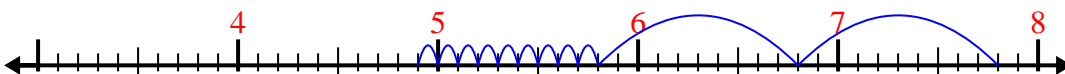
7) $7.7 - 1.3 =$



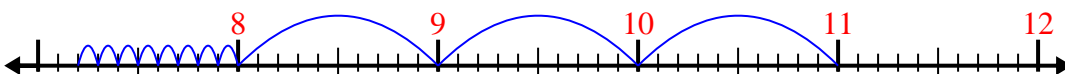
8) $8.5 - 2.5 =$



9) $7.8 - 2.9 =$



10) $11 - 3.8 =$

Answers1. 2.92. 6.13. 8.54. 85. 7.66. 5.27. 6.48. 69. 4.910. 7.2