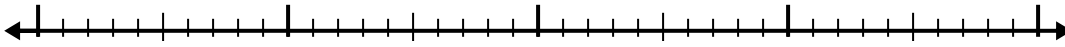





Use the number line to solve each problem.

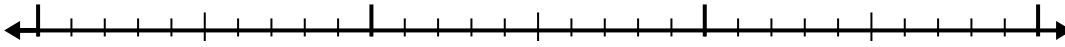
1) $3.4 - 1.4 =$



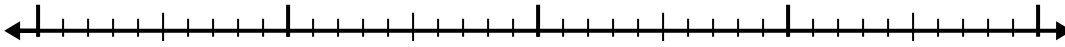
2) $7 - 3.2 =$



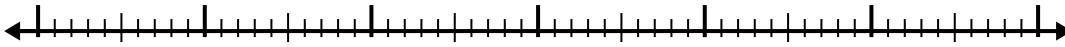
3) $3.7 - 1.4 =$



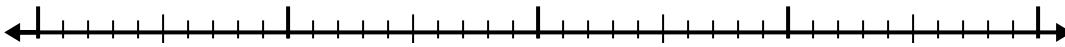
4) $6.5 - 2.8 =$




5) $11.9 - 3.7 =$



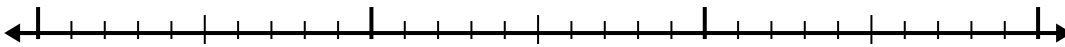
6) $3.1 - 1.3 =$



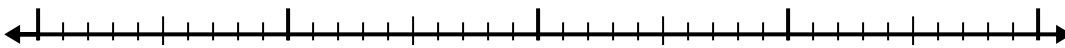
7) $12.5 - 3.7 =$



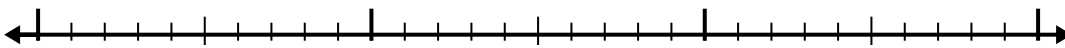
8) $6.5 - 1.4 =$



9) $7.8 - 2.3 =$



10) $6.9 - 1.9 =$



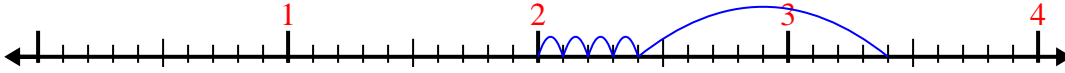
Answers

1. _____
2. _____
3. _____
4. _____
5. _____
6. _____
7. _____
8. _____
9. _____
10. _____

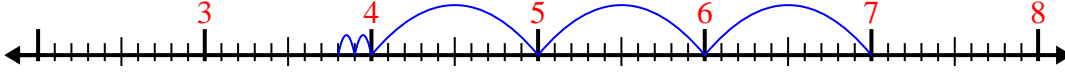


Use the number line to solve each problem.

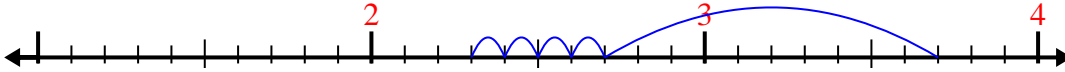
1) $3.4 - 1.4 =$



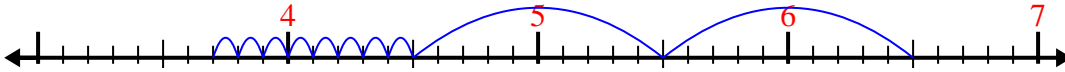
2) $7 - 3.2 =$



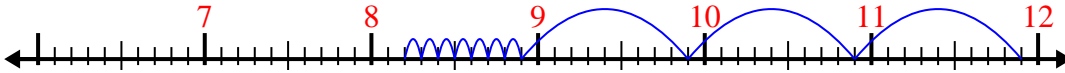
3) $3.7 - 1.4 =$



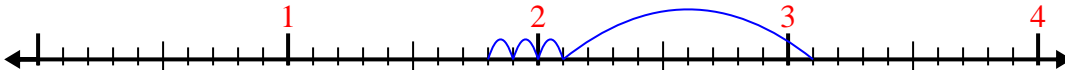
4) $6.5 - 2.8 =$



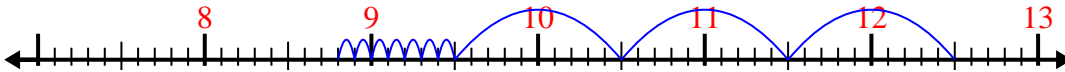
5) $11.9 - 3.7 =$



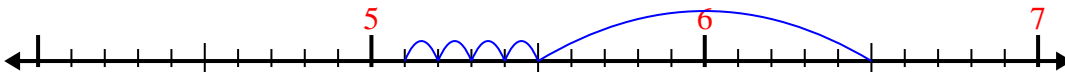
6) $3.1 - 1.3 =$



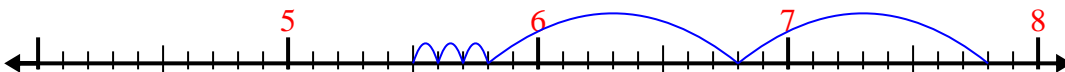
7) $12.5 - 3.7 =$



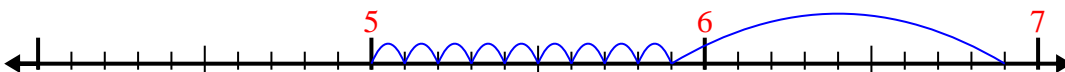
8) $6.5 - 1.4 =$



9) $7.8 - 2.3 =$



10) $6.9 - 1.9 =$



Answers

1. 2

2. 3.8

3. 2.3

4. 3.7

5. 8.2

6. 1.8

7. 8.8

8. 5.1

9. 5.5

10. 5