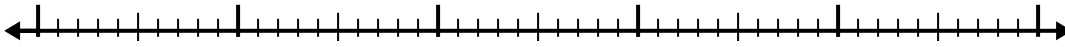


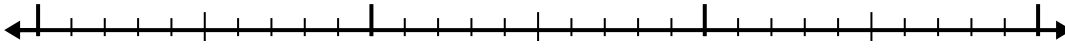


Use the number line to solve each problem.

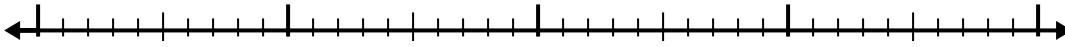
1) $5.8 - 2.8 =$



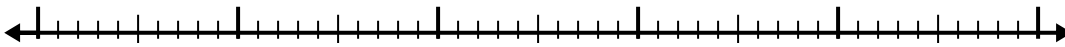
2) $5.3 - 1.5 =$



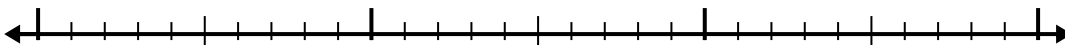
3) $6.4 - 2.7 =$



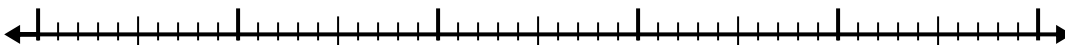
4) $6.8 - 2.6 =$



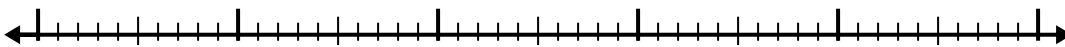
5) $4.8 - 1.8 =$



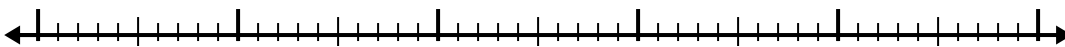
6) $6 - 2.8 =$




7) $11.3 - 2.4 =$



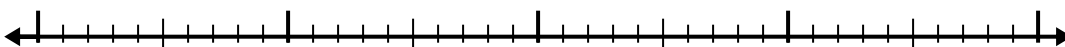
8) $11 - 3.2 =$



9) $7.1 - 1.5 =$



10) $7.6 - 1.2 =$



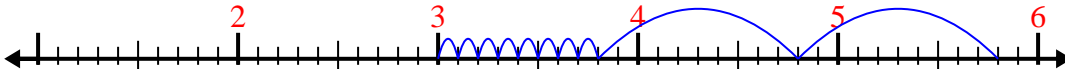
Answers

- 1. _____
- 2. _____
- 3. _____
- 4. _____
- 5. _____
- 6. _____
- 7. _____
- 8. _____
- 9. _____
- 10. _____

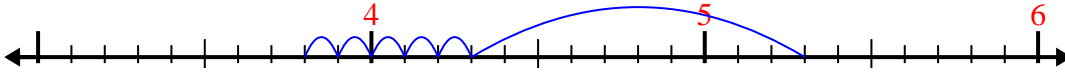


Use the number line to solve each problem.

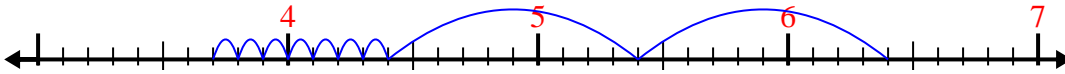
1) $5.8 - 2.8 =$



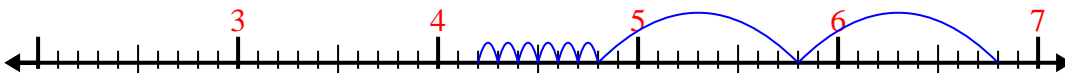
2) $5.3 - 1.5 =$



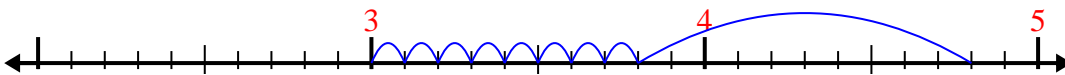
3) $6.4 - 2.7 =$



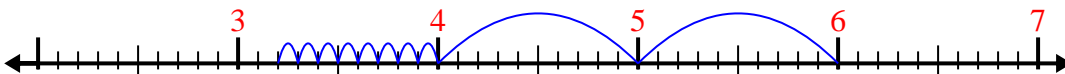
4) $6.8 - 2.6 =$



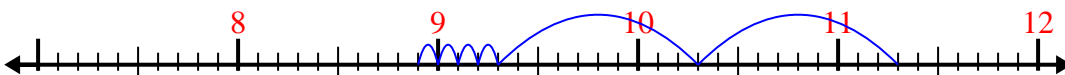
5) $4.8 - 1.8 =$




6) $6 - 2.8 =$




7) $11.3 - 2.4 =$



8) $11 - 3.2 =$



9) $7.1 - 1.5 =$



10) $7.6 - 1.2 =$



Answers

1. 3
2. 3.8
3. 3.7
4. 4.2
5. 3
6. 3.2
7. 8.9
8. 7.8
9. 5.6
10. 6.4