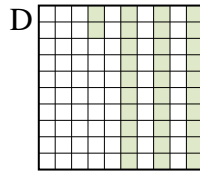
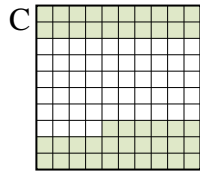

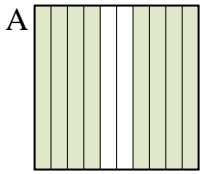




Put the boxes in order from least to greatest based on the shaded amount.

**Answers**

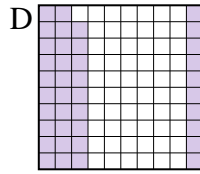
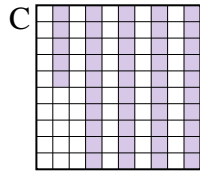
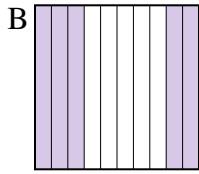
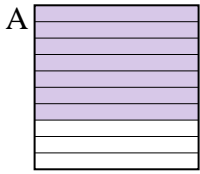
Ex)



small 0.32 - D  
0.46 - C  
0.5 - B  
large 0.8 - A

Ex. **D,C,B,A**

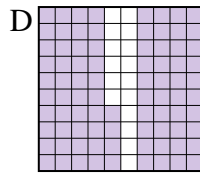
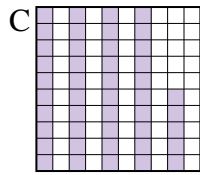
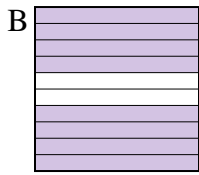
1)



small \_\_\_\_\_  
large \_\_\_\_\_

1. \_\_\_\_\_

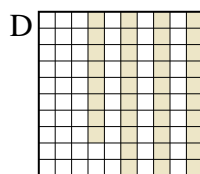
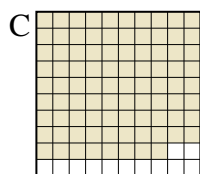
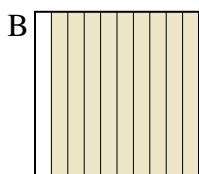
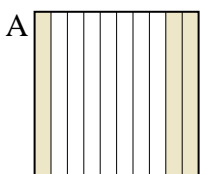
2)



small \_\_\_\_\_  
large \_\_\_\_\_

2. \_\_\_\_\_

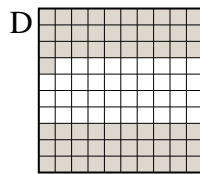
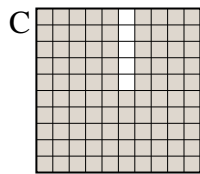
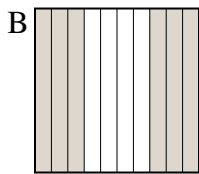
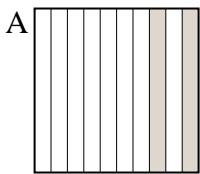
3)



small \_\_\_\_\_  
large \_\_\_\_\_

3. \_\_\_\_\_

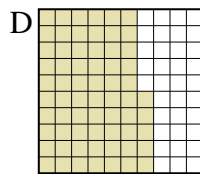
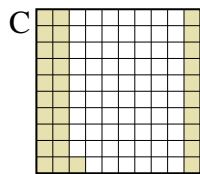
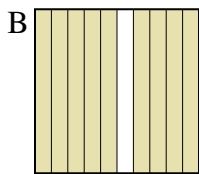
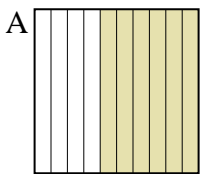
4)



small \_\_\_\_\_  
large \_\_\_\_\_

4. \_\_\_\_\_

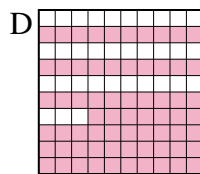
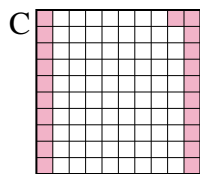

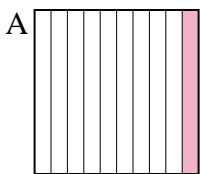
5)



small \_\_\_\_\_  
large \_\_\_\_\_

5. \_\_\_\_\_

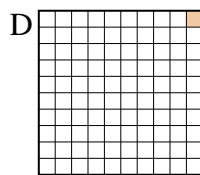
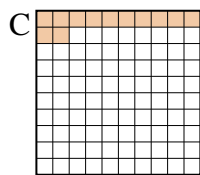
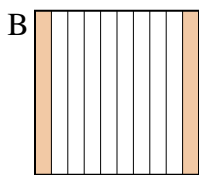
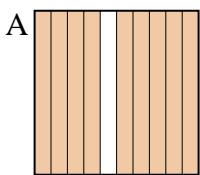
6)



small \_\_\_\_\_  
large \_\_\_\_\_

6. \_\_\_\_\_

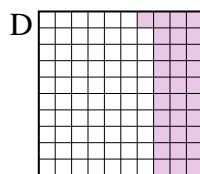
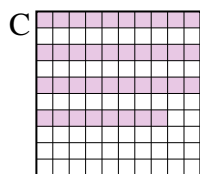
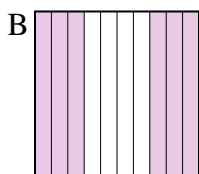
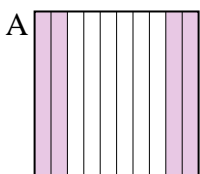
7)



small \_\_\_\_\_  
large \_\_\_\_\_

7. \_\_\_\_\_

8)



small \_\_\_\_\_  
large \_\_\_\_\_

8. \_\_\_\_\_



Put the boxes in order from least to greatest based on the shaded amount.

Ex)	A	B	C	D	small $\frac{0.32 - D}{0.46 - C}$	large $\frac{0.5 - B}{0.8 - A}$
1)	A	B	C	D	small $\frac{0.39 - D}{0.45 - C}$	large $\frac{0.5 - B}{0.7 - A}$
2)	A	B	C	D	small $\frac{0.45 - C}{0.5 - A}$	large $\frac{0.8 - B}{0.84 - D}$
3)	A	B	C	D	small $\frac{0.3 - A}{0.38 - D}$	large $\frac{0.88 - C}{0.9 - B}$
4)	A	B	C	D	small $\frac{0.2 - A}{0.6 - B}$	large $\frac{0.61 - D}{0.95 - C}$
5)	A	B	C	D	small $\frac{0.31 - C}{0.6 - A}$	large $\frac{0.65 - D}{0.9 - B}$
6)	A	B	C	D	small $\frac{0.1 - A}{0.21 - C}$	large $\frac{0.6 - B}{0.67 - D}$
7)	A	B	C	D	small $\frac{0.01 - D}{0.12 - C}$	large $\frac{0.2 - B}{0.9 - A}$
8)	A	B	C	D	small $\frac{0.31 - D}{0.38 - C}$	large $\frac{0.4 - A}{0.6 - B}$

**Answers**

- Ex. D,C,B,A
1. D,C,B,A
2. C,A,B,D
3. A,D,C,B
4. A,B,D,C
5. C,A,D,B
6. A,C,B,D
7. D,C,B,A
8. D,C,A,B