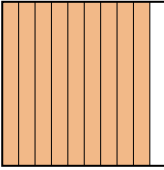
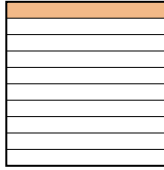

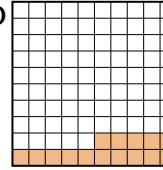




Put the boxes in order from least to greatest based on the shaded amount.

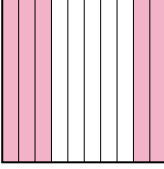

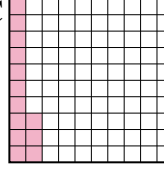
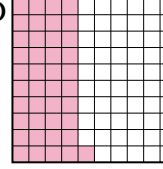
Answers

Ex) A  B  C  D 

Small 0.08 - C
0.1 - B
0.15 - D
Large 0.9 - A


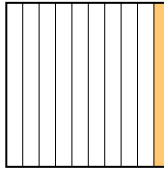
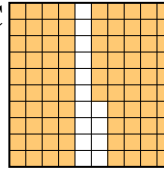
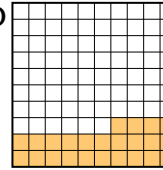
Ex. C,B,D,A

1. _____
2. _____
3. _____
4. _____
5. _____
6. _____
7. _____
8. _____

1) A  B  C  D 

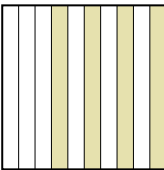


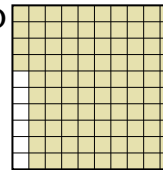
Small _____

 Large _____

2) A  B  C  D 


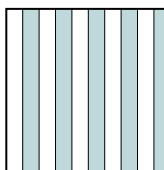
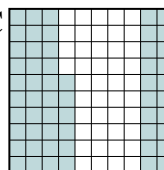
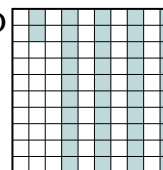
Small _____

 Large _____

3) A  B  C  D 



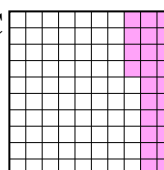
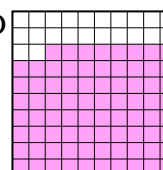
Small _____

 Large _____

4) A  B  C  D 


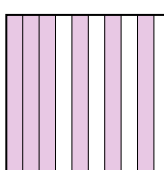
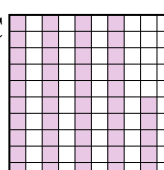
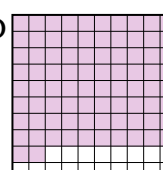
Small _____

 Large _____

5) A  B  C  D 

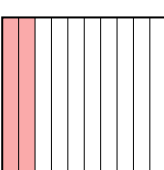
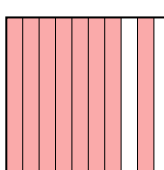
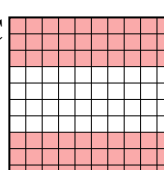
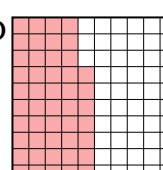
Small _____

 Large _____

6) A  B  C  D 


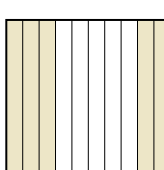
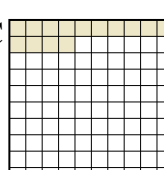
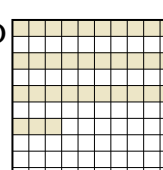
Small _____

 Large _____

7) A  B  C  D 

Small _____

 Large _____

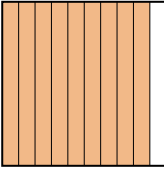
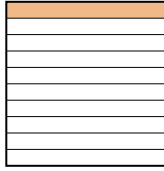

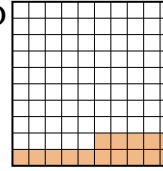
8) A  B  C  D 

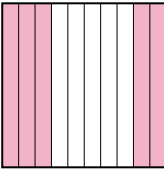

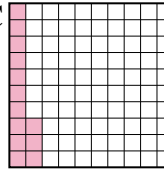
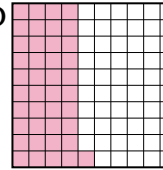
Small _____


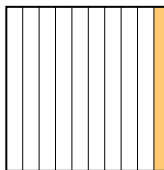
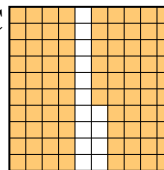
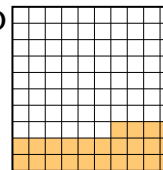
 Large _____

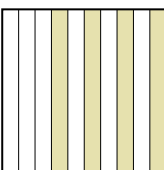


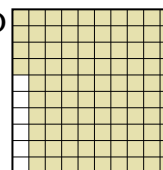



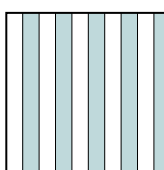
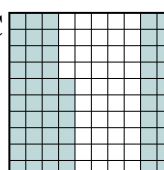
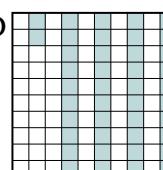
Put the boxes in order from least to greatest based on the shaded amount.

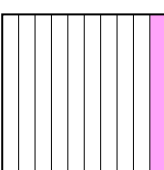

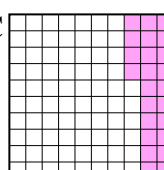
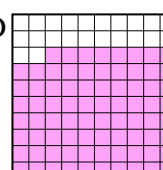
Ex) A  B  C  D  Small $\frac{0.08 - C}{0.1 - B}$
Large $\frac{0.15 - D}{0.9 - A}$


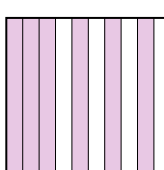
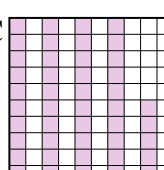
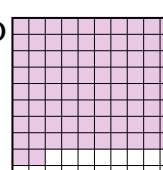
1) A  B  C  D  Small $\frac{0.13 - C}{0.3 - B}$
Large $\frac{0.41 - D}{0.5 - A}$

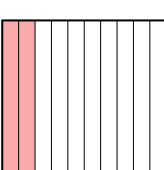
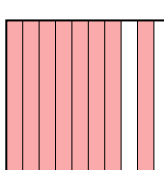
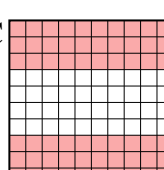
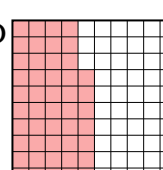
2) A  B  C  D  Small $\frac{0.1 - B}{0.24 - D}$
Large $\frac{0.8 - A}{0.86 - C}$


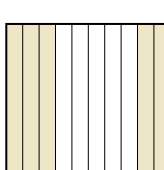
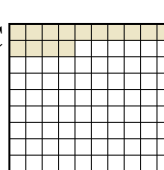
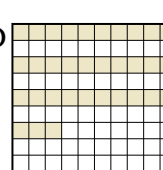
3) A  B  C  D  Small $\frac{0.4 - A}{0.6 - B}$
Large $\frac{0.66 - C}{0.94 - D}$

4) A  B  C  D  Small $\frac{0.42 - D}{0.5 - B}$
Large $\frac{0.56 - C}{0.7 - A}$

5) A  B  C  D  Small $\frac{0.1 - A}{0.24 - C}$
Large $\frac{0.6 - B}{0.78 - D}$

6) A  B  C  D  Small $\frac{0.3 - A}{0.45 - C}$
Large $\frac{0.6 - B}{0.82 - D}$

7) A  B  C  D  Small $\frac{0.2 - A}{0.47 - D}$
Large $\frac{0.60 - C}{0.8 - B}$

8) A  B  C  D  Small $\frac{0.14 - C}{0.33 - D}$
Large $\frac{0.5 - B}{0.6 - A}$

AnswersEx. C,B,D,A1. C,B,D,A2. B,D,A,C3. A,B,C,D4. D,B,C,A5. A,C,B,D6. A,C,B,D7. A,D,C,B8. C,D,B,A