



Put the boxes in order from least to greatest based on the shaded amount.

Answers

Ex) A B C D

Small 0.1 - A
0.2 - B
0.71 - C
Large 0.87 - D

Ex. A,B,C,D

1) A B C D

Small _____

 Large _____

1. _____

2. _____

3. _____

2) A B C D

Small _____

 Large _____

4. _____

5. _____

3) A B C D

Small _____

 Large _____

6. _____

7. _____

4) A B C D

Small _____

 Large _____

8. _____

5) A B C D

Small _____

 Large _____

6) A B C D

Small _____

 Large _____

7) A B C D

Small _____

 Large _____

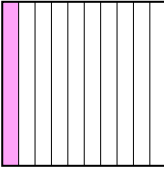

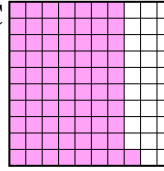
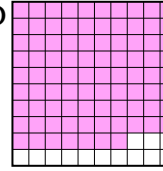
8) A B C D



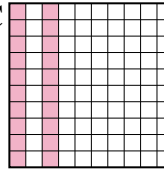
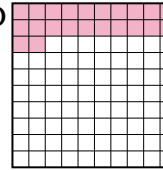
Small _____

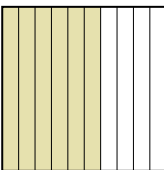

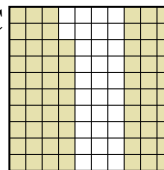
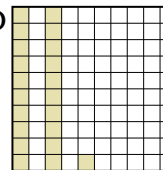
 Large _____

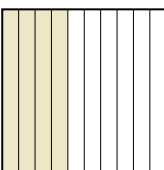

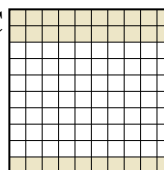
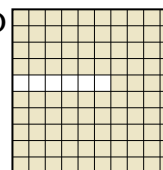




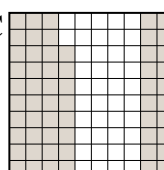
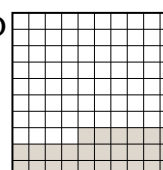
Put the boxes in order from least to greatest based on the shaded amount.



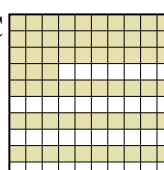
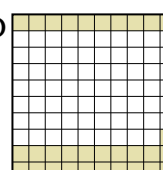
Ex) A  B  C  D  Small $\frac{0.1 - A}{0.2 - B}{0.71 - C}$ Large $\frac{0.87 - D$

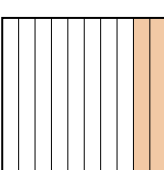

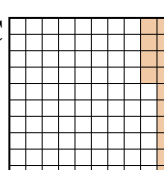
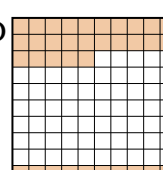
1) A  B  C  D  Small $\frac{0.20 - C}{0.22 - D}$ Large $\frac{0.3 - A}{0.9 - B}$

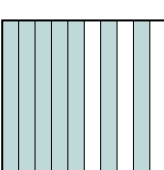


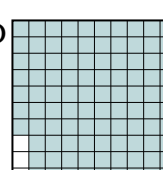
2) A  B  C  D  Small $\frac{0.21 - D}{0.6 - A}{0.68 - C}$ Large $\frac{0.8 - B$


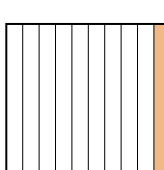
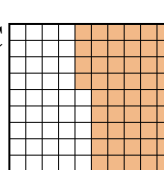
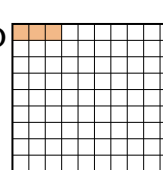
3) A  B  C  D  Small $\frac{0.30 - C}{0.4 - A}{0.6 - B}$ Large $\frac{0.94 - D$

4) A  B  C  D  Small $\frac{0.2 - B}{0.26 - D}{0.58 - C}$ Large $\frac{0.8 - A$

5) A  B  C  D  Small $\frac{0.31 - D}{0.5 - A}{0.63 - C}$ Large $\frac{0.7 - B$

6) A  B  C  D  Small $\frac{0.14 - C}{0.2 - A}{0.35 - D}$ Large $\frac{0.5 - B$

7) A  B  C  D  Small $\frac{0.1 - B}{0.7 - A}{0.76 - C}$ Large $\frac{0.97 - D$

8) A  B  C  D  Small $\frac{0.03 - D}{0.1 - B}{0.54 - C}$ Large $\frac{0.9 - A$

Answers

- Ex. A,B,C,D
1. C,D,A,B
2. D,A,C,B
3. C,A,B,D
4. B,D,C,A
5. D,A,C,B
6. C,A,D,B
7. B,A,C,D
8. D,B,C,A