

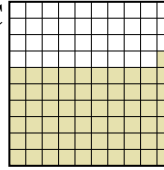
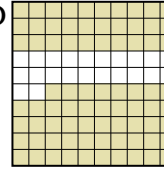




Put the boxes in order from least to greatest based on the shaded amount.

Answers

Ex) A  B  C  D 

Small $\frac{0.5 - B}{0.6 - A}$
 Large $\frac{0.61 - C}{0.78 - D}$

Ex. B,A,C,D

1. _____

2. _____

3. _____

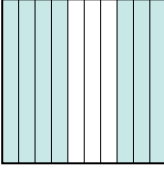

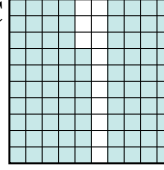
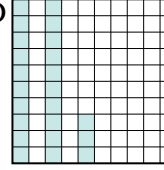
4. _____

5. _____

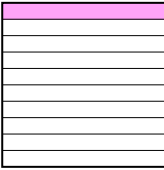

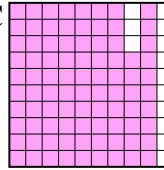
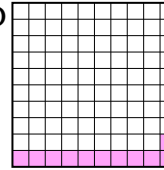
6. _____

7. _____



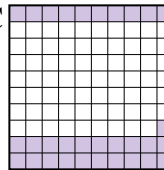
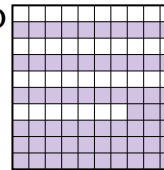
8. _____

1) A  B  C  D 




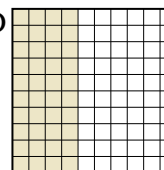
Small _____
 Large _____

2) A  B  C  D 



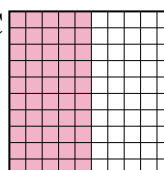
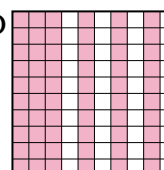
Small _____
 Large _____

3) A  B  C  D 


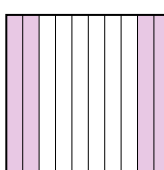
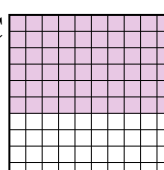
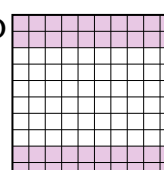
Small _____
 Large _____

4) A  B  C  D 




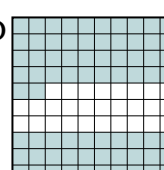
Small _____
 Large _____

5) A  B  C  D 


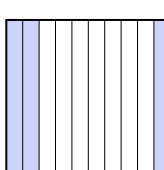
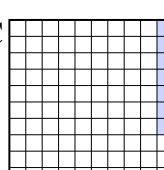
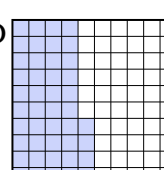
Small _____
 Large _____

6) A  B  C  D 

Small _____
 Large _____

7) A  B  C  D 



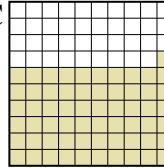
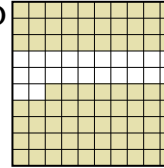
Small _____
 Large _____

8) A  B  C  D 

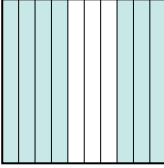
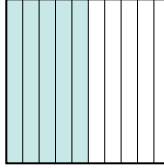
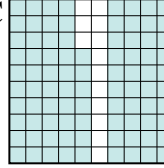
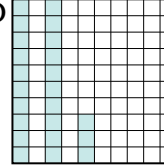
Small _____
 Large _____



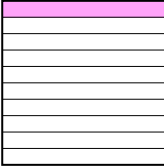

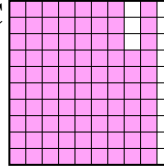
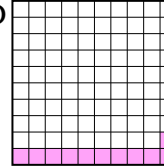
Put the boxes in order from least to greatest based on the shaded amount.

Ex) A  B  C  D 



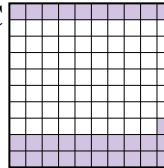
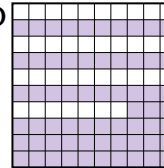
Small $\frac{0.5 - B}{0.6 - A}$
 $\frac{0.61 - C}{0.78 - D}$

1) A  B  C  D 




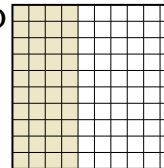
Small $\frac{0.23 - D}{0.5 - B}$
 $\frac{0.7 - A}{0.87 - C}$

2) A  B  C  D 

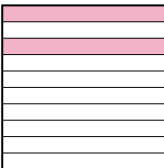

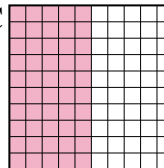
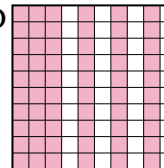
Small $\frac{0.1 - A}{0.11 - D}$
 $\frac{0.5 - B}{0.87 - C}$

3) A  B  C  D 


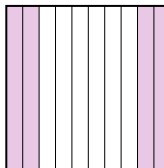
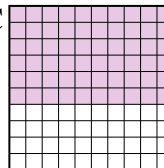
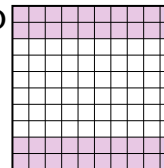
Small $\frac{0.3 - B}{0.31 - C}$
 $\frac{0.5 - A}{0.63 - D}$

4) A  B  C  D 

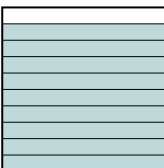
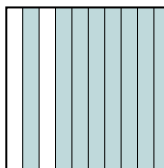

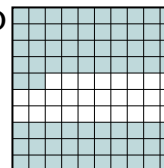
Small $\frac{0.3 - A}{0.4 - B}$
 $\frac{0.40 - B}{0.80 - C}$

5) A  B  C  D 


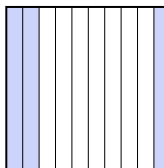
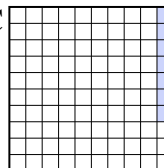
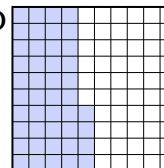
Small $\frac{0.2 - A}{0.50 - C}$
 $\frac{0.60 - D}{0.7 - B}$

6) A  B  C  D 

Small $\frac{0.4 - B}{0.40 - B}$
 $\frac{0.60 - C}{0.8 - A}$

7) A  B  C  D 

Small $\frac{0.37 - C}{0.72 - D}$
 $\frac{0.8 - B}{0.9 - A}$

8) A  B  C  D 

Small $\frac{0.07 - C}{0.3 - B}$
 $\frac{0.4 - A}{0.44 - D}$

Answers

Ex. B,A,C,D

1. D,B,A,C

2. A,D,B,C

3. B,C,A,D

4. A,B,B,C

5. A,C,D,B

6. B,B,C,A

7. C,D,B,A

8. C,B,A,D