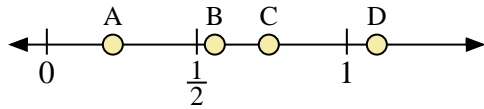
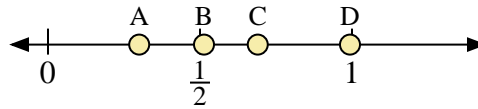




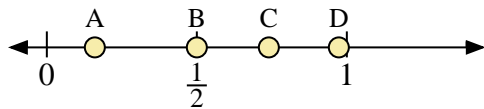
Use the number lines to answer the questions.



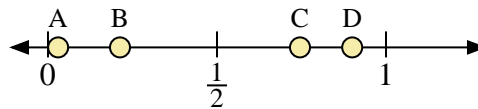
- 1) Which letter best represents the location of 1.1?
- 2) Which letter best represents the location of 0.22?



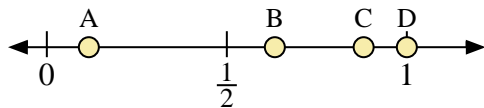
- 3) Which letter best represents the location of 0.30?
- 4) Which letter best represents the location of 0.69?



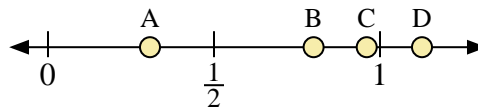
- 5) Which letter best represents the location of 0.5?
- 6) Which letter best represents the location of 0.16?



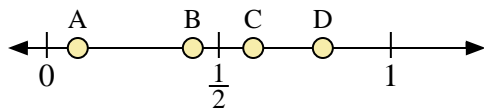
- 7) Which letter best represents the location of 0.90?
- 8) Which letter best represents the location of 0.03?



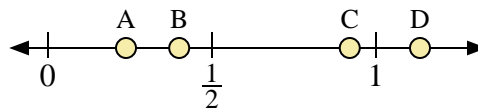
- 9) Which letter best represents the location of 1.0?
- 10) Which letter best represents the location of 0.88?



- 11) Which letter best represents the location of 0.8?
- 12) Which letter best represents the location of 0.96?



- 13) Which letter best represents the location of 0.60?
- 14) Which letter best represents the location of 0.09?



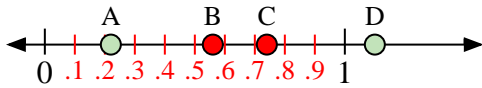
- 15) Which letter best represents the location of 0.40?
- 16) Which letter best represents the location of 0.92?

## Answers

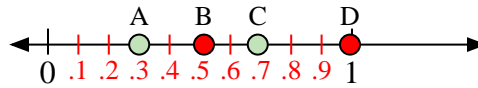
1. \_\_\_\_\_
2. \_\_\_\_\_
3. \_\_\_\_\_
4. \_\_\_\_\_
5. \_\_\_\_\_
6. \_\_\_\_\_
7. \_\_\_\_\_
8. \_\_\_\_\_
9. \_\_\_\_\_
10. \_\_\_\_\_
11. \_\_\_\_\_
12. \_\_\_\_\_
13. \_\_\_\_\_
14. \_\_\_\_\_
15. \_\_\_\_\_
16. \_\_\_\_\_



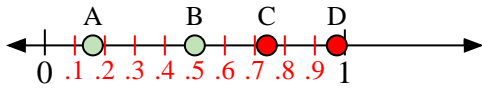
Use the number lines to answer the questions.



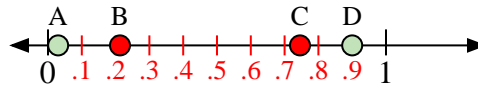
- 1) Which letter best represents the location of 1.1?
- 2) Which letter best represents the location of 0.22?



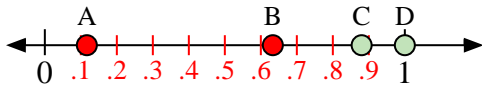
- 3) Which letter best represents the location of 0.30?
- 4) Which letter best represents the location of 0.69?




- 5) Which letter best represents the location of 0.5?
- 6) Which letter best represents the location of 0.16?



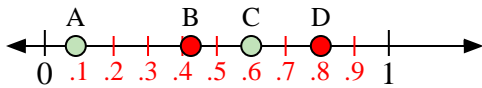
- 7) Which letter best represents the location of 0.90?
- 8) Which letter best represents the location of 0.03?



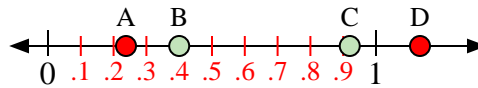
- 9) Which letter best represents the location of 1.0?
- 10) Which letter best represents the location of 0.88?



- 11) Which letter best represents the location of 0.8?
- 12) Which letter best represents the location of 0.96?



- 13) Which letter best represents the location of 0.60?
- 14) Which letter best represents the location of 0.09?



- 15) Which letter best represents the location of 0.40?
- 16) Which letter best represents the location of 0.92?

**Answers**

1.   D
2.   A
3.   A
4.   C
5.   B
6.   A
7.   D
8.   A
9.   D
10.   C
11.   B
12.   C
13.   C
14.   A
15.   B
16.   C