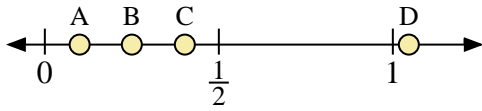
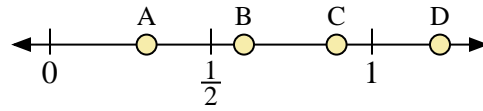




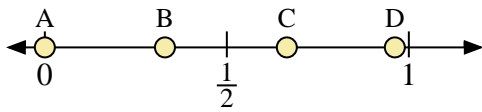
Use the number lines to answer the questions.



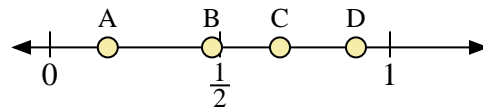
- 1) Which letter best represents the location of 0.10?
- 2) Which letter best represents the location of 0.25?



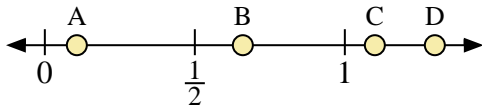
- 3) Which letter best represents the location of 0.3?
- 4) Which letter best represents the location of 0.89?



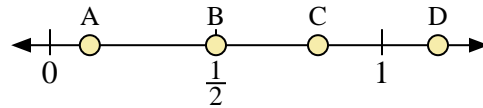
- 5) Which letter best represents the location of 0.00?
- 6) Which letter best represents the location of 0.33?



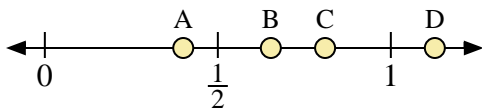
- 7) Which letter best represents the location of 0.9?
- 8) Which letter best represents the location of 0.17?



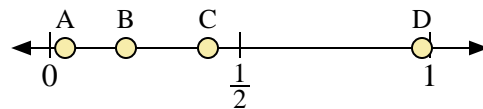
- 9) Which letter best represents the location of 1.1?
- 10) Which letter best represents the location of 0.66?



- 11) Which letter best represents the location of 0.50?
- 12) Which letter best represents the location of 0.12?



- 13) Which letter best represents the location of 0.4?
- 14) Which letter best represents the location of 0.81?



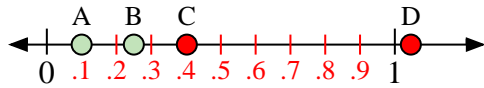
- 15) Which letter best represents the location of 0.20?
- 16) Which letter best represents the location of 0.04?

Answers

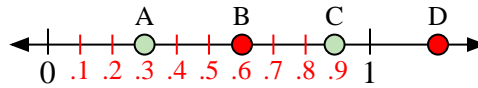
1. _____
2. _____
3. _____
4. _____
5. _____
6. _____
7. _____
8. _____
9. _____
10. _____
11. _____
12. _____
13. _____
14. _____
15. _____
16. _____



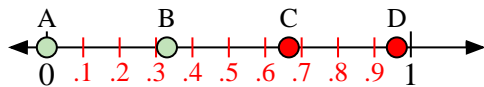
Use the number lines to answer the questions.



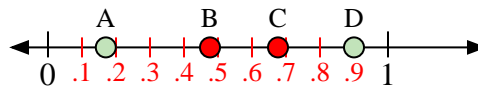
- 1) Which letter best represents the location of 0.10?
- 2) Which letter best represents the location of 0.25?



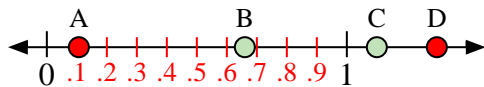
- 3) Which letter best represents the location of 0.3?
- 4) Which letter best represents the location of 0.89?



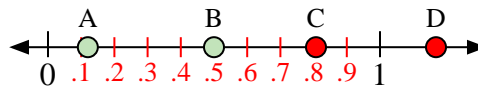
- 5) Which letter best represents the location of 0.00?
- 6) Which letter best represents the location of 0.33?



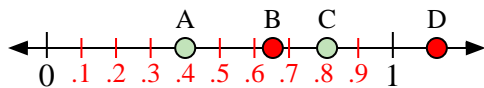
- 7) Which letter best represents the location of 0.9?
- 8) Which letter best represents the location of 0.17?



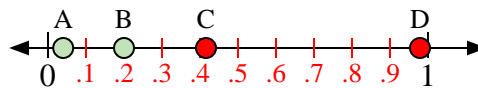
- 9) Which letter best represents the location of 1.1?
- 10) Which letter best represents the location of 0.66?



- 11) Which letter best represents the location of 0.50?
- 12) Which letter best represents the location of 0.12?



- 13) Which letter best represents the location of 0.4?
- 14) Which letter best represents the location of 0.81?



- 15) Which letter best represents the location of 0.20?
- 16) Which letter best represents the location of 0.04?

Answers

1. **A**
2. **B**
3. **A**
4. **C**
5. **A**
6. **B**
7. **D**
8. **A**
9. **C**
10. **B**
11. **B**
12. **A**
13. **A**
14. **C**
15. **B**
16. **A**