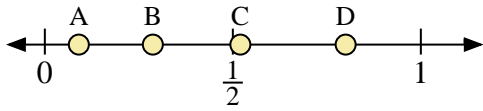
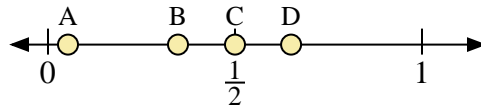




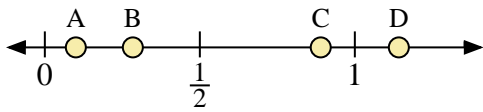
Use the number lines to answer the questions.



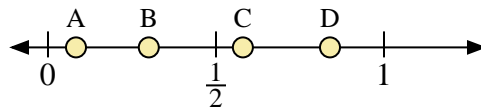
- 1) Which letter best represents the location of 0.8?
- 2) Which letter best represents the location of 0.52?



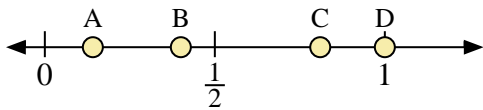
- 3) Which letter best represents the location of 0.5?
- 4) Which letter best represents the location of 0.65?



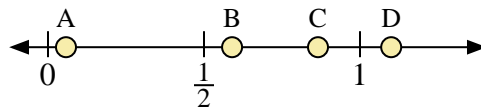
- 5) Which letter best represents the location of 0.10?
- 6) Which letter best represents the location of 0.89?



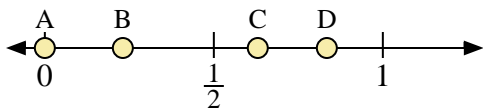
- 7) Which letter best represents the location of 0.30?
- 8) Which letter best represents the location of 0.58?



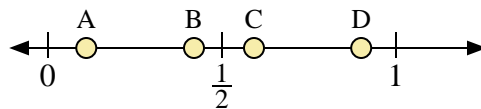
- 9) Which letter best represents the location of 0.40?
- 10) Which letter best represents the location of 0.81?



- 11) Which letter best represents the location of 1.10?
- 12) Which letter best represents the location of 0.59?



- 13) Which letter best represents the location of 0.0?
- 14) Which letter best represents the location of 0.63?



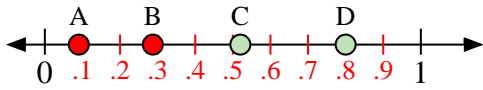
- 15) Which letter best represents the location of 0.90?
- 16) Which letter best represents the location of 0.11?

Answers

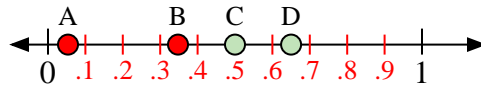
1. _____
2. _____
3. _____
4. _____
5. _____
6. _____
7. _____
8. _____
9. _____
10. _____
11. _____
12. _____
13. _____
14. _____
15. _____
16. _____



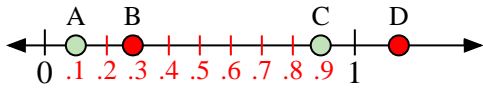
Use the number lines to answer the questions.



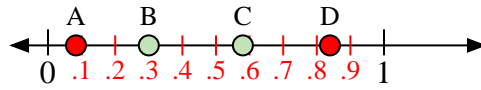
- 1) Which letter best represents the location of 0.8?
- 2) Which letter best represents the location of 0.52?



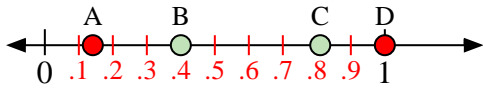
- 3) Which letter best represents the location of 0.5?
- 4) Which letter best represents the location of 0.65?



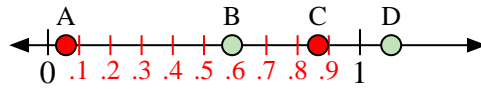
- 5) Which letter best represents the location of 0.10?
- 6) Which letter best represents the location of 0.89?



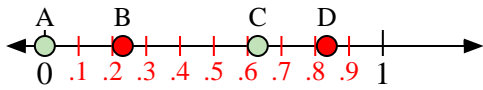
- 7) Which letter best represents the location of 0.30?
- 8) Which letter best represents the location of 0.58?



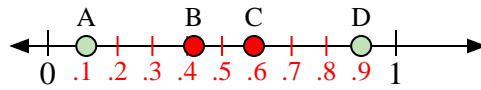
- 9) Which letter best represents the location of 0.40?
- 10) Which letter best represents the location of 0.81?



- 11) Which letter best represents the location of 1.10?
- 12) Which letter best represents the location of 0.59?



- 13) Which letter best represents the location of 0.0?
- 14) Which letter best represents the location of 0.63?



- 15) Which letter best represents the location of 0.90?
- 16) Which letter best represents the location of 0.11?

Answers

1. **D**
2. **C**
3. **C**
4. **D**
5. **A**
6. **C**
7. **B**
8. **C**
9. **B**
10. **C**
11. **D**
12. **B**
13. **A**
14. **C**
15. **D**
16. **A**