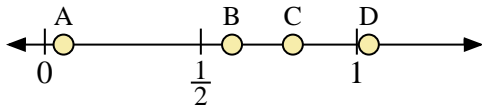
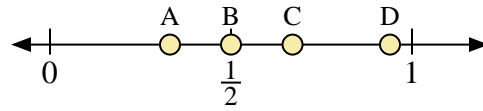




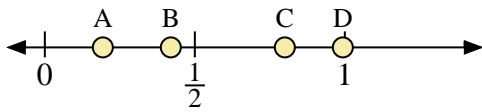
Use the number lines to answer the questions.



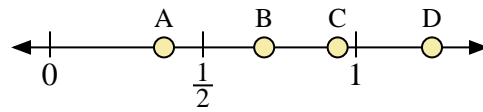
- 1) Which letter best represents the location of 0.60?
- 2) Which letter best represents the location of 0.06?



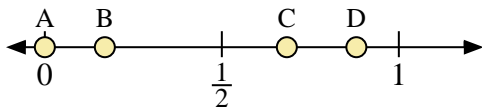
- 3) Which letter best represents the location of 0.50?
- 4) Which letter best represents the location of 0.67?



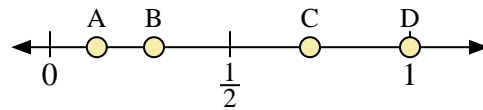
- 5) Which letter best represents the location of 0.80?
- 6) Which letter best represents the location of 0.42?



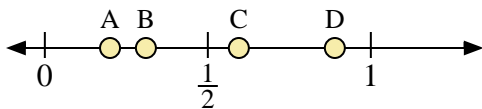
- 7) Which letter best represents the location of 0.7?
- 8) Which letter best represents the location of 0.94?



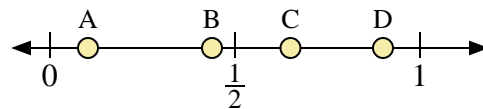
- 9) Which letter best represents the location of 0.0?
- 10) Which letter best represents the location of 0.88?



- 11) Which letter best represents the location of 1.0?
- 12) Which letter best represents the location of 0.13?



- 13) Which letter best represents the location of 0.20?
- 14) Which letter best represents the location of 0.31?



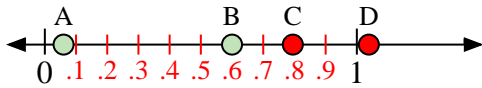
- 15) Which letter best represents the location of 0.9?
- 16) Which letter best represents the location of 0.65?

**Answers**

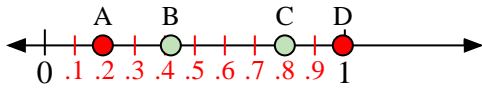
1. \_\_\_\_\_
2. \_\_\_\_\_
3. \_\_\_\_\_
4. \_\_\_\_\_
5. \_\_\_\_\_
6. \_\_\_\_\_
7. \_\_\_\_\_
8. \_\_\_\_\_
9. \_\_\_\_\_
10. \_\_\_\_\_
11. \_\_\_\_\_
12. \_\_\_\_\_
13. \_\_\_\_\_
14. \_\_\_\_\_
15. \_\_\_\_\_
16. \_\_\_\_\_



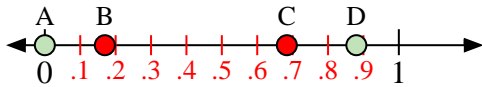
Use the number lines to answer the questions.



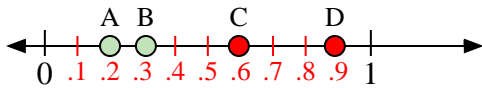
- 1) Which letter best represents the location of 0.60?
- 2) Which letter best represents the location of 0.06?



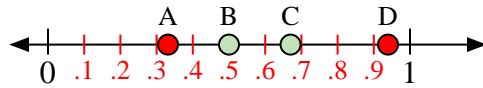
- 5) Which letter best represents the location of 0.80?
- 6) Which letter best represents the location of 0.42?



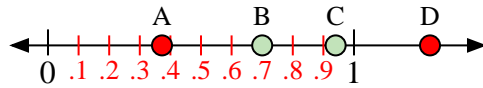
- 9) Which letter best represents the location of 0.0?
- 10) Which letter best represents the location of 0.88?



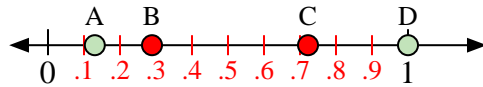
- 13) Which letter best represents the location of 0.20?
- 14) Which letter best represents the location of 0.31?



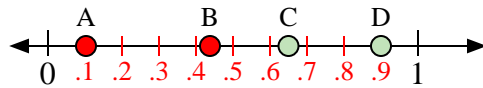
- 3) Which letter best represents the location of 0.50?
- 4) Which letter best represents the location of 0.67?



- 7) Which letter best represents the location of 0.7?
- 8) Which letter best represents the location of 0.94?



- 11) Which letter best represents the location of 1.0?
- 12) Which letter best represents the location of 0.13?



- 15) Which letter best represents the location of 0.9?
- 16) Which letter best represents the location of 0.65?

**Answers**

1.     **B**
2.     **A**
3.     **B**
4.     **C**
5.     **C**
6.     **B**
7.     **B**
8.     **C**
9.     **A**
10.    **D**
11.    **D**
12.    **A**
13.    **A**
14.    **B**
15.    **D**
16.    **C**