





Use the visual model to solve each problem.


1) $0.7 \times 0.1 =$




2) $0.6 \times 0.6 =$




3) $0.7 \times 0.2 =$




4) $0.1 \times 0.8 =$




5) $0.8 \times 0.1 =$




6) $0.9 \times 0.3 =$




7) $0.7 \times 0.4 =$




8) $0.9 \times 0.9 =$




9) $0.4 \times 0.7 =$




10) $0.4 \times 0.4 =$




11) $0.3 \times 0.9 =$




12) $0.8 \times 0.8 =$




13) $0.4 \times 0.7 =$



14) $0.8 \times 0.8 =$



15) $0.2 \times 0.2 =$



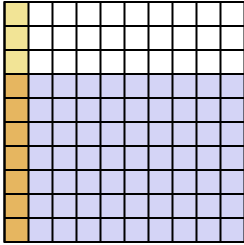
Answers

1. _____
2. _____
3. _____
4. _____
5. _____
6. _____
7. _____
8. _____
9. _____
10. _____
11. _____
12. _____
13. _____
14. _____
15. _____

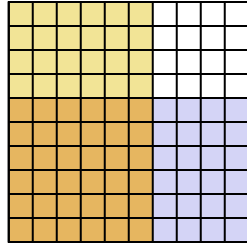


Use the visual model to solve each problem.

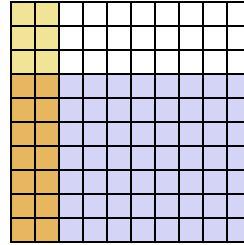
1) $0.7 \times 0.1 =$



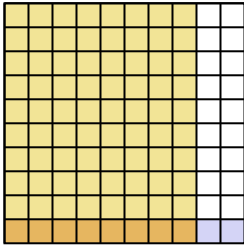
2) $0.6 \times 0.6 =$



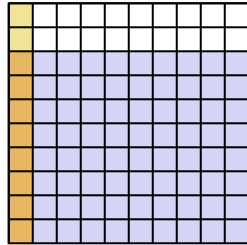
3) $0.7 \times 0.2 =$



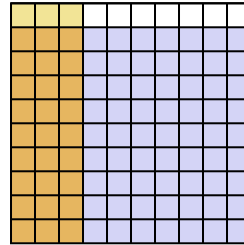
4) $0.1 \times 0.8 =$



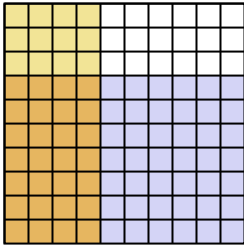
5) $0.8 \times 0.1 =$



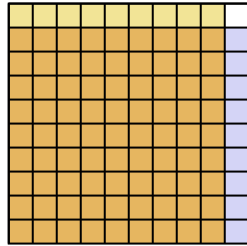
6) $0.9 \times 0.3 =$



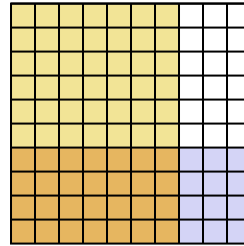
7) $0.7 \times 0.4 =$



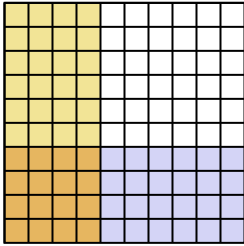
8) $0.9 \times 0.9 =$



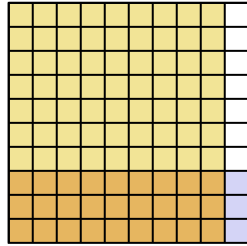
9) $0.4 \times 0.7 =$



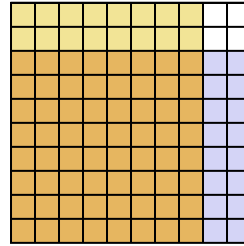
10) $0.4 \times 0.4 =$



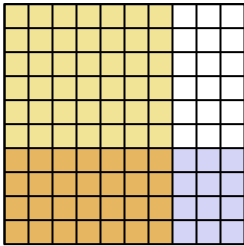
11) $0.3 \times 0.9 =$



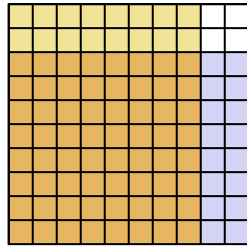
12) $0.8 \times 0.8 =$



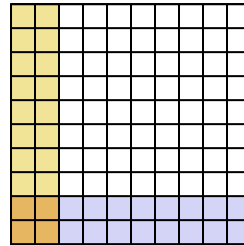
13) $0.4 \times 0.7 =$



14) $0.8 \times 0.8 =$



15) $0.2 \times 0.2 =$



Answers

1. $\frac{7}{100} = 0.07$

2. $\frac{36}{100} = 0.36$

3. $\frac{14}{100} = 0.14$

4. $\frac{8}{100} = 0.08$

5. $\frac{8}{100} = 0.08$

6. $\frac{27}{100} = 0.27$

7. $\frac{28}{100} = 0.28$

8. $\frac{81}{100} = 0.81$

9. $\frac{28}{100} = 0.28$

10. $\frac{16}{100} = 0.16$

11. $\frac{27}{100} = 0.27$

12. $\frac{64}{100} = 0.64$

13. $\frac{28}{100} = 0.28$

14. $\frac{64}{100} = 0.64$

15. $\frac{4}{100} = 0.04$