





Use the visual model to solve each problem.


1) $0.7 \times 0.1 =$




2) $0.4 \times 0.5 =$




3) $0.1 \times 0.9 =$




4) $0.2 \times 0.4 =$




5) $0.7 \times 0.8 =$




6) $0.8 \times 0.1 =$




7) $0.7 \times 0.3 =$




8) $0.8 \times 0.1 =$




9) $0.8 \times 0.6 =$




10) $0.5 \times 0.3 =$




11) $0.6 \times 0.9 =$




12) $0.3 \times 0.4 =$




13) $0.6 \times 0.3 =$



14) $0.2 \times 0.5 =$



15) $0.5 \times 0.5 =$



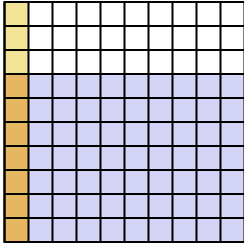
Answers

1. _____
2. _____
3. _____
4. _____
5. _____
6. _____
7. _____
8. _____
9. _____
10. _____
11. _____
12. _____
13. _____
14. _____
15. _____

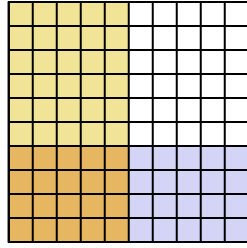


Use the visual model to solve each problem.

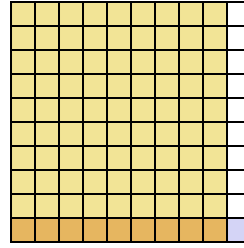
1) $0.7 \times 0.1 =$



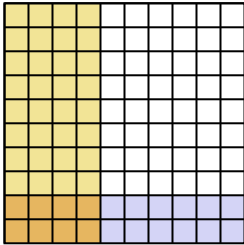
2) $0.4 \times 0.5 =$



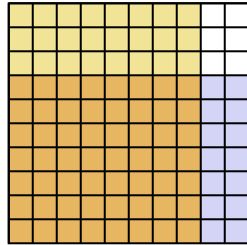
3) $0.1 \times 0.9 =$



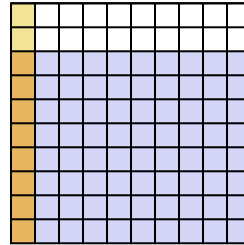
4) $0.2 \times 0.4 =$



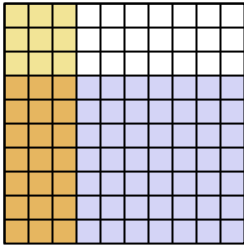
5) $0.7 \times 0.8 =$



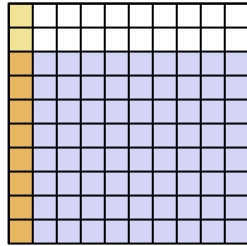
6) $0.8 \times 0.1 =$



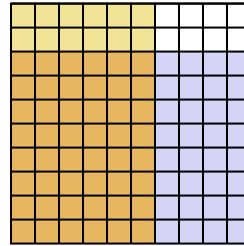
7) $0.7 \times 0.3 =$



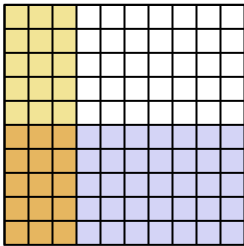
8) $0.8 \times 0.1 =$



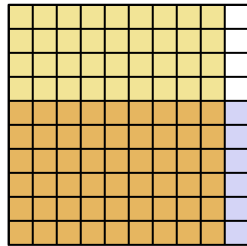
9) $0.8 \times 0.6 =$



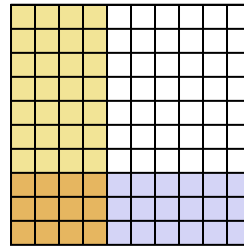
10) $0.5 \times 0.3 =$



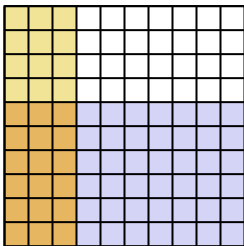
11) $0.6 \times 0.9 =$



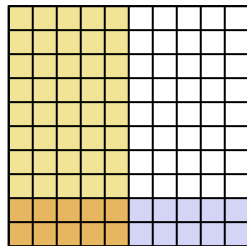
12) $0.3 \times 0.4 =$



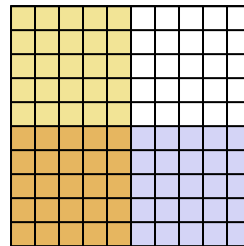
13) $0.6 \times 0.3 =$



14) $0.2 \times 0.5 =$



15) $0.5 \times 0.5 =$



Answers

1. $\frac{7}{100} = 0.07$

2. $\frac{20}{100} = 0.2$

3. $\frac{9}{100} = 0.09$

4. $\frac{8}{100} = 0.08$

5. $\frac{56}{100} = 0.56$

6. $\frac{8}{100} = 0.08$

7. $\frac{21}{100} = 0.21$

8. $\frac{8}{100} = 0.08$

9. $\frac{48}{100} = 0.48$

10. $\frac{15}{100} = 0.15$

11. $\frac{54}{100} = 0.54$

12. $\frac{12}{100} = 0.12$

13. $\frac{18}{100} = 0.18$

14. $\frac{10}{100} = 0.1$

15. $\frac{25}{100} = 0.25$