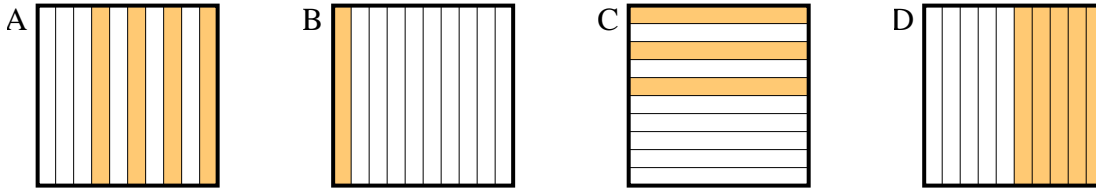




Determine which letter best answer the question.

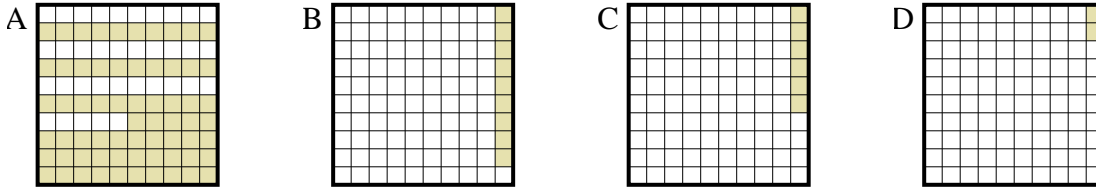
Answers

1) Which 10•1 grid is shaded to represent the decimal number that, when added to 0.5, results in a total of 1.00?



1. \_\_\_\_\_

2) Which 10•10 grid is shaded to represent the decimal number that, when added to 0.94, results in a total of 1.00?



2. \_\_\_\_\_

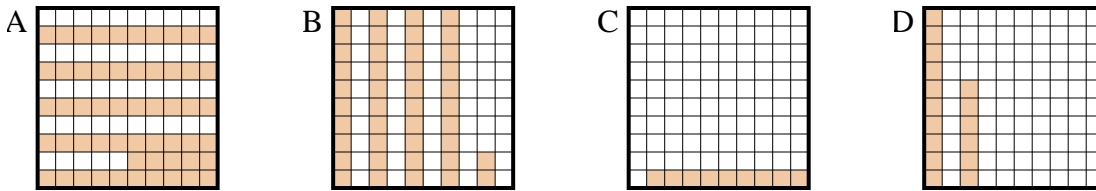
3. \_\_\_\_\_

4. \_\_\_\_\_

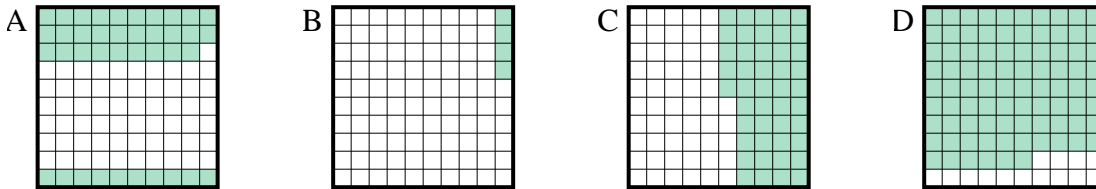
5. \_\_\_\_\_

6. \_\_\_\_\_

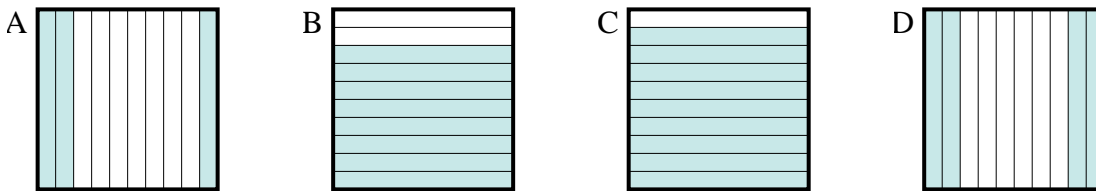
3) Which 10•10 grid is shaded to represent the decimal number that, when added to 0.91, results in a total of 1.00?



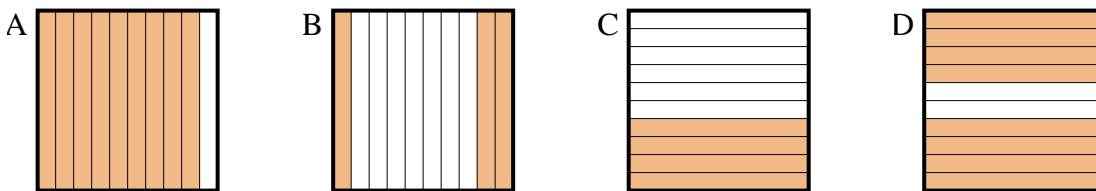
4) Which 10•10 grid is shaded to represent the decimal number that, when added to 0.96, results in a total of 1.00?



5) Which 10•1 grid is shaded to represent the decimal number that, when added to 0.6, results in a total of 1.00?



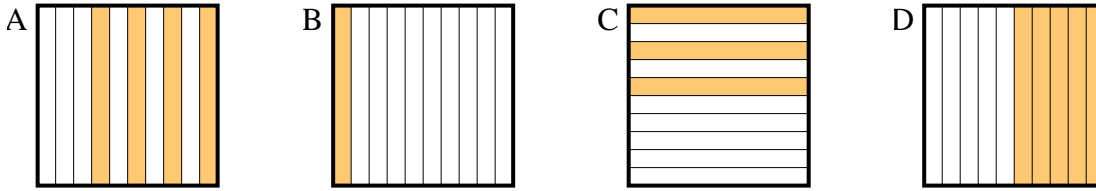
6) Which 10•1 grid is shaded to represent the decimal number that, when added to 0.7, results in a total of 1.00?



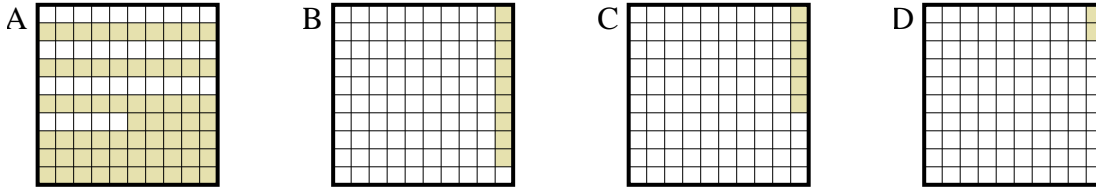


Determine which letter best answer the question.

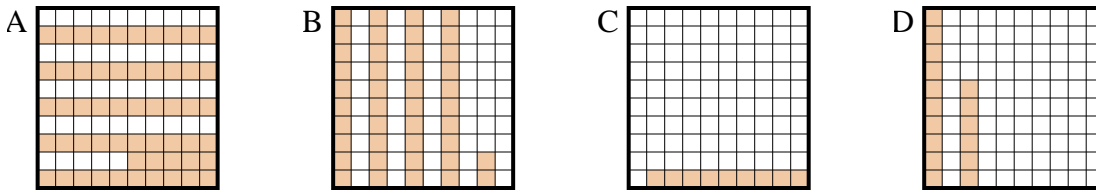
1) Which 10•1 grid is shaded to represent the decimal number that, when added to 0.5, results in a total of 1.00?



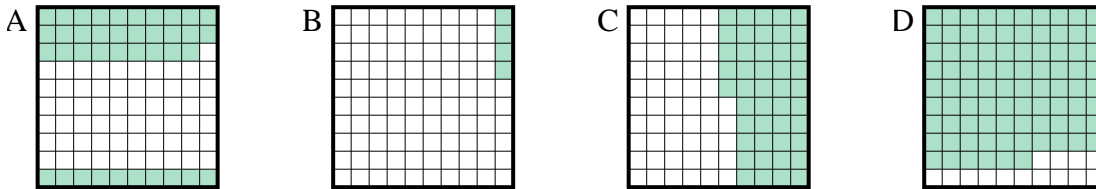
2) Which 10•10 grid is shaded to represent the decimal number that, when added to 0.94, results in a total of 1.00?



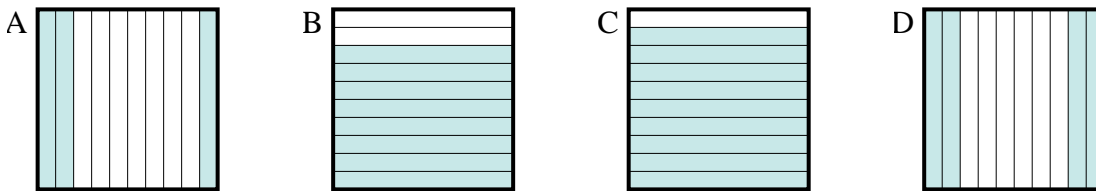
3) Which 10•10 grid is shaded to represent the decimal number that, when added to 0.91, results in a total of 1.00?



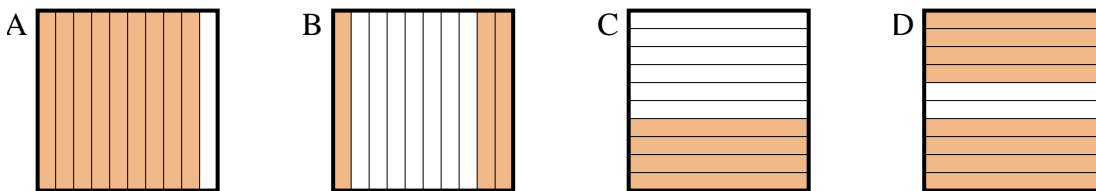
4) Which 10•10 grid is shaded to represent the decimal number that, when added to 0.96, results in a total of 1.00?



5) Which 10•1 grid is shaded to represent the decimal number that, when added to 0.6, results in a total of 1.00?



6) Which 10•1 grid is shaded to represent the decimal number that, when added to 0.7, results in a total of 1.00?



Answers

1.     **D**
2.     **C**
3.     **C**
4.     **B**
5.     **D**
6.     **B**