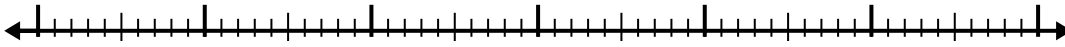


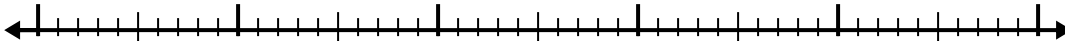


Use the number line to solve each problem.


1) $1.4 + 3.7 =$



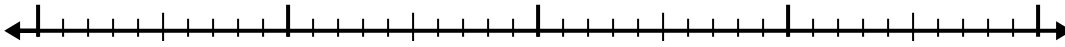
2) $7.2 + 2.6 =$



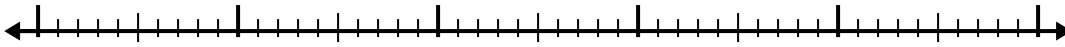
3) $4.4 + 3.1 =$



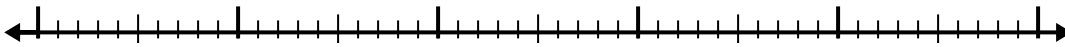
4) $8.9 + 1.5 =$



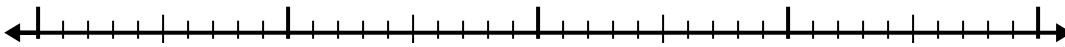
5) $2.2 + 2.7 =$



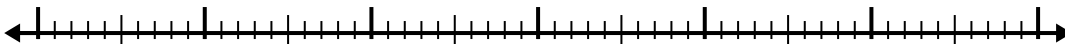
6) $8.6 + 2.6 =$



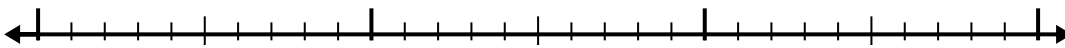
7) $1.8 + 1.3 =$



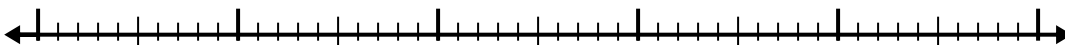
8) $4.7 + 3.8 =$



9) $8.7 + 1.2 =$



10) $7.4 + 3.3 =$



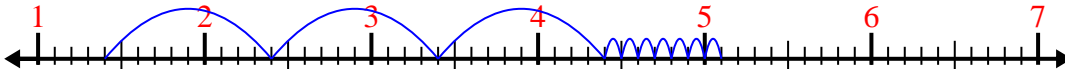
Answers

1. _____
2. _____
3. _____
4. _____
5. _____
6. _____
7. _____
8. _____
9. _____
10. _____

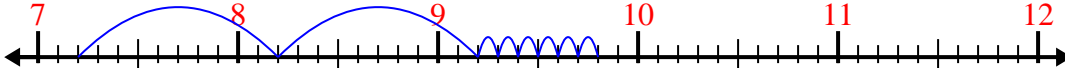


Use the number line to solve each problem.

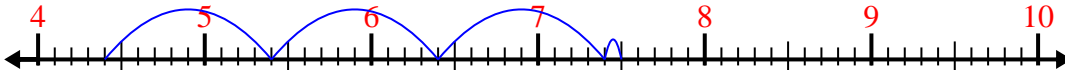
1) $1.4 + 3.7 =$



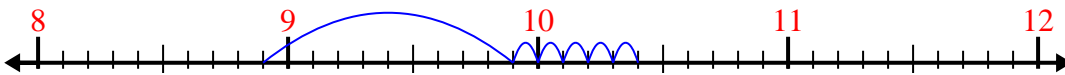
2) $7.2 + 2.6 =$



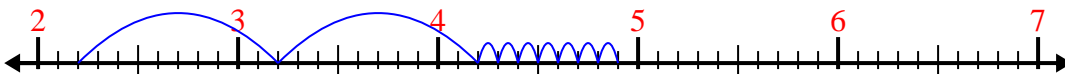
3) $4.4 + 3.1 =$



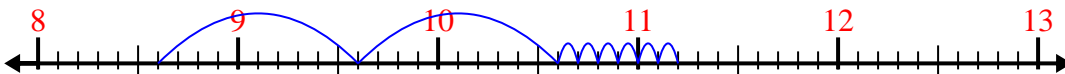
4) $8.9 + 1.5 =$



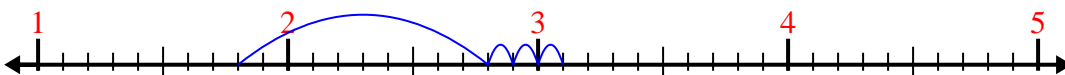
5) $2.2 + 2.7 =$



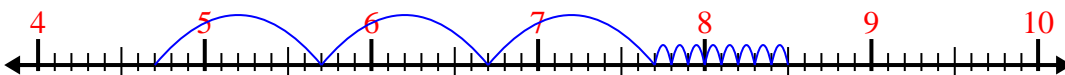
6) $8.6 + 2.6 =$



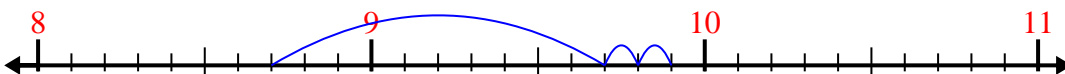
7) $1.8 + 1.3 =$



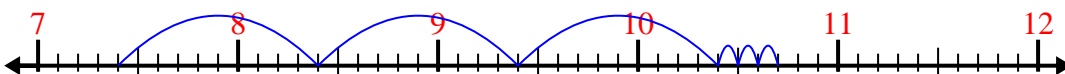
8) $4.7 + 3.8 =$



9) $8.7 + 1.2 =$



10) $7.4 + 3.3 =$



Answers

1. 5.1

2. 9.8

3. 7.5

4. 10.4

5. 4.9

6. 11.2

7. 3.1

8. 8.5

9. 9.9

10. 10.7