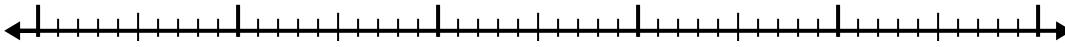




Use the number line to solve each problem.

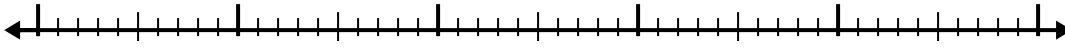
Answers

1)  $5.8 + 3.7 =$



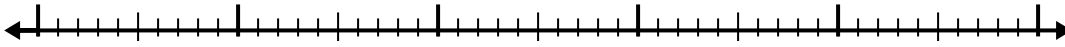
1. \_\_\_\_\_

2)  $8.2 + 2.1 =$



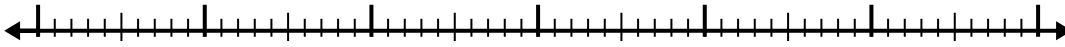
2. \_\_\_\_\_

3)  $8.6 + 3.9 =$



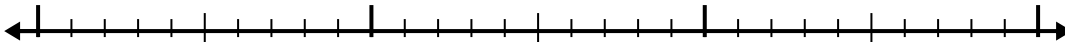
3. \_\_\_\_\_

4)  $3 + 3.6 =$



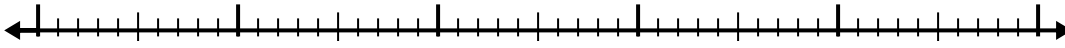
4. \_\_\_\_\_

5)  $1.3 + 1.1 =$



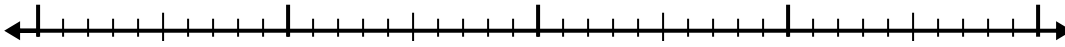
5. \_\_\_\_\_

6)  $4 + 2.7 =$



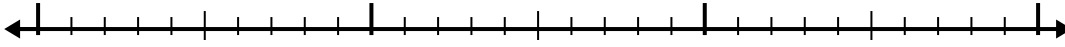
6. \_\_\_\_\_

7)  $8.5 + 1.7 =$



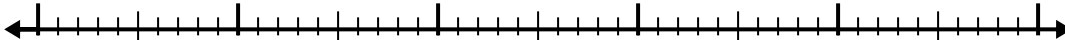
7. \_\_\_\_\_

8)  $1.6 + 1.6 =$



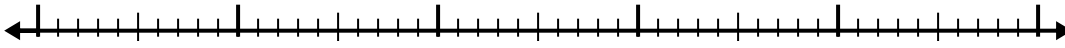
8. \_\_\_\_\_

9)  $6.8 + 2.8 =$



9. \_\_\_\_\_

10)  $7.7 + 3.7 =$

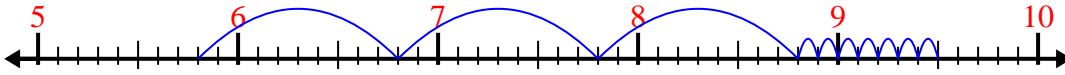


10. \_\_\_\_\_

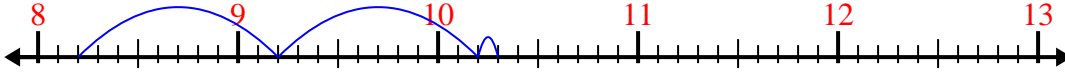


Use the number line to solve each problem.

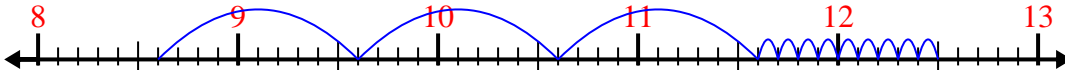
1)  $5.8 + 3.7 =$



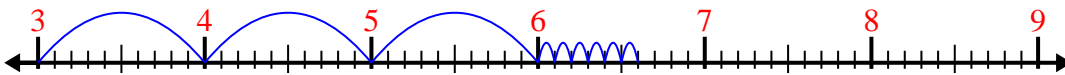
2)  $8.2 + 2.1 =$



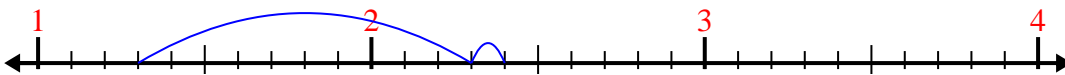
3)  $8.6 + 3.9 =$



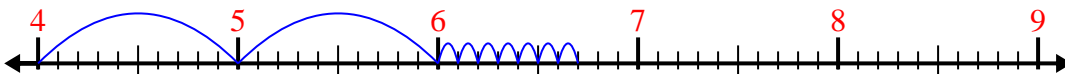
4)  $3 + 3.6 =$



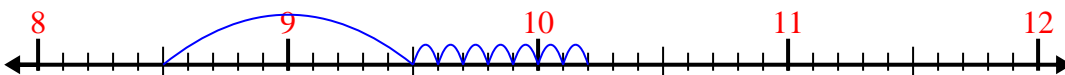
5)  $1.3 + 1.1 =$




6)  $4 + 2.7 =$



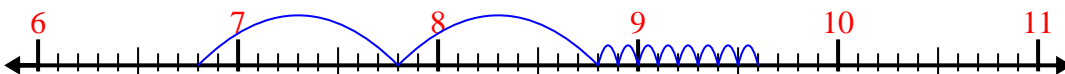
7)  $8.5 + 1.7 =$



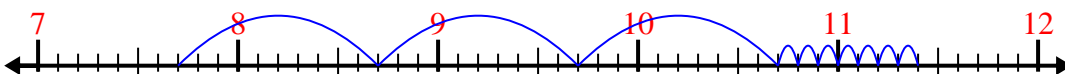
8)  $1.6 + 1.6 =$



9)  $6.8 + 2.8 =$



10)  $7.7 + 3.7 =$



Answers

1. 9.5
2. 10.3
3. 12.5
4. 6.6
5. 2.4
6. 6.7
7. 10.2
8. 3.2
9. 9.6
10. 11.4