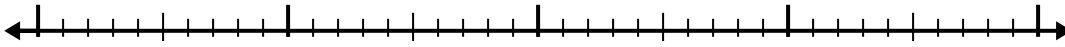





Use the number line to solve each problem.

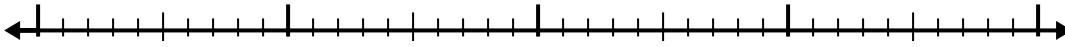
1) $8 + 2.3 =$



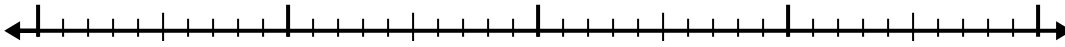
2) $2.1 + 3.6 =$



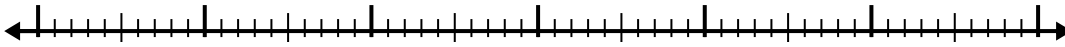
3) $5.8 + 1.3 =$




4) $4.9 + 1.8 =$



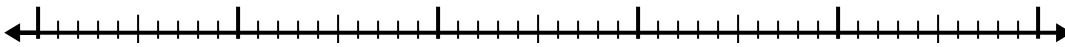
5) $4.9 + 3.3 =$



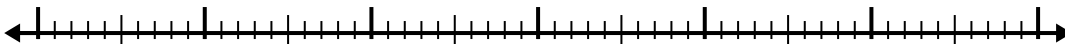
6) $8.8 + 3.4 =$



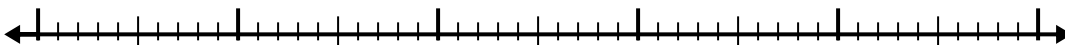
7) $2 + 2.9 =$



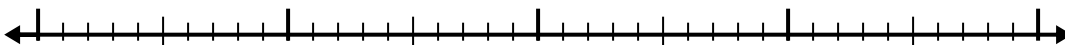
8) $7.8 + 3.4 =$



9) $4.8 + 2.4 =$



10) $6.3 + 2.8 =$



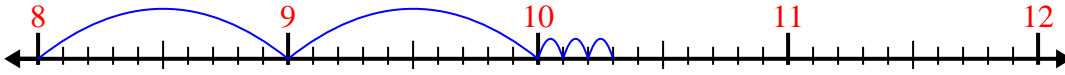
Answers

- 1. _____
- 2. _____
- 3. _____
- 4. _____
- 5. _____
- 6. _____
- 7. _____
- 8. _____
- 9. _____
- 10. _____

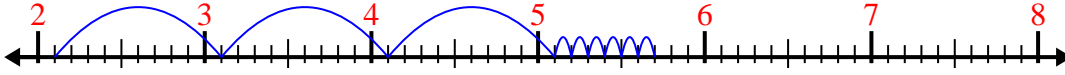


Use the number line to solve each problem.

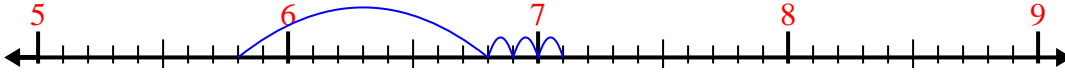
1) $8 + 2.3 =$



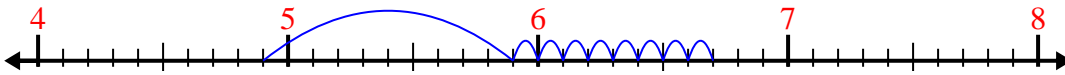
2) $2.1 + 3.6 =$



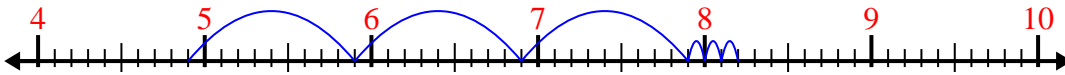
3) $5.8 + 1.3 =$



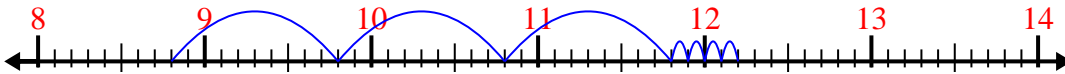
4) $4.9 + 1.8 =$



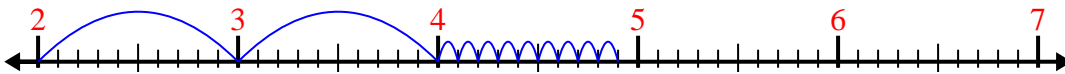
5) $4.9 + 3.3 =$



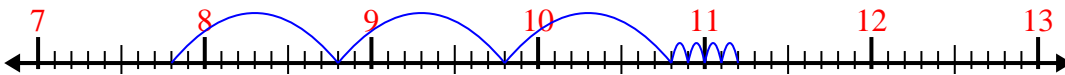
6) $8.8 + 3.4 =$




7) $2 + 2.9 =$



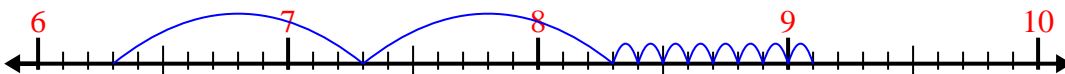
8) $7.8 + 3.4 =$



9) $4.8 + 2.4 =$



10) $6.3 + 2.8 =$



Answers

1. 10.3

2. 5.7

3. 7.1

4. 6.7

5. 8.2

6. 12.2

7. 4.9

8. 11.2

9. 7.2

10. 9.1