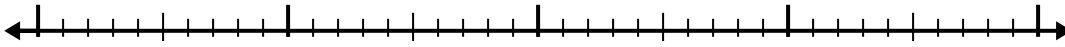


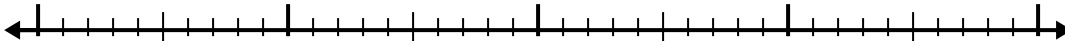


Use the number line to solve each problem.


1) $2.5 + 1.5 =$



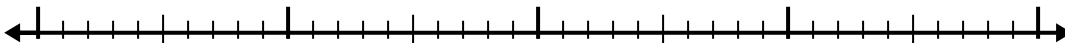
2) $6.9 + 2.5 =$



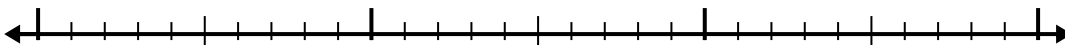
3) $8.6 + 3.1 =$



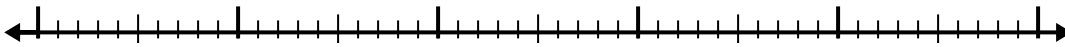
4) $7.9 + 1.4 =$



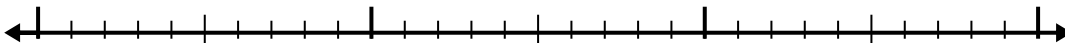
5) $4.4 + 1.1 =$



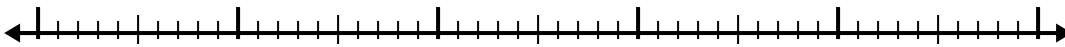
6) $1.2 + 2.2 =$




7) $3.6 + 1.5 =$



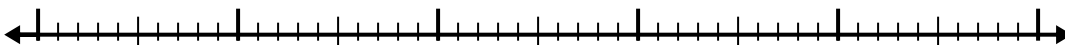
8) $5 + 2.9 =$



9) $5.4 + 3.7 =$



10) $4.8 + 2.2 =$



Answers

1. _____

2. _____

3. _____

4. _____

5. _____

6. _____

7. _____

8. _____

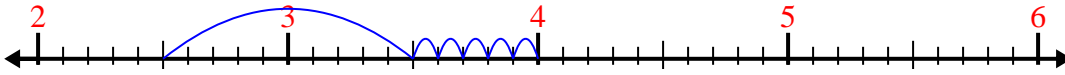
9. _____

10. _____

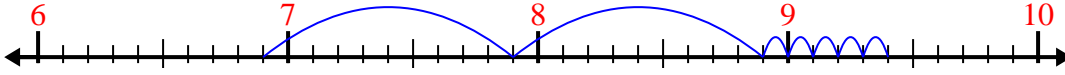


Use the number line to solve each problem.

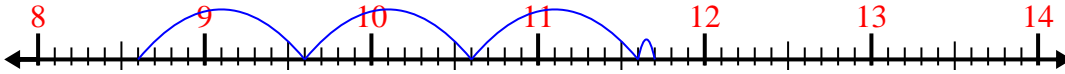
1) $2.5 + 1.5 =$



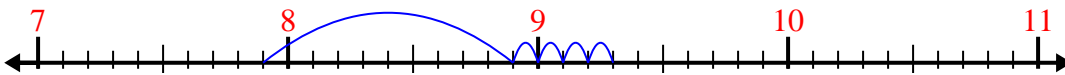
2) $6.9 + 2.5 =$



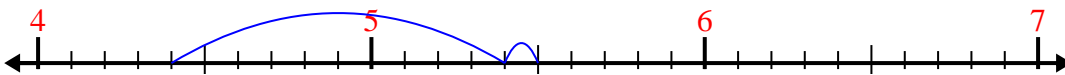
3) $8.6 + 3.1 =$



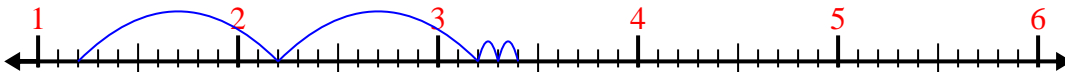
4) $7.9 + 1.4 =$



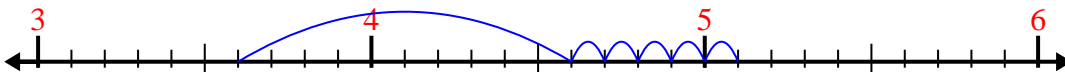
5) $4.4 + 1.1 =$



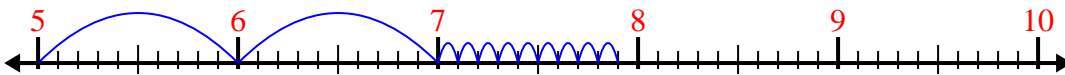
6) $1.2 + 2.2 =$



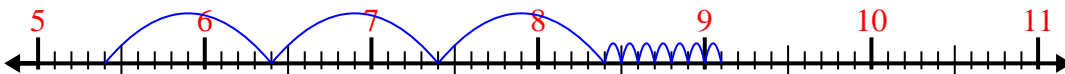
7) $3.6 + 1.5 =$



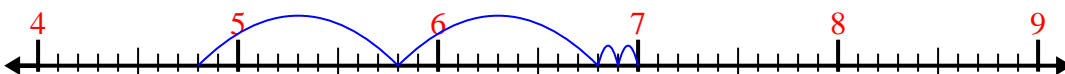
8) $5 + 2.9 =$



9) $5.4 + 3.7 =$



10) $4.8 + 2.2 =$



Answers

1. 4.0
2. 9.4
3. 11.7
4. 9.3
5. 5.5
6. 3.4
7. 5.1
8. 7.9
9. 9.1
10. 7.0