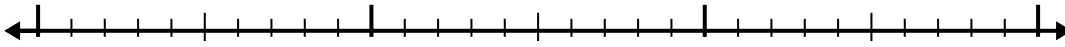


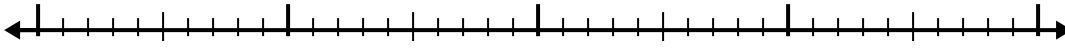


Use the number line to solve each problem.


1) $5.8 + 1.4 =$



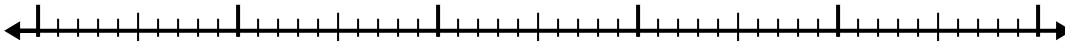
2) $2.9 + 1.5 =$



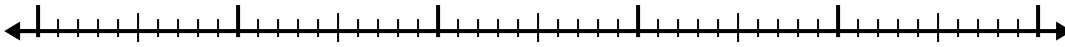
3) $3 + 3.5 =$




4) $2.5 + 2.9 =$



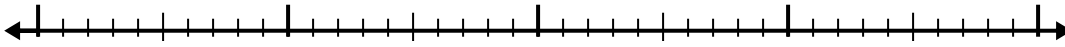
5) $2.8 + 2.8 =$



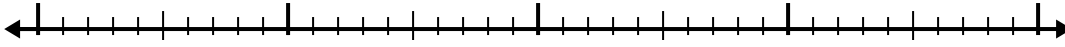
6) $1.9 + 3.6 =$



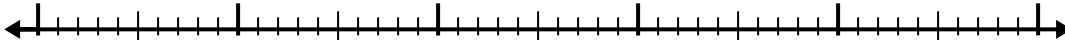
7) $7.9 + 1.6 =$



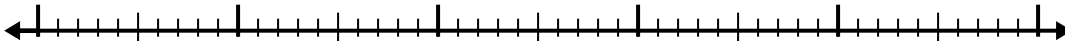
8) $3.1 + 2.7 =$



9) $3.4 + 3.9 =$



10) $6.8 + 2.5 =$



Answers

1. _____

2. _____

3. _____

4. _____

5. _____

6. _____

7. _____

8. _____

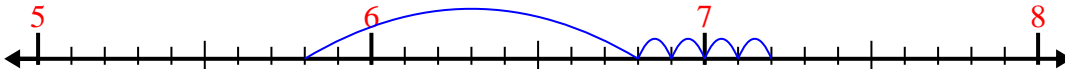
9. _____

10. _____

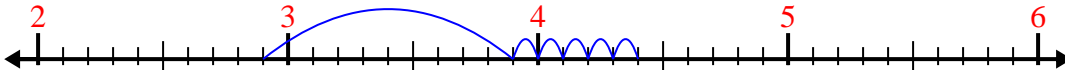


Use the number line to solve each problem.

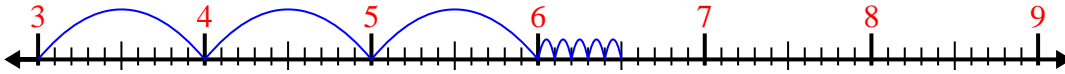
1) $5.8 + 1.4 =$



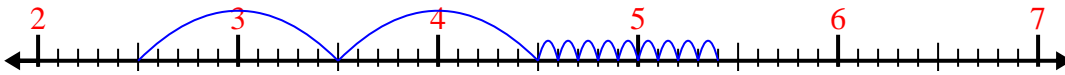
2) $2.9 + 1.5 =$



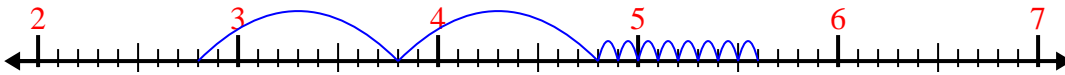
3) $3 + 3.5 =$



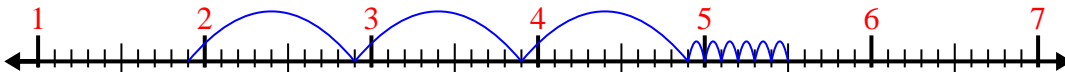
4) $2.5 + 2.9 =$



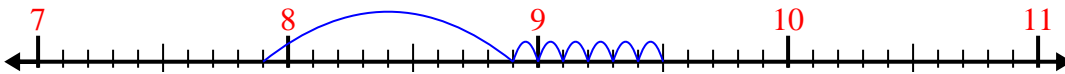
5) $2.8 + 2.8 =$



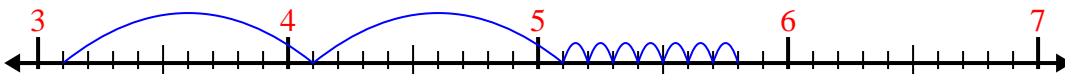
6) $1.9 + 3.6 =$



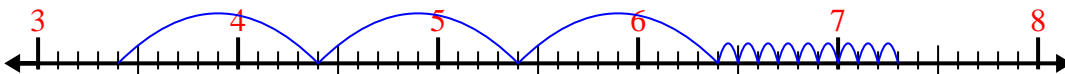
7) $7.9 + 1.6 =$



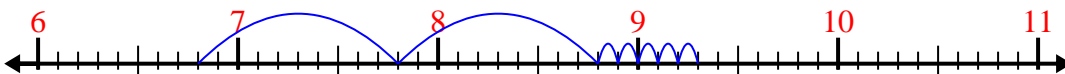
8) $3.1 + 2.7 =$



9) $3.4 + 3.9 =$



10) $6.8 + 2.5 =$



Answers

1. 7.2

2. 4.4

3. 6.5

4. 5.4

5. 5.6

6. 5.5

7. 9.5

8. 5.8

9. 7.3

10. 9.3