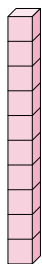


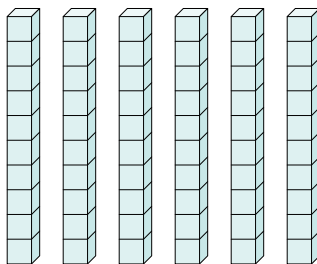


Determine the quantity of groups of ten. Then find the total number of smaller blocks.

Ex)



1)



Answers

Ex. 1 10

1. _____

2. _____

3. _____

4. _____

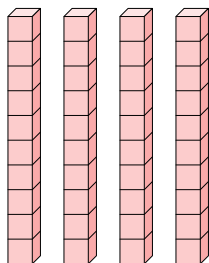
5. _____

6. _____

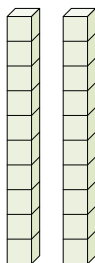
7. _____

8. _____

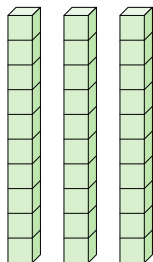
2)



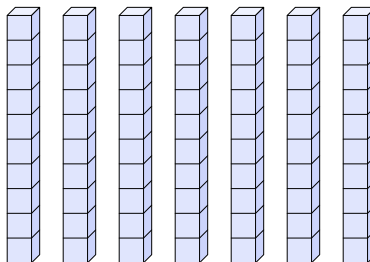
3)



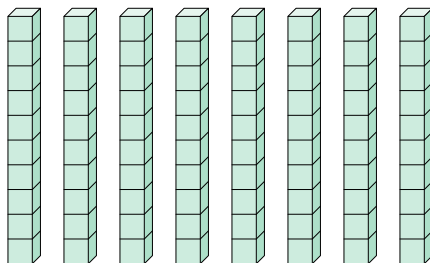
4)



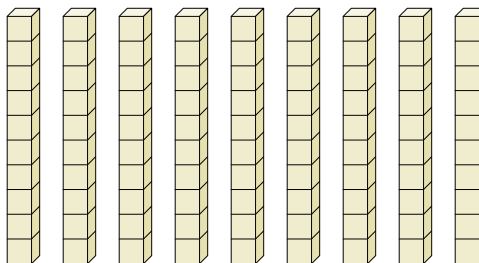
5)




6)



7)



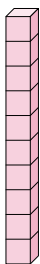
8)



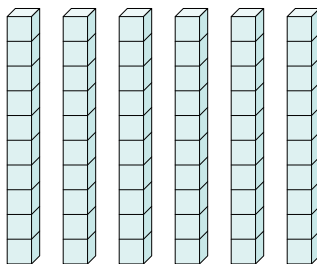


Determine the quantity of groups of ten. Then find the total number of smaller blocks.

Ex)



1)



Answers

Ex. 1 10

1. 6 60

2. 4 40

3. 2 20

4. 3 30

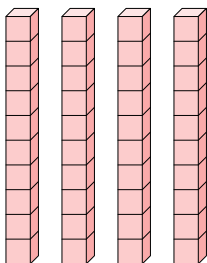
5. 7 70

6. 8 80

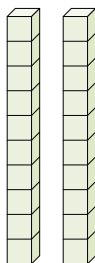
7. 9 90

8. 5 50

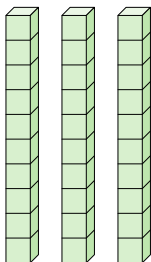
2)



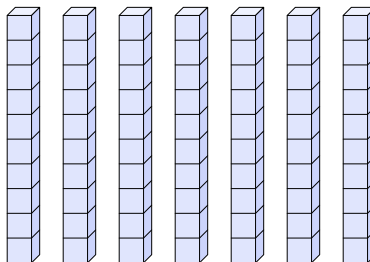
3)



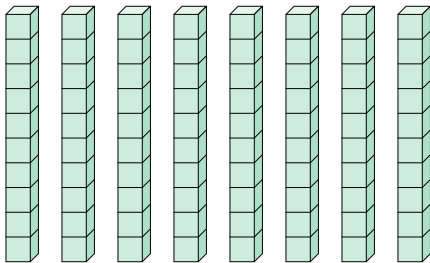
4)



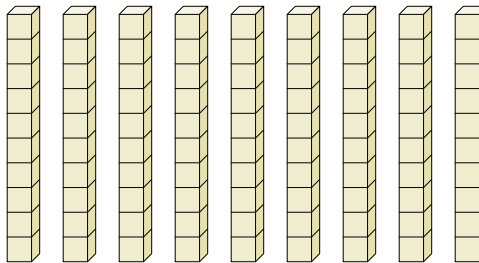
5)



6)



7)



8)

