



Determine which letter best represents the volume.

Answers

Cup

A cup is about the amount of milk you get from the cafeteria.



Pint

A pint is about the amount you get in a large glass.
1 pint = 2 cups



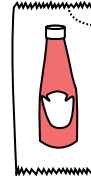
Quart

A quart is about the amount you get in a large milk container.
1 quart = 2 pints



Gallon

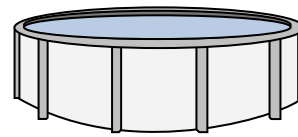
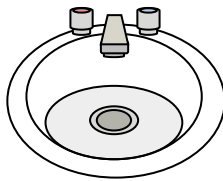
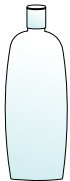
A gallon is the amount that comes in the large plastic container.
1 gallon = 4 quarts



- 1) Glue in a bottle
 A. 3 Gallons
 B. 1 Pint
 C. 2 Quarts
 D. 0.5 Cup

- 2) Paint in a can
 A. 1 Cup
 B. 1 Gallon
 C. 3 Ounces
 D. 0.5 Pint

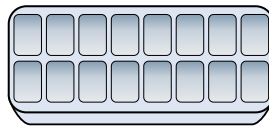

- 3) Ketchup in a packet
 A. 2 Quarts
 B. 0.5 Gallon
 C. 1.5 Pints
 D. Less than 1 Cup



- 4) Shampoo in a bottle
 A. 1 cup
 B. 2 Pints
 C. 0.5 Gallon
 D. 2 Yards

- 5) Water in bathroom sink
 A. 2 Pints
 B. 2 Cups
 C. 2 Ounces
 D. 2 Gallons

- 6) Water in a pool
 A. 20 Gallons
 B. 3,000 Gallons
 C. 5,000 Feet
 D. 25 Cups



- 7) Sand a wheel barrow holds
 A. 4 Cups
 B. 45 Gallons
 C. 1,000 Grams
 D. 8 Quarts

- 8) Water in an ice tray
 A. 4 Pints
 B. 10 Gallons
 C. 1 Gallon
 D. 1 Pint

- 9) Gas tank in a car
 A. 4 Pints
 B. 15 Gallons
 C. 3 Quarts
 D. 16 Cups

1. _____
2. _____
3. _____
4. _____
5. _____
6. _____
7. _____
8. _____
9. _____



Determine which letter best represents the volume.

Cup

A cup is about the amount of milk you get from the cafeteria.



Pint

A pint is about the amount you get in a large glass.
1 pint = 2 cups



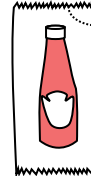
Quart

A quart is about the amount you get in a large milk container.
1 quart = 2 pints



Gallon

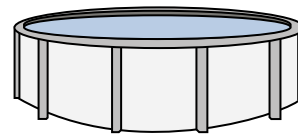
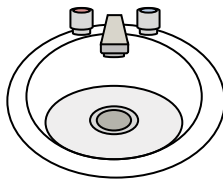
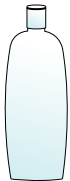
A gallon is the amount that comes in the large plastic container.
1 gallon = 4 quarts



- 1) Glue in a bottle
 A. 3 Gallons
 B. 1 Pint
 C. 2 Quarts
 D. 0.5 Cup

- 2) Paint in a can
 A. 1 Cup
 B. 1 Gallon
 C. 3 Ounces
 D. 0.5 Pint


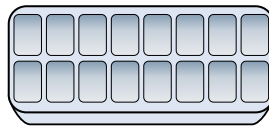

- 3) Ketchup in a packet
 A. 2 Quarts
 B. 0.5 Gallon
 C. 1.5 Pints
 D. Less than 1 Cup



- 4) Shampoo in a bottle
 A. 1 cup
 B. 2 Pints
 C. 0.5 Gallon
 D. 2 Yards

- 5) Water in bathroom sink
 A. 2 Pints
 B. 2 Cups
 C. 2 Ounces
 D. 2 Gallons

- 6) Water in a pool
 A. 20 Gallons
 B. 3,000 Gallons
 C. 5,000 Feet
 D. 25 Cups



- 7) Sand a wheel barrow holds
 A. 4 Cups
 B. 45 Gallons
 C. 1,000 Grams
 D. 8 Quarts

- 8) Water in an ice tray
 A. 4 Pints
 B. 10 Gallons
 C. 1 Gallon
 D. 1 Pint

- 9) Gas tank in a car
 A. 4 Pints
 B. 15 Gallons
 C. 3 Quarts
 D. 16 Cups

Answers

1. **D**
 2. **B**
 3. **D**
 4. **B**
 5. **D**
 6. **B**
 7. **B**
 8. **D**
 9. **B**