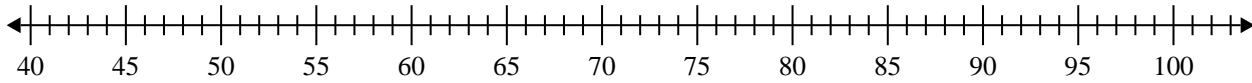


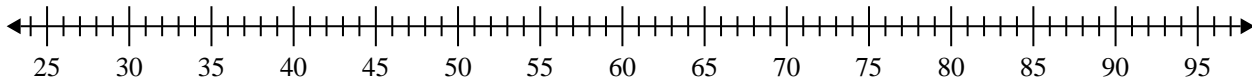


Create a box plot from the set of numbers.

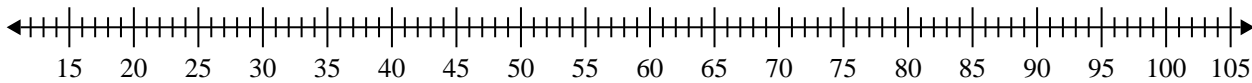
- 1) 76 , 63 , 60 , 82 , 92 , 45 , 95 , 80 , 75



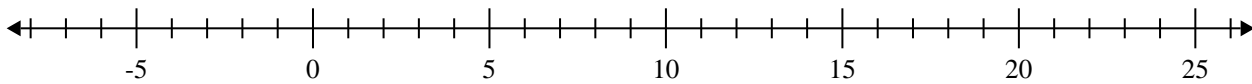
- 2) 84 , 91 , 37 , 79 , 46 , 50 , 81 , 65



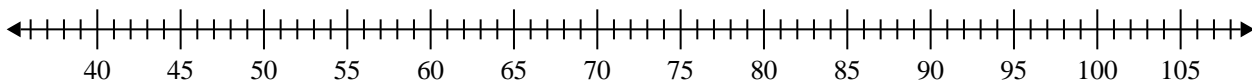
- 3) 20 , 86 , 41 , 62 , 64 , 87 , 45 , 87 , 36 , 90 , 30 , 87



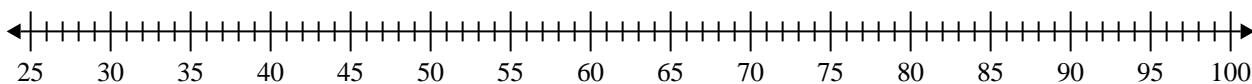
- 4) 5 , 20 , 10 , 14 , 6 , 9 , 10 , 15



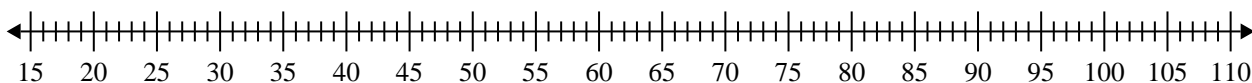
- 5) 72 , 61 , 95 , 65 , 88 , 66 , 45 , 61



- 6) 94 , 84 , 65 , 42 , 57 , 86 , 39 , 66



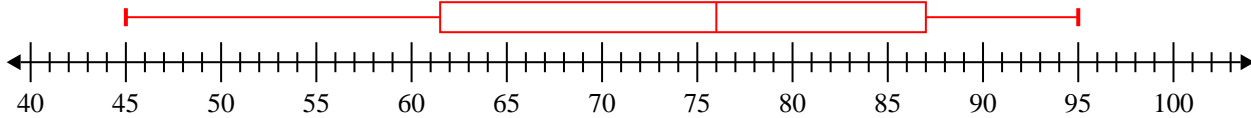
- 7) 99 , 37 , 40 , 87 , 32 , 29 , 63



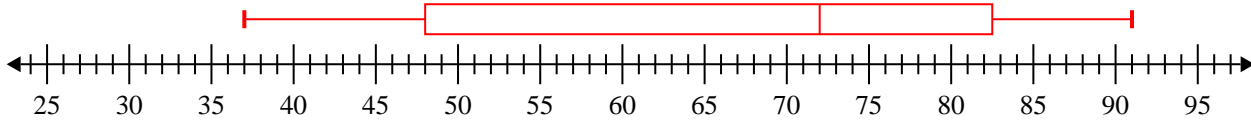


Create a box plot from the set of numbers.

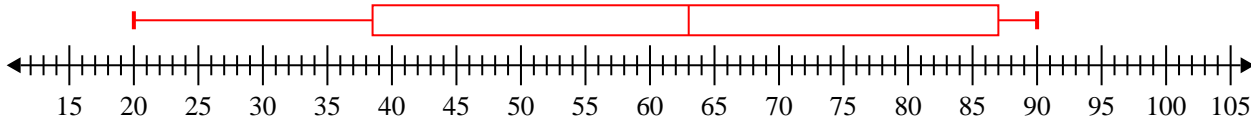
1) 76, 63, 60, 82, 92, 45, 95, 80, 75 **Min=45 Max=95 q1=61.5 Q2=76 q3=87**



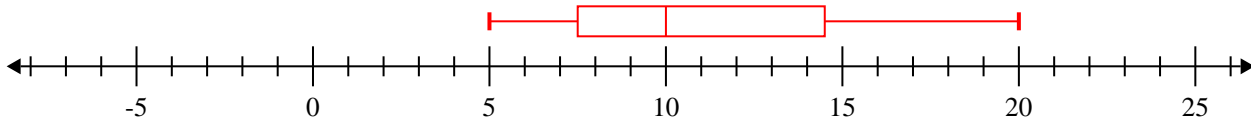
2) 84, 91, 37, 79, 46, 50, 81, 65 **Min=37 Max=91 q1=48 Q2=72 q3=82.5**



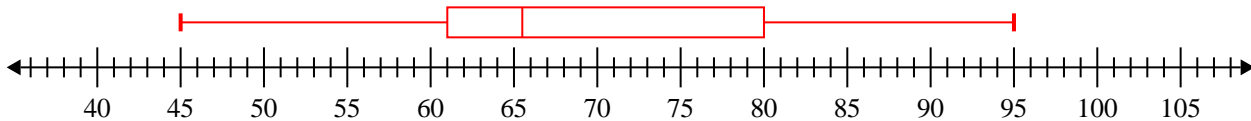
3) 20, 86, 41, 62, 64, 87, 45, 87, 36, 90, 30, 87 **Min=20 Max=90 q1=38.5 Q2=63 q3=87**



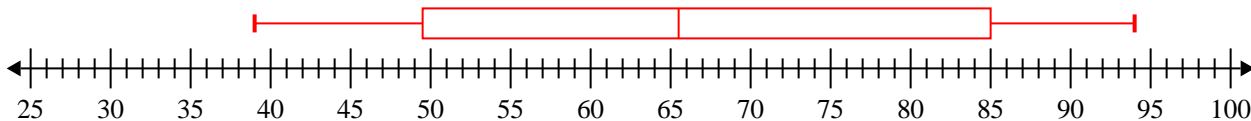
4) 5, 20, 10, 14, 6, 9, 10, 15 **Min=5 Max=20 q1=7.5 Q2=10 q3=14.5**



5) 72, 61, 95, 65, 88, 66, 45, 61 **Min=45 Max=95 q1=61 Q2=65.5 q3=80**



6) 94, 84, 65, 42, 57, 86, 39, 66 **Min=39 Max=94 q1=49.5 Q2=65.5 q3=85**



7) 99, 37, 40, 87, 32, 29, 63 **Min=29 Max=99 q1=32 Q2=40 q3=87**

