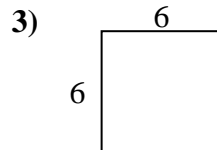
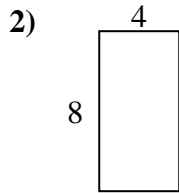
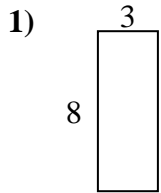


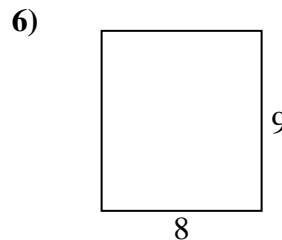
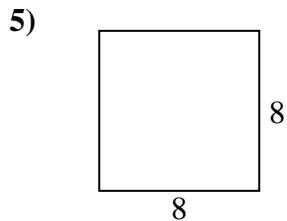
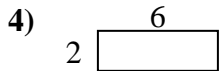


Find the perimeter and area of each figure. Each figure is in centimeters (cm). Not to scale.

Answers



1. _____



2. _____

3. _____

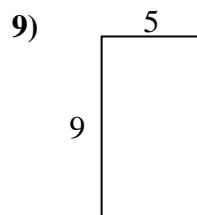
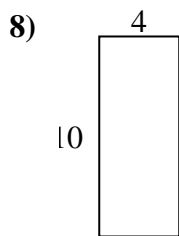
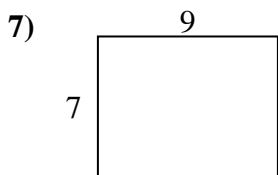
4. _____

5. _____

6. _____

7. _____

8. _____

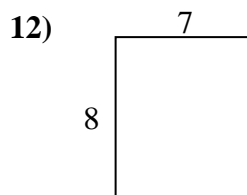
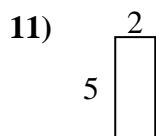
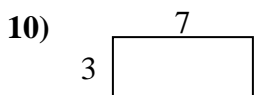


9. _____

10. _____

11. _____

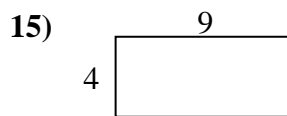
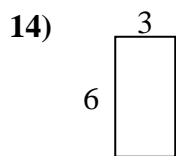
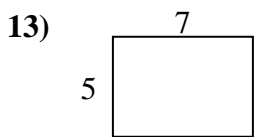
12. _____



13. _____

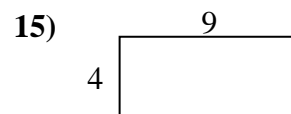
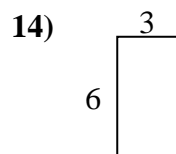
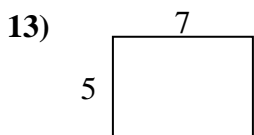
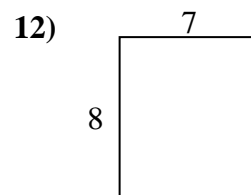
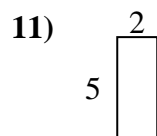
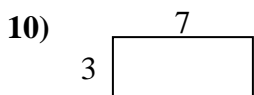
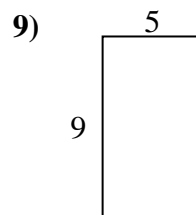
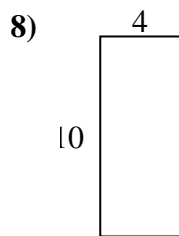
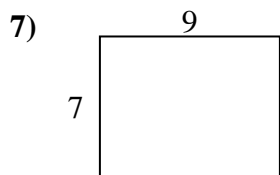
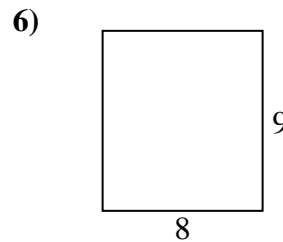
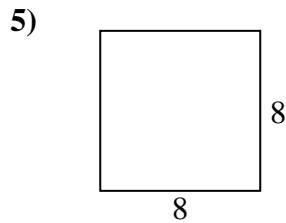
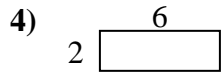
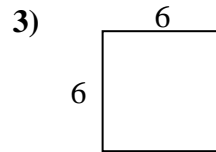
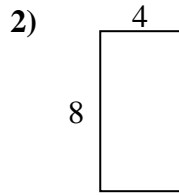
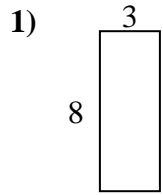
14. _____

15. _____





Find the perimeter and area of each figure. Each figure is in centimeters (cm). Not to scale.



Answers

1. 22 cm 24 cm²
2. 24 cm 32 cm²
3. 24 cm 36 cm²
4. 16 cm 12 cm²
5. 32 cm 64 cm²
6. 34 cm 72 cm²
7. 32 cm 63 cm²
8. 28 cm 40 cm²
9. 28 cm 45 cm²
10. 20 cm 21 cm²
11. 14 cm 10 cm²
12. 30 cm 56 cm²
13. 24 cm 35 cm²
14. 18 cm 18 cm²
15. 26 cm 36 cm²