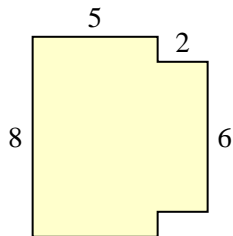


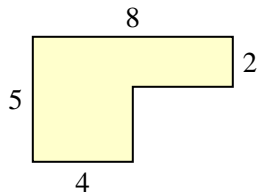


Find the total area of each shape. Measurement is in millimeters (mm). Not to scale.

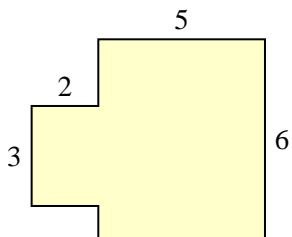
1)



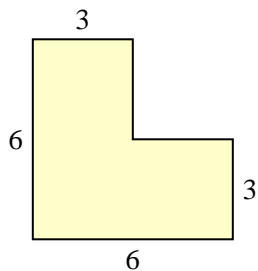
2)



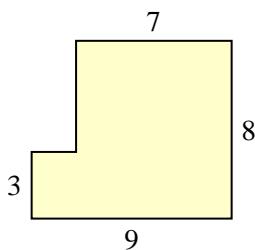
3)



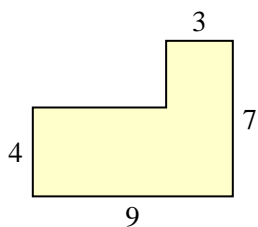
4)



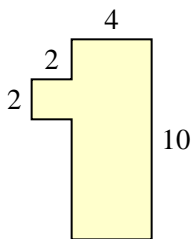
5)



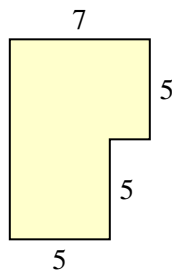
6)



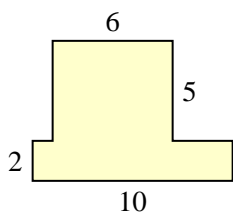
7)



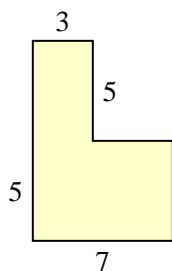
8)



9)



10)

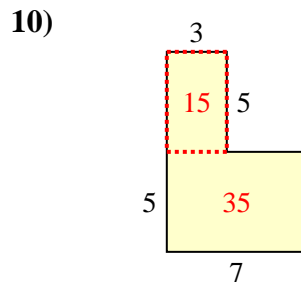
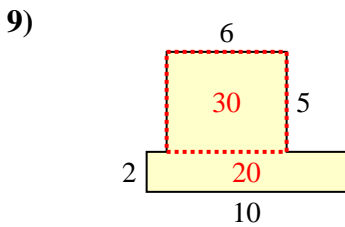
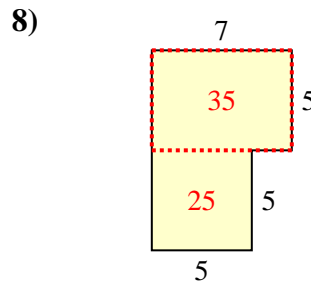
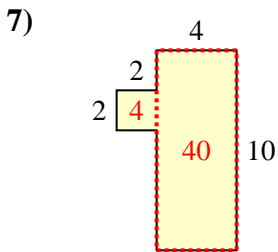
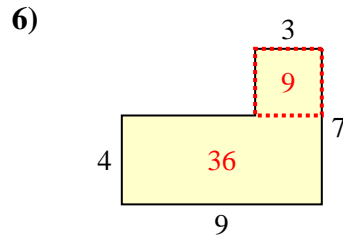
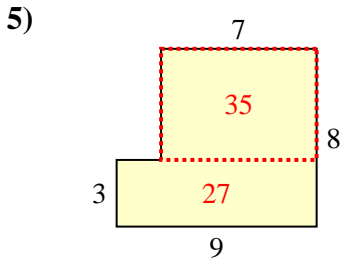
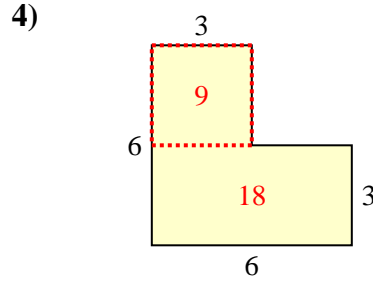
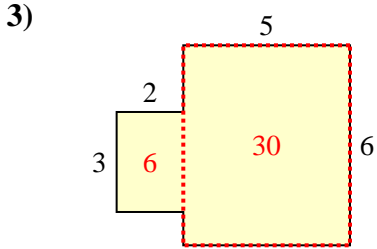
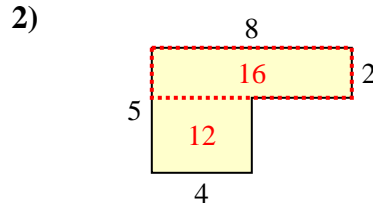
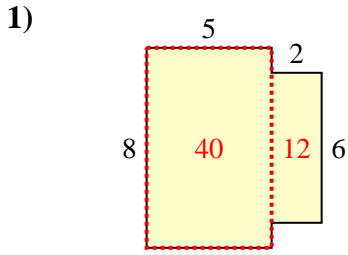


Answers

- 1. _____
- 2. _____
- 3. _____
- 4. _____
- 5. _____
- 6. _____
- 7. _____
- 8. _____
- 9. _____
- 10. _____



Find the total area of each shape. Measurement is in millimeters (mm). Not to scale.



Answers

1. 52 mm²
2. 28 mm²
3. 36 mm²
4. 27 mm²
5. 62 mm²
6. 45 mm²
7. 44 mm²
8. 60 mm²
9. 50 mm²
10. 50 mm²