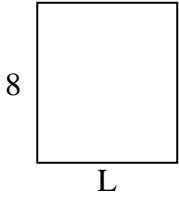


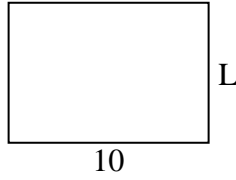


Determine the value of 'L'. Lengths are in cm (not to scale).

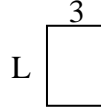
1) perimeter = 30



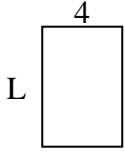
2) perimeter = 34




3) perimeter = 14



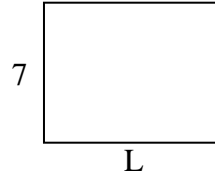
4) perimeter = 20



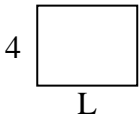
5) perimeter = 26



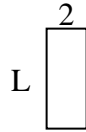
6) perimeter = 32



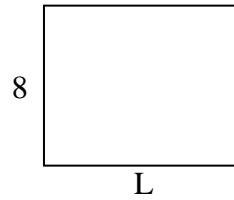
7) perimeter = 18



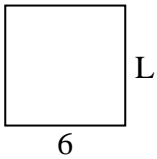
8) perimeter = 14




9) perimeter = 36



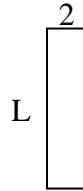
10) perimeter = 24



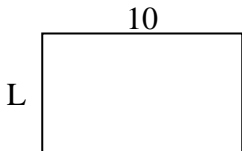
11) perimeter = 26



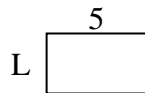
12) perimeter = 20



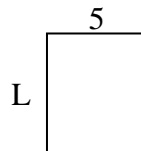
13) perimeter = 32



14) perimeter = 16



15) perimeter = 22



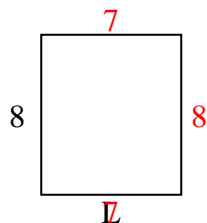
Answers

1. _____
2. _____
3. _____
4. _____
5. _____
6. _____
7. _____
8. _____
9. _____
10. _____
11. _____
12. _____
13. _____
14. _____
15. _____

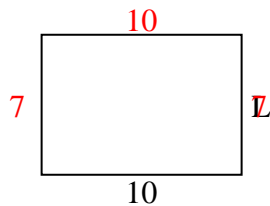


Determine the value of 'L'. Lengths are in cm (not to scale).

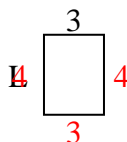
1) perimeter = 30



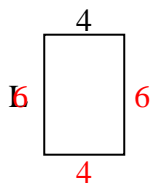
2) perimeter = 34




3) perimeter = 14



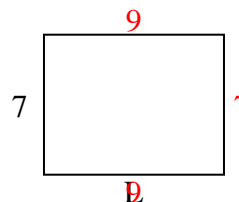
4) perimeter = 20



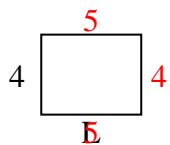
5) perimeter = 26



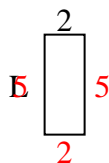
6) perimeter = 32



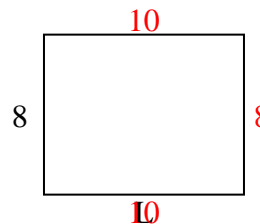
7) perimeter = 18



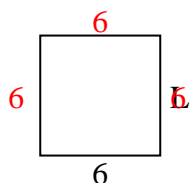
8) perimeter = 14



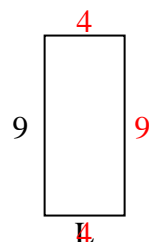
9) perimeter = 36



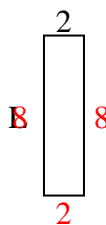
10) perimeter = 24



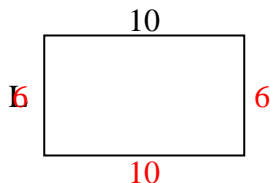
11) perimeter = 26



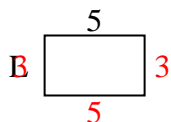
12) perimeter = 20



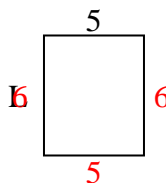
13) perimeter = 32



14) perimeter = 16



15) perimeter = 22



Answers

1. 7 cm
2. 7 cm
3. 4 cm
4. 6 cm
5. 3 cm
6. 9 cm
7. 5 cm
8. 5 cm
9. 10 cm
10. 6 cm
11. 4 cm
12. 8 cm
13. 6 cm
14. 3 cm
15. 6 cm