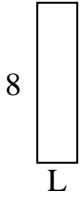


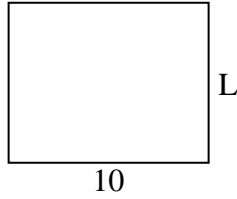


Determine the value of 'L'. Lengths are in cm (not to scale).

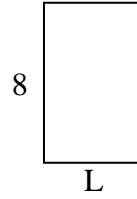
1) perimeter = 20



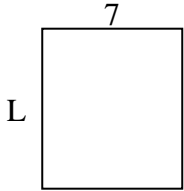
2) perimeter = 36



3) perimeter = 26



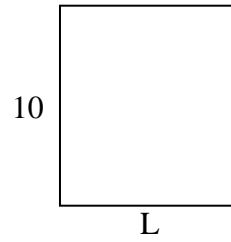
4) perimeter = 30



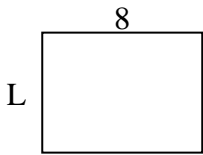
5) perimeter = 12




6) perimeter = 38



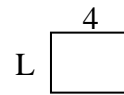
7) perimeter = 28



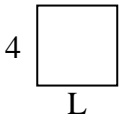
8) perimeter = 26



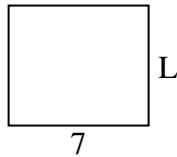
9) perimeter = 14



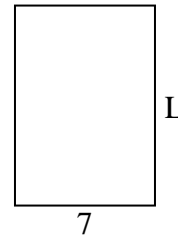
10) perimeter = 16



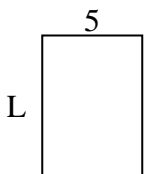
11) perimeter = 26



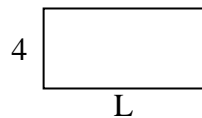
12) perimeter = 34



13) perimeter = 24



14) perimeter = 24



15) perimeter = 8



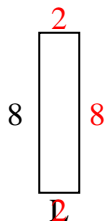
Answers

1. _____
2. _____
3. _____
4. _____
5. _____
6. _____
7. _____
8. _____
9. _____
10. _____
11. _____
12. _____
13. _____
14. _____
15. _____

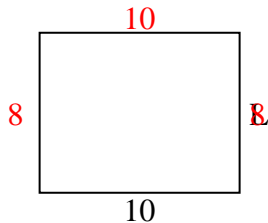


Determine the value of 'L'. Lengths are in cm (not to scale).

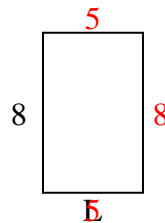
1) perimeter = 20



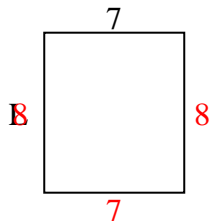
2) perimeter = 36



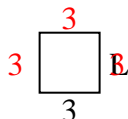
3) perimeter = 26



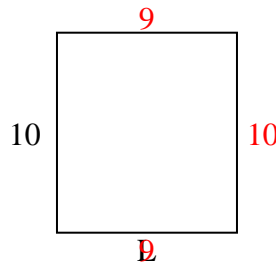
4) perimeter = 30



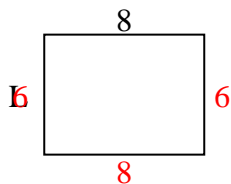
5) perimeter = 12



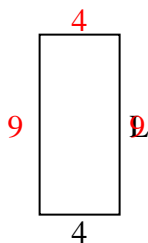
6) perimeter = 38



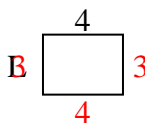
7) perimeter = 28



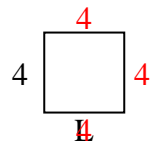
8) perimeter = 26



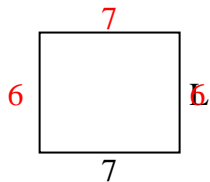
9) perimeter = 14



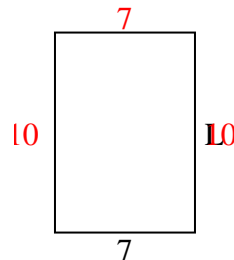
10) perimeter = 16



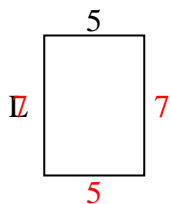
11) perimeter = 26



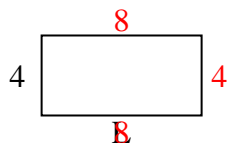
12) perimeter = 34



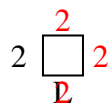
13) perimeter = 24



14) perimeter = 24



15) perimeter = 8



Answers

1. 2 cm

2. 8 cm

3. 5 cm

4. 8 cm

5. 3 cm

6. 9 cm

7. 6 cm

8. 9 cm

9. 3 cm

10. 4 cm

11. 6 cm

12. 10 cm

13. 7 cm

14. 8 cm

15. 2 cm