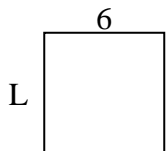




Determine the value of 'L'. Lengths are in cm (not to scale).

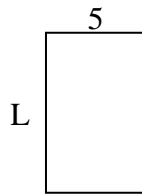
1) perimeter = 24



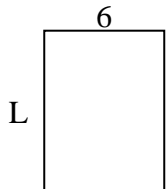
2) perimeter = 22



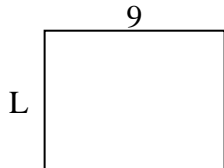
3) perimeter = 26



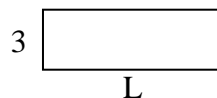
4) perimeter = 28



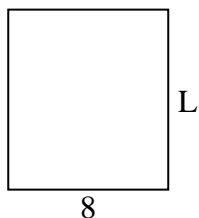
5) perimeter = 32



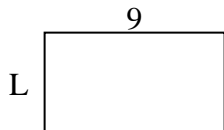
6) perimeter = 24



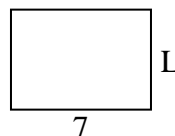
7) perimeter = 34



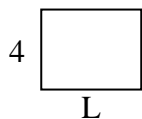
8) perimeter = 28



9) perimeter = 24




10) perimeter = 18



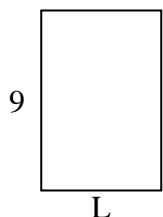
11) perimeter = 20



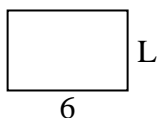
12) perimeter = 30



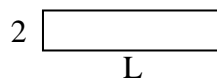
13) perimeter = 30



14) perimeter = 20



15) perimeter = 22



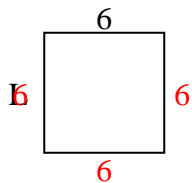
Answers

1. _____
2. _____
3. _____
4. _____
5. _____
6. _____
7. _____
8. _____
9. _____
10. _____
11. _____
12. _____
13. _____
14. _____
15. _____

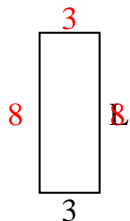


Determine the value of 'L'. Lengths are in cm (not to scale).

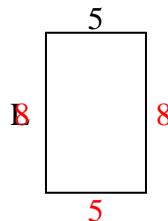
1) perimeter = 24



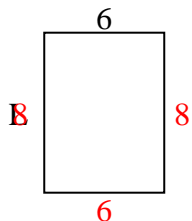
2) perimeter = 22



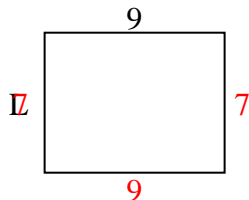
3) perimeter = 26



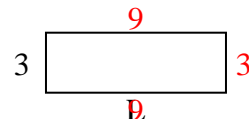
4) perimeter = 28



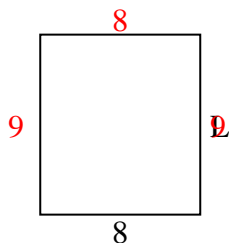
5) perimeter = 32



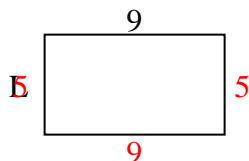
6) perimeter = 24



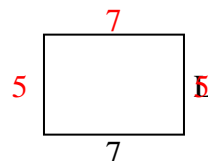
7) perimeter = 34



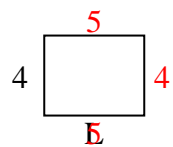
8) perimeter = 28



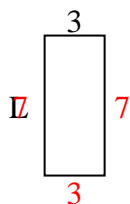
9) perimeter = 24



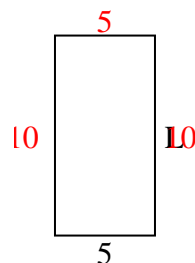
10) perimeter = 18



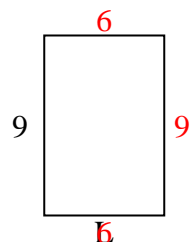
11) perimeter = 20



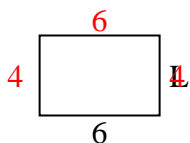
12) perimeter = 30



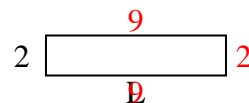
13) perimeter = 30



14) perimeter = 20



15) perimeter = 22



Answers

1. 6 cm

2. 8 cm

3. 8 cm

4. 8 cm

5. 7 cm

6. 9 cm

7. 9 cm

8. 5 cm

9. 5 cm

10. 5 cm

11. 7 cm

12. 10 cm

13. 6 cm

14. 4 cm

15. 9 cm