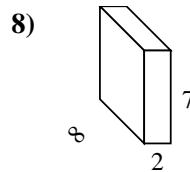
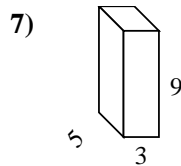
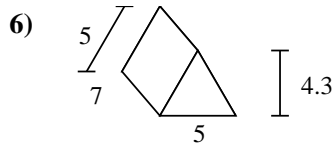
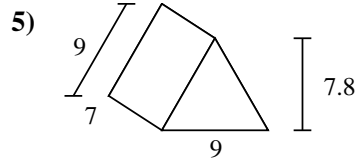
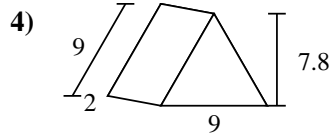
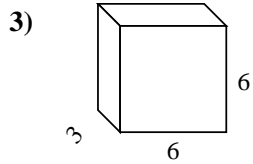
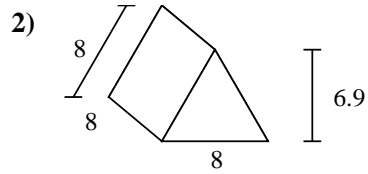
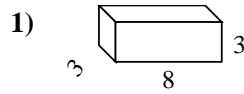
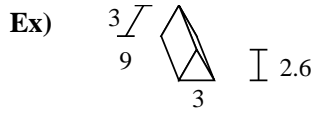




Find the surface area of each figure. Units are in cm (not to scale).



Answers

Ex. 88.8 cm²

1. _____

2. _____

3. _____

4. _____

5. _____

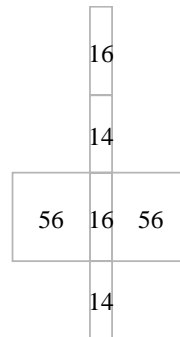
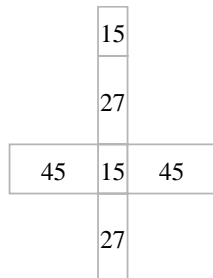
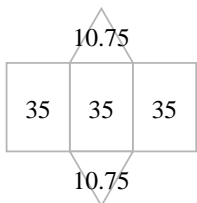
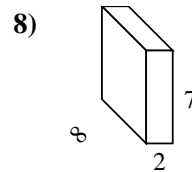
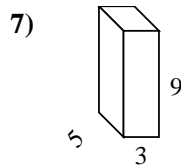
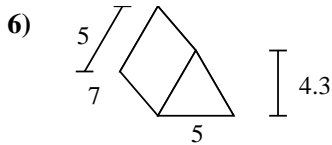
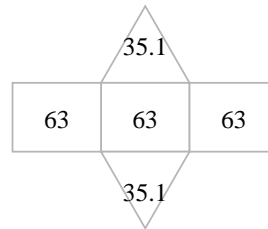
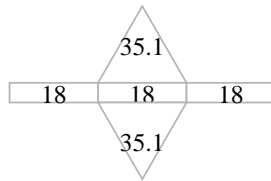
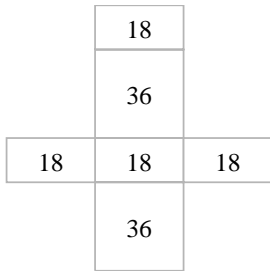
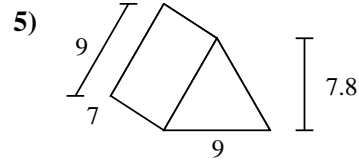
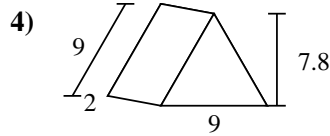
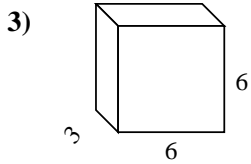
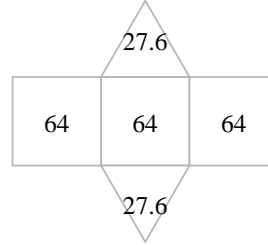
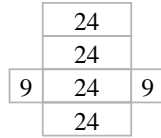
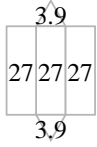
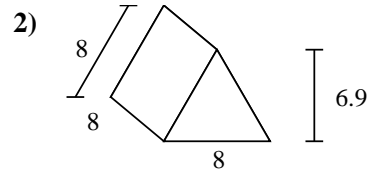
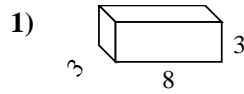
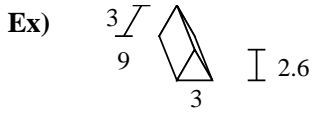
6. _____

7. _____

8. _____



Find the surface area of each figure. Units are in cm (not to scale).



Answers

Ex. **88.8 cm²**

1. **114 cm²**

2. **247.2 cm²**

3. **144 cm²**

4. **124.2 cm²**

5. **259.2 cm²**

6. **126.5 cm²**

7. **174 cm²**

8. **172 cm²**