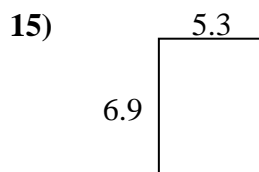
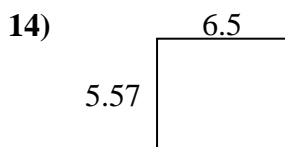
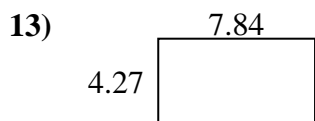
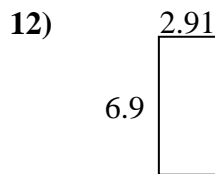
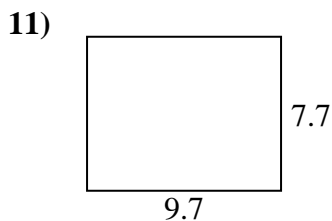
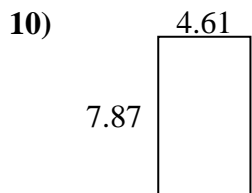
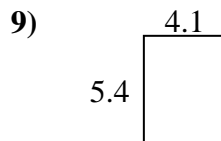
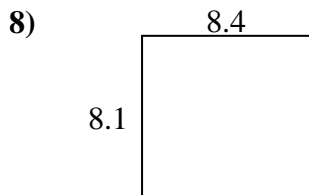
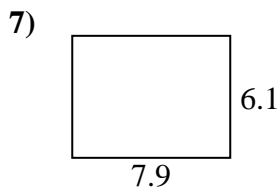
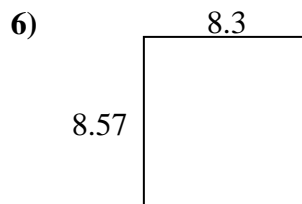
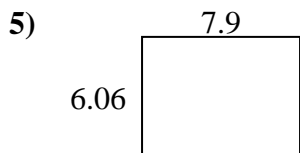
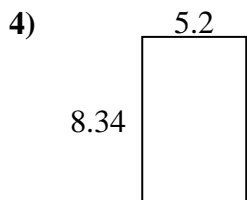
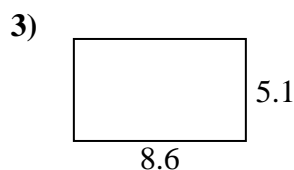
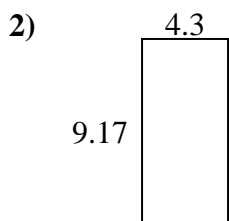
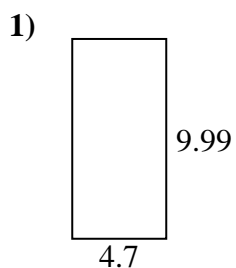




Find the perimeter and area of each figure. Answer to the nearest 10th.

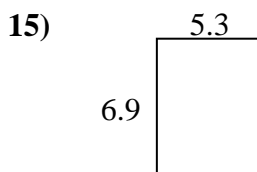
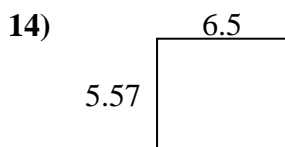
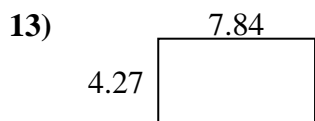
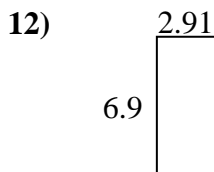
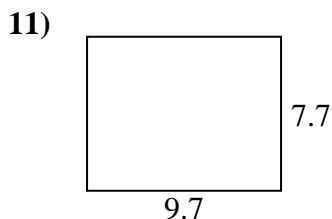
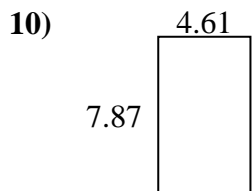
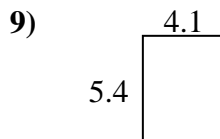
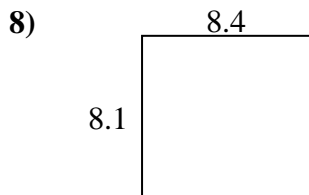
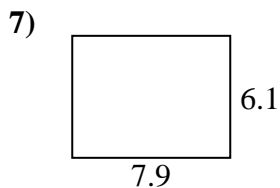
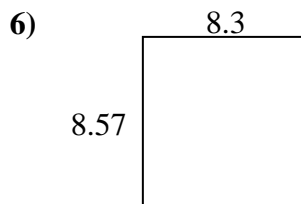
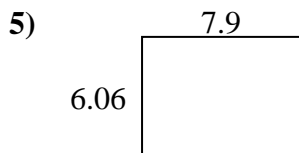
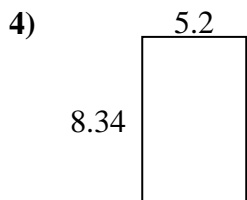
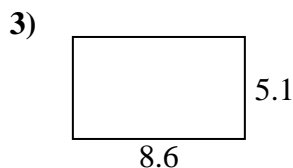
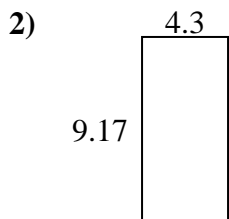
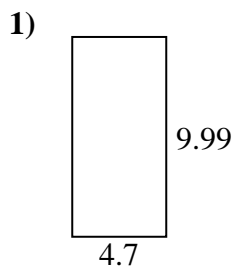


Answers

1. _____
2. _____
3. _____
4. _____
5. _____
6. _____
7. _____
8. _____
9. _____
10. _____
11. _____
12. _____
13. _____
14. _____
15. _____



Find the perimeter and area of each figure. Answer to the nearest 10th.

**Answers**

1.	<u>47.0</u>	<u>29.4</u>
2.	<u>39.4</u>	<u>26.9</u>
3.	<u>43.9</u>	<u>27.4</u>
4.	<u>43.4</u>	<u>27.1</u>
5.	<u>47.9</u>	<u>27.9</u>
6.	<u>71.1</u>	<u>33.7</u>
7.	<u>48.2</u>	<u>28.0</u>
8.	<u>68.0</u>	<u>33.0</u>
9.	<u>22.1</u>	<u>19.0</u>
10.	<u>36.3</u>	<u>25.0</u>
11.	<u>74.7</u>	<u>34.8</u>
12.	<u>20.1</u>	<u>19.6</u>
13.	<u>33.5</u>	<u>24.2</u>
14.	<u>36.2</u>	<u>24.1</u>
15.	<u>36.6</u>	<u>24.4</u>