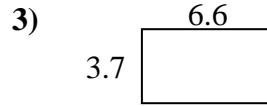
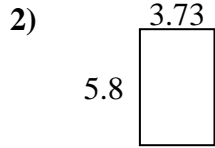
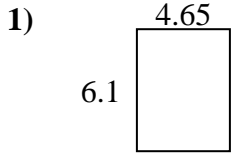




Find the perimeter and area of each figure. Each figure is in centimeters (cm). Not to scale.

Answers



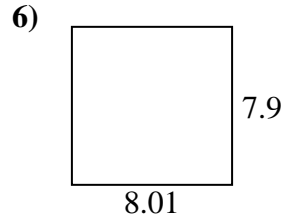
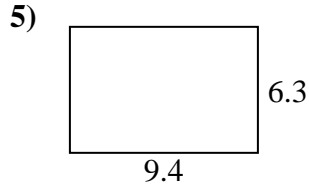
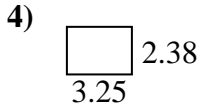
1. _____

2. _____

3. _____

4. _____

5. _____

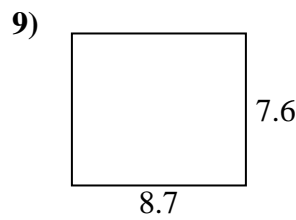
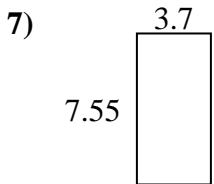


6. _____

7. _____

8. _____

9. _____

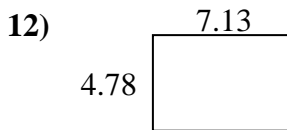
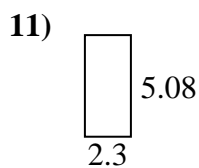
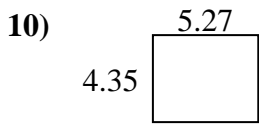


10. _____

11. _____

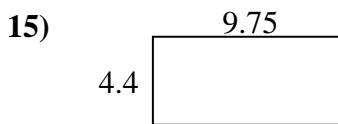
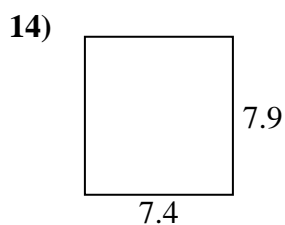
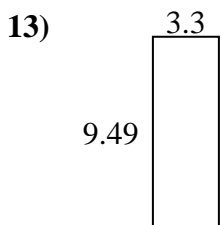
12. _____

13. _____



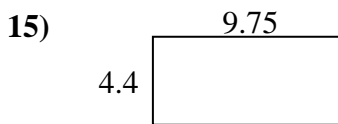
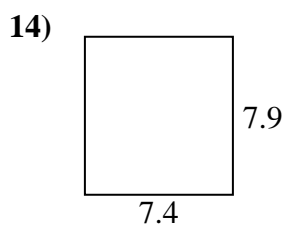
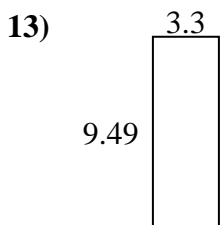
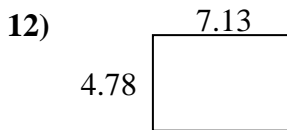
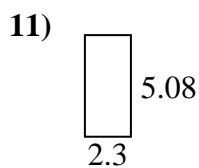
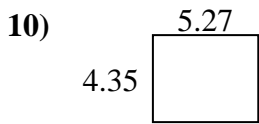
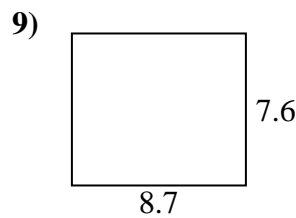
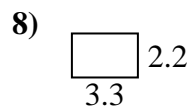
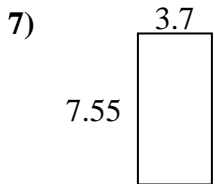
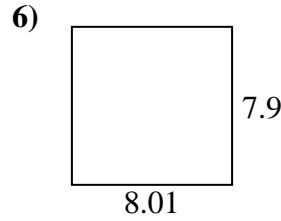
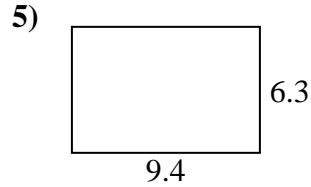
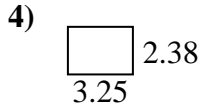
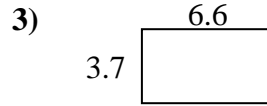
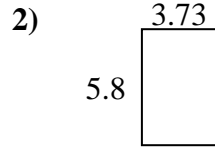
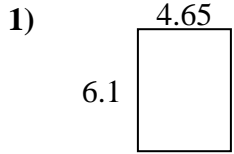
14. _____

15. _____





Find the perimeter and area of each figure. Each figure is in centimeters (cm). Not to scale.



Answers

1. 21.5 cm 28.365 cm²
2. 19.06 cm 21.634 cm²
3. 20.6 cm 24.42 cm²
4. 11.26 cm 7.735 cm²
5. 31.4 cm 59.22 cm²
6. 31.82 cm 63.279 cm²
7. 22.5 cm 27.935 cm²
8. 11 cm 7.26 cm²
9. 32.6 cm 66.12 cm²
10. 19.24 cm 22.9245 cm²
11. 14.76 cm 11.684 cm²
12. 23.82 cm 34.0814 cm²
13. 25.58 cm 31.317 cm²
14. 30.6 cm 58.46 cm²
15. 28.3 cm 42.9 cm²