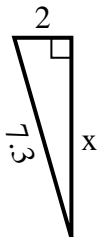


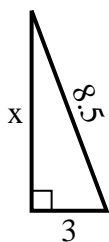


Find the value of X.

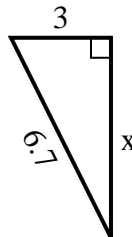
1) perimeter = $16.3 u^2$



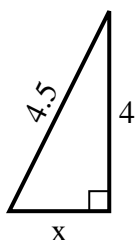
2) perimeter = $19.5 u^2$



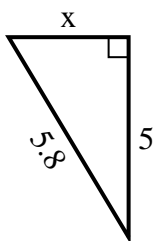
3) perimeter = $15.7 u^2$



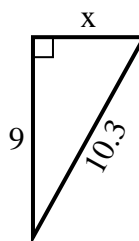
4) perimeter = $10.5 u^2$



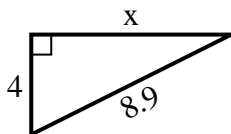
5) perimeter = $13.8 u^2$



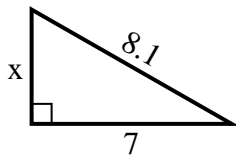
6) perimeter = $24.3 u^2$



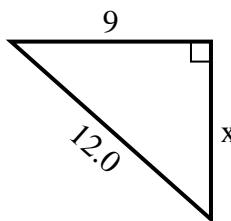
7) perimeter = $20.9 u^2$



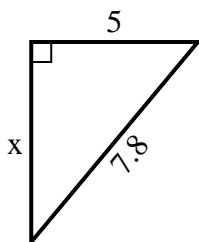
8) perimeter = $19.1 u^2$



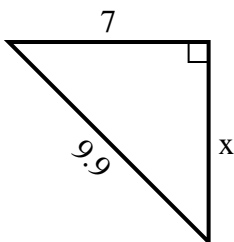
9) perimeter = $29 u^2$



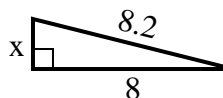
10) perimeter = $18.8 u^2$



11) perimeter = $23.9 u^2$



12) perimeter = $18.2 u^2$



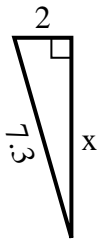
Answers

1. _____
2. _____
3. _____
4. _____
5. _____
6. _____
7. _____
8. _____
9. _____
10. _____
11. _____
12. _____

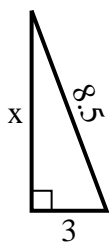


Find the value of X.

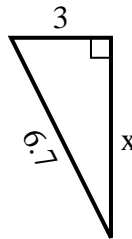
1) perimeter = $16.3 u^2$



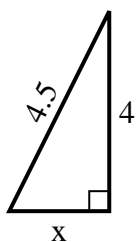
2) perimeter = $19.5 u^2$



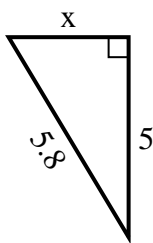
3) perimeter = $15.7 u^2$



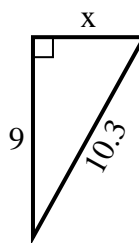
4) perimeter = $10.5 u^2$



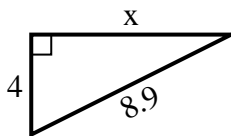
5) perimeter = $13.8 u^2$



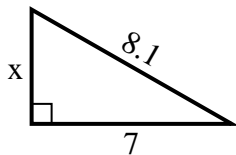
6) perimeter = $24.3 u^2$



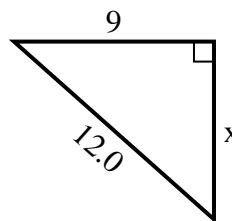
7) perimeter = $20.9 u^2$



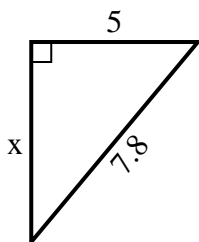
8) perimeter = $19.1 u^2$



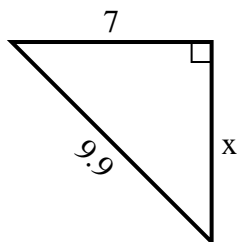
9) perimeter = $29 u^2$



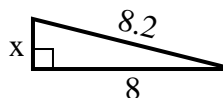
10) perimeter = $18.8 u^2$



11) perimeter = $23.9 u^2$



12) perimeter = $18.2 u^2$



Answers

1. 7
2. 8
3. 6
4. 2
5. 3
6. 5
7. 8
8. 4
9. 8
10. 6
11. 7
12. 2