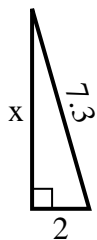


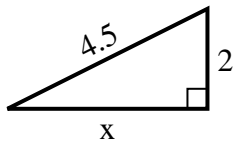


Find the value of X.

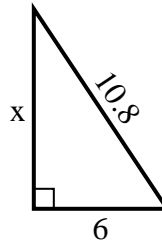
1) Perimeter = 16.3 u



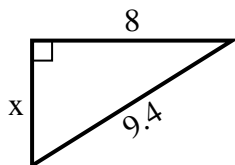
2) Perimeter = 10.5 u



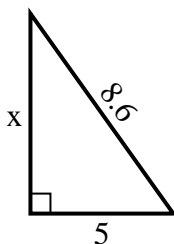
3) Perimeter = 25.8 u



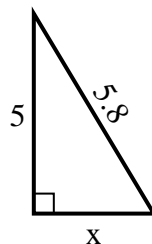
4) Perimeter = 22.4 u



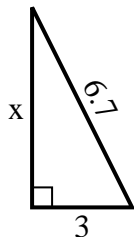
5) Perimeter = 20.6 u



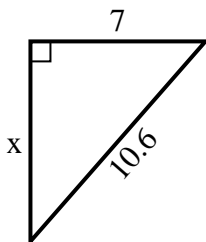
6) Perimeter = 13.8 u



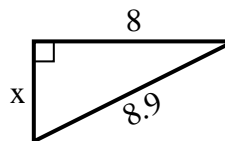
7) Perimeter = 15.7 u



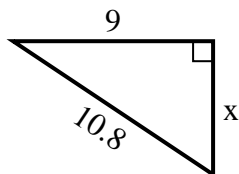
8) Perimeter = 25.6 u



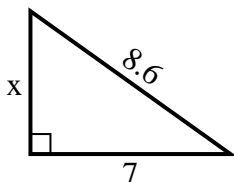
9) Perimeter = 20.9 u



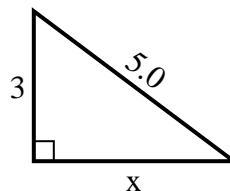
10) Perimeter = 25.8 u



11) Perimeter = 20.6 u



12) Perimeter = 12 u



Answers

1. _____

2. _____

3. _____

4. _____

5. _____

6. _____

7. _____

8. _____

9. _____

10. _____

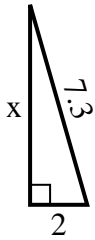
11. _____

12. _____

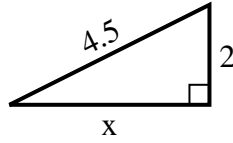


Find the value of X.

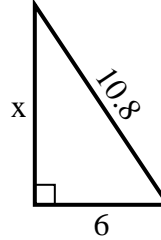
1) Perimeter = 16.3 u



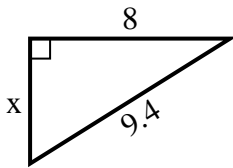
2) Perimeter = 10.5 u



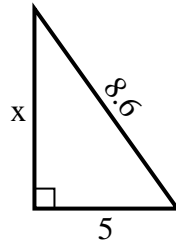
3) Perimeter = 25.8 u



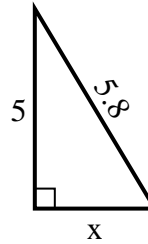
4) Perimeter = 22.4 u



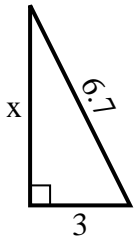
5) Perimeter = 20.6 u



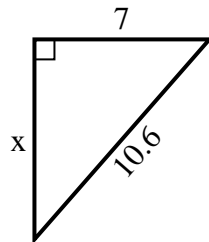
6) Perimeter = 13.8 u



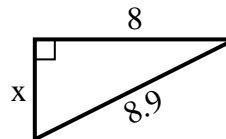
7) Perimeter = 15.7 u



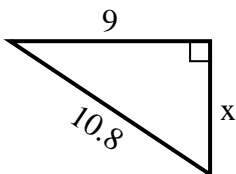
8) Perimeter = 25.6 u



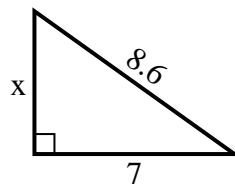
9) Perimeter = 20.9 u



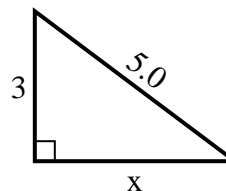
10) Perimeter = 25.8 u



11) Perimeter = 20.6 u



12) Perimeter = 12 u



Answers

1. 7

2. 4

3. 9

4. 5

5. 7

6. 3

7. 6

8. 8

9. 4

10. 6

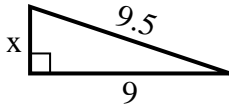
11. 5

12. 4

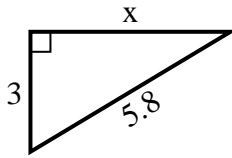


Find the value of X.

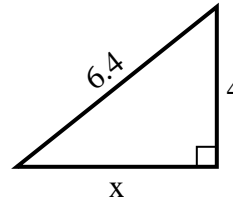
1) Perimeter = 21.5 u



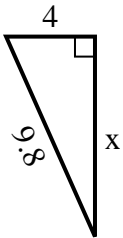
2) Perimeter = 13.8 u



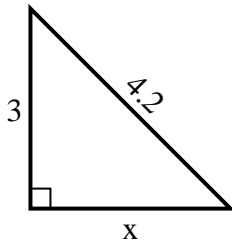
3) Perimeter = 15.4 u



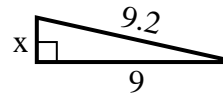
4) Perimeter = 22.8 u



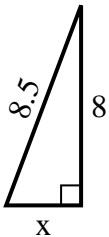
5) Perimeter = 10.2 u



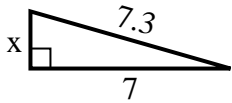
6) Perimeter = 20.2 u



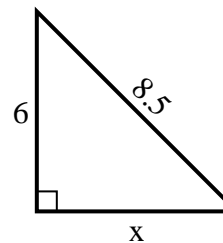
7) Perimeter = 19.5 u



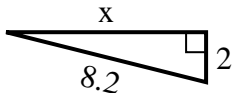
8) Perimeter = 16.3 u



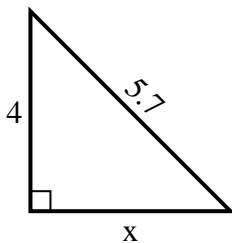
9) Perimeter = 20.5 u



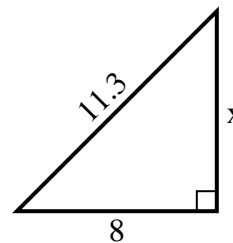
10) Perimeter = 18.2 u



11) Perimeter = 13.7 u



12) Perimeter = 27.3 u



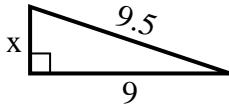
Answers

1. _____
2. _____
3. _____
4. _____
5. _____
6. _____
7. _____
8. _____
9. _____
10. _____
11. _____
12. _____

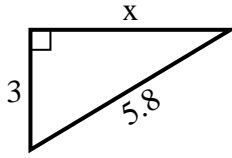


Find the value of X.

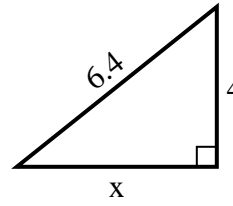
1) Perimeter = 21.5 u



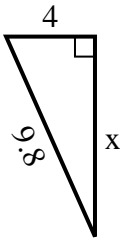
2) Perimeter = 13.8 u



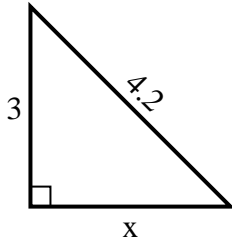
3) Perimeter = 15.4 u



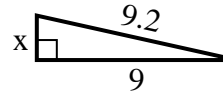
4) Perimeter = 22.8 u



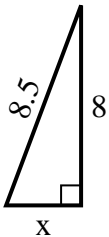
5) Perimeter = 10.2 u



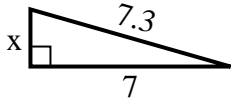
6) Perimeter = 20.2 u



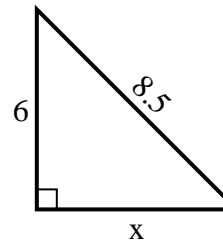
7) Perimeter = 19.5 u



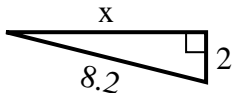
8) Perimeter = 16.3 u



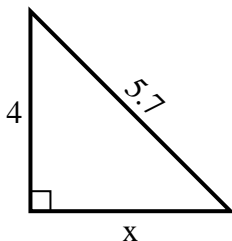
9) Perimeter = 20.5 u



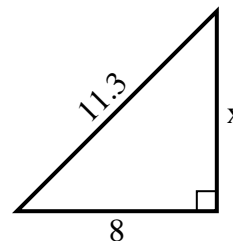
10) Perimeter = 18.2 u



11) Perimeter = 13.7 u



12) Perimeter = 27.3 u



Answers

1. 3

2. 5

3. 5

4. 9

5. 3

6. 2

7. 3

8. 2

9. 6

10. 8

11. 4

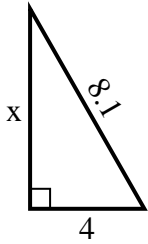
12. 8



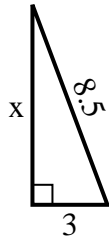
Find the value of X.

Answers

1) Perimeter = 19.1 u



2) Perimeter = 19.5 u



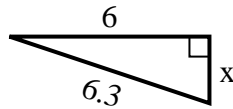
3) Perimeter = 20.2 u



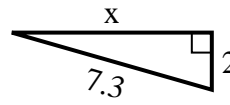
4) Perimeter = 17.6 u



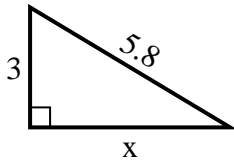
5) Perimeter = 14.3 u



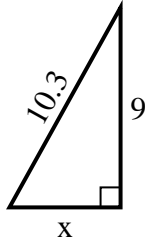
6) Perimeter = 16.3 u



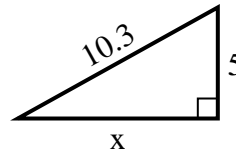
7) Perimeter = 13.8 u



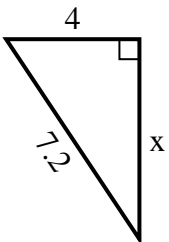
8) Perimeter = 24.3 u



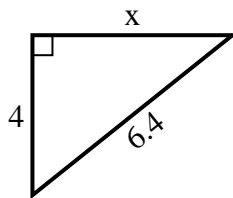
9) Perimeter = 24.3 u



10) Perimeter = 17.2 u



11) Perimeter = 15.4 u



12) Perimeter = 21.5 u

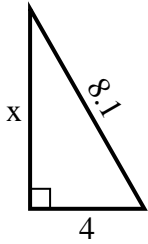


1. _____
2. _____
3. _____
4. _____
5. _____
6. _____
7. _____
8. _____
9. _____
10. _____
11. _____
12. _____

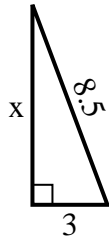


Find the value of X.

1) Perimeter = 19.1 u



2) Perimeter = 19.5 u



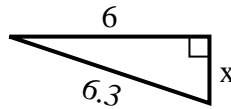
3) Perimeter = 20.2 u



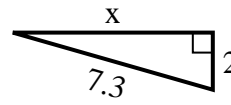
4) Perimeter = 17.6 u



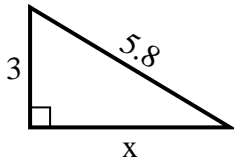
5) Perimeter = 14.3 u



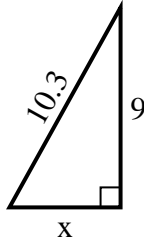
6) Perimeter = 16.3 u



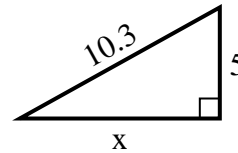
7) Perimeter = 13.8 u



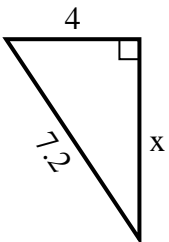
8) Perimeter = 24.3 u



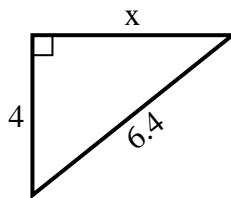
9) Perimeter = 24.3 u



10) Perimeter = 17.2 u



11) Perimeter = 15.4 u



12) Perimeter = 21.5 u



Answers

1. 7

2. 8

3. 2

4. 3

5. 2

6. 7

7. 5

8. 5

9. 9

10. 6

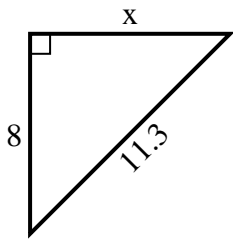
11. 5

12. 3

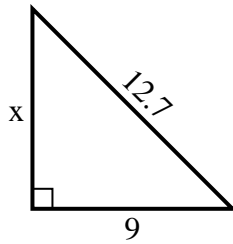


Find the value of X.

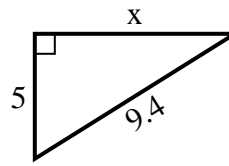
1) Perimeter = 27.3 u



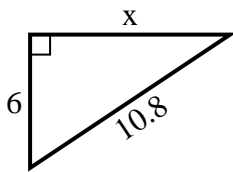
2) Perimeter = 30.7 u



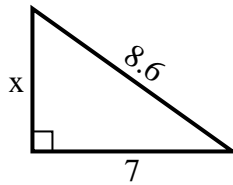
3) Perimeter = 22.4 u



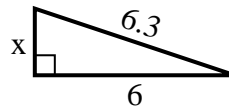
4) Perimeter = 25.8 u



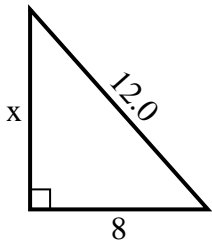
5) Perimeter = 20.6 u



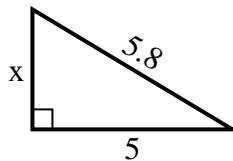
6) Perimeter = 14.3 u



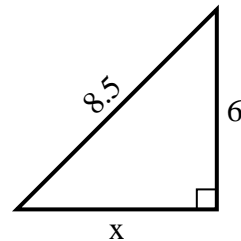
7) Perimeter = 29 u



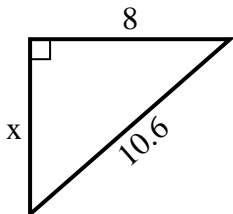
8) Perimeter = 13.8 u



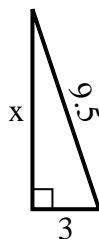
9) Perimeter = 20.5 u



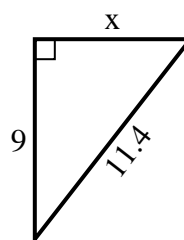
10) Perimeter = 25.6 u



11) Perimeter = 21.5 u



12) Perimeter = 27.4 u



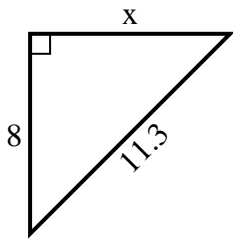
Answers

1. _____
2. _____
3. _____
4. _____
5. _____
6. _____
7. _____
8. _____
9. _____
10. _____
11. _____
12. _____

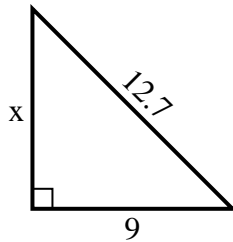


Find the value of X.

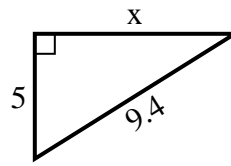
1) Perimeter = 27.3 u



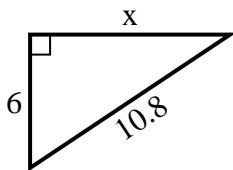
2) Perimeter = 30.7 u



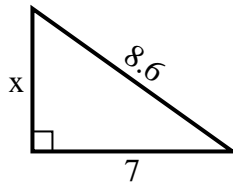
3) Perimeter = 22.4 u



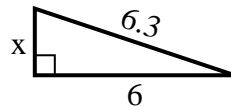
4) Perimeter = 25.8 u



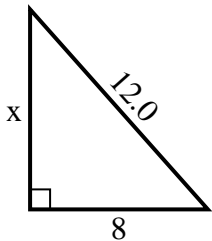
5) Perimeter = 20.6 u



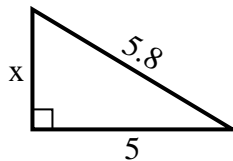
6) Perimeter = 14.3 u



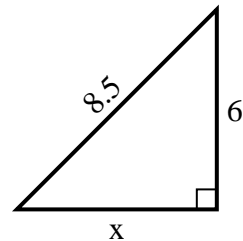
7) Perimeter = 29 u



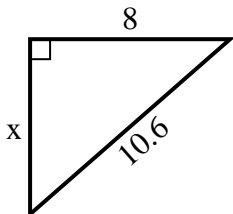
8) Perimeter = 13.8 u



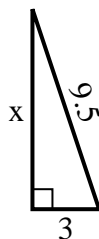
9) Perimeter = 20.5 u



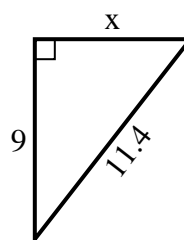
10) Perimeter = 25.6 u



11) Perimeter = 21.5 u



12) Perimeter = 27.4 u



Answers

1. 8

2. 9

3. 8

4. 9

5. 5

6. 2

7. 9

8. 3

9. 6

10. 7

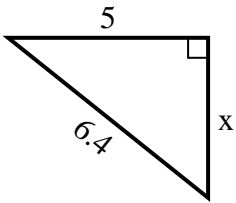
11. 9

12. 7

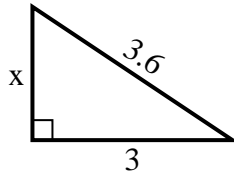


Find the value of X.

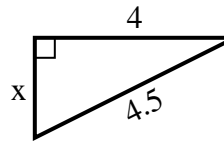
1) Perimeter = 15.4 u



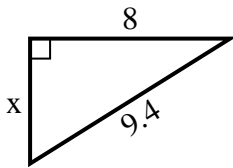
2) Perimeter = 8.6 u



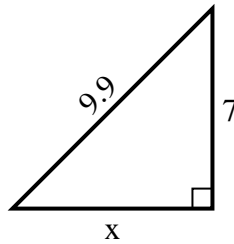
3) Perimeter = 10.5 u



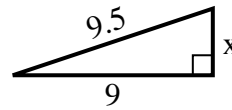
4) Perimeter = 22.4 u



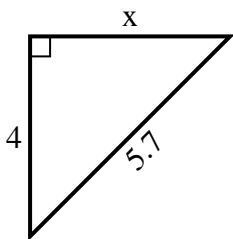
5) Perimeter = 23.9 u



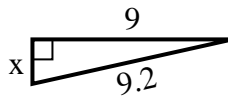
6) Perimeter = 21.5 u



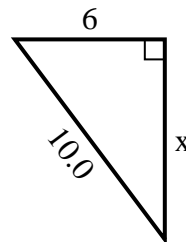
7) Perimeter = 13.7 u



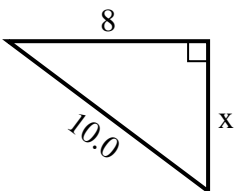
8) Perimeter = 20.2 u



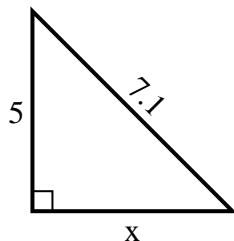
9) Perimeter = 24 u



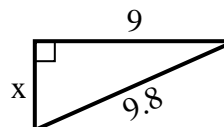
10) Perimeter = 24 u



11) Perimeter = 17.1 u



12) Perimeter = 22.8 u



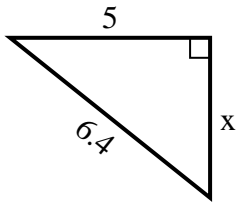
Answers

1. _____
2. _____
3. _____
4. _____
5. _____
6. _____
7. _____
8. _____
9. _____
10. _____
11. _____
12. _____

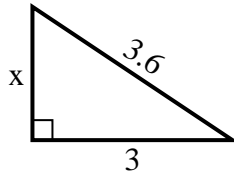


Find the value of X.

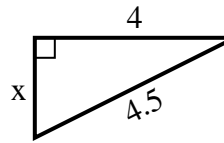
1) Perimeter = 15.4 u



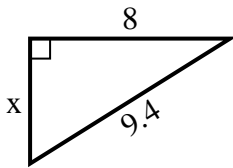
2) Perimeter = 8.6 u



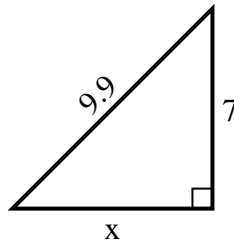
3) Perimeter = 10.5 u



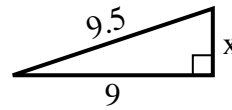
4) Perimeter = 22.4 u



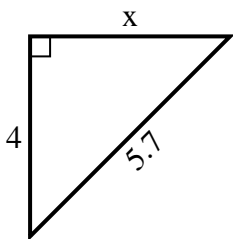
5) Perimeter = 23.9 u



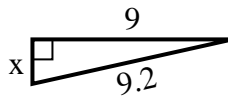
6) Perimeter = 21.5 u



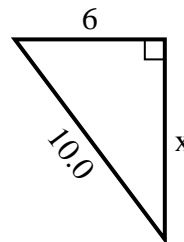
7) Perimeter = 13.7 u



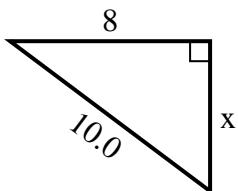
8) Perimeter = 20.2 u



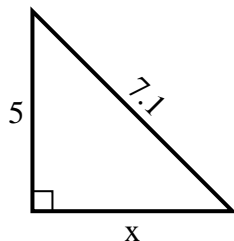
9) Perimeter = 24 u



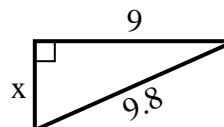
10) Perimeter = 24 u



11) Perimeter = 17.1 u



12) Perimeter = 22.8 u



Answers

1. 4

2. 2

3. 2

4. 5

5. 7

6. 3

7. 4

8. 2

9. 8

10. 6

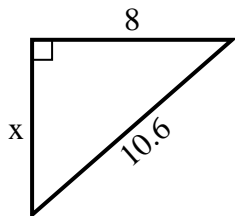
11. 5

12. 4

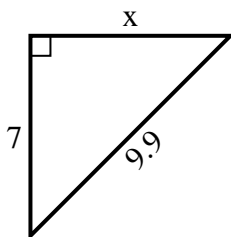


Find the value of X.

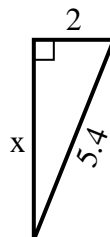
1) Perimeter = 25.6 u



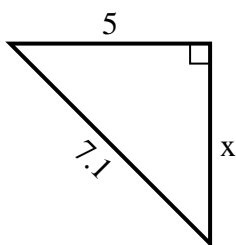
2) Perimeter = 23.9 u



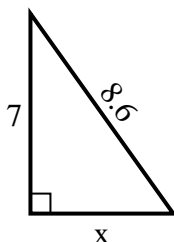
3) Perimeter = 12.4 u



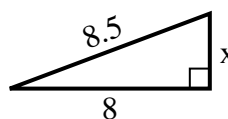
4) Perimeter = 17.1 u



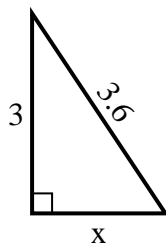
5) Perimeter = 20.6 u



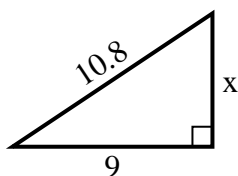
6) Perimeter = 19.5 u



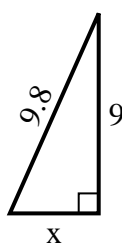
7) Perimeter = 8.6 u



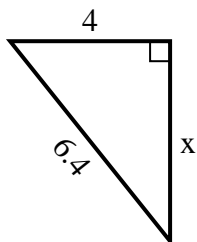
8) Perimeter = 25.8 u



9) Perimeter = 22.8 u



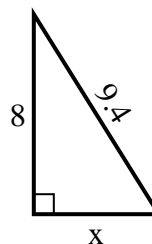
10) Perimeter = 15.4 u



11) Perimeter = 14.3 u



12) Perimeter = 22.4 u



Answers

1. _____

2. _____

3. _____

4. _____

5. _____

6. _____

7. _____

8. _____

9. _____

10. _____

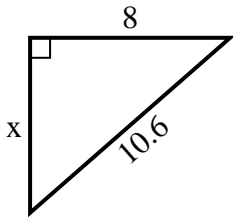
11. _____

12. _____

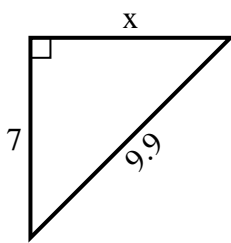


Find the value of X.

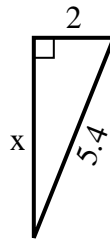
1) Perimeter = 25.6 u



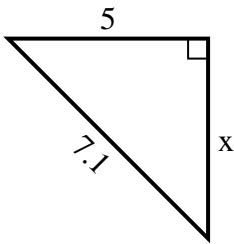
2) Perimeter = 23.9 u



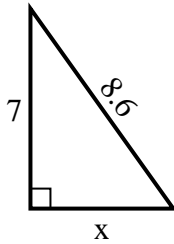
3) Perimeter = 12.4 u



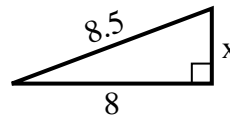
4) Perimeter = 17.1 u



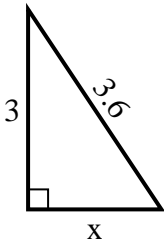
5) Perimeter = 20.6 u



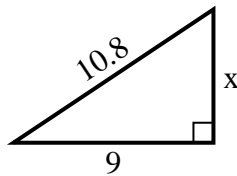
6) Perimeter = 19.5 u



7) Perimeter = 8.6 u



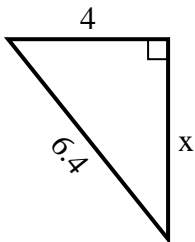
8) Perimeter = 25.8 u



9) Perimeter = 22.8 u



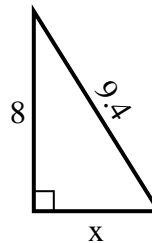
10) Perimeter = 15.4 u



11) Perimeter = 14.3 u



12) Perimeter = 22.4 u



Answers

1. 7

2. 7

3. 5

4. 5

5. 5

6. 3

7. 2

8. 6

9. 4

10. 5

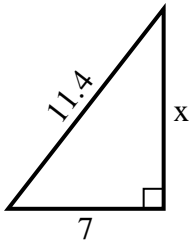
11. 6

12. 5

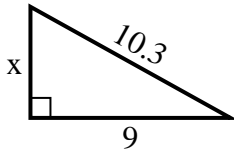


Find the value of X.

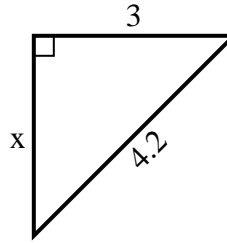
1) Perimeter = 27.4 u



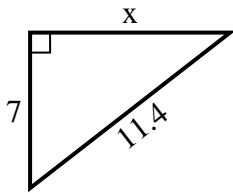
2) Perimeter = 24.3 u



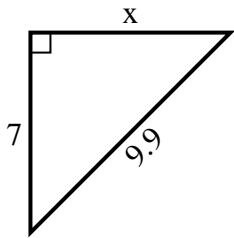
3) Perimeter = 10.2 u



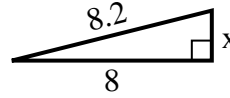
4) Perimeter = 27.4 u



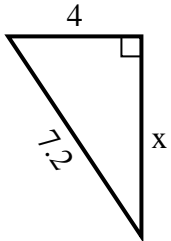
5) Perimeter = 23.9 u



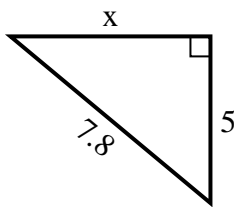
6) Perimeter = 18.2 u



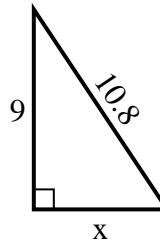
7) Perimeter = 17.2 u



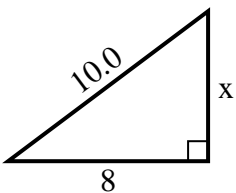
8) Perimeter = 18.8 u



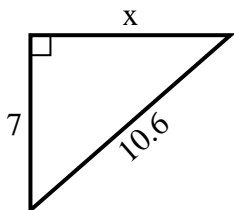
9) Perimeter = 25.8 u



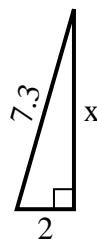
10) Perimeter = 24 u



11) Perimeter = 25.6 u



12) Perimeter = 16.3 u



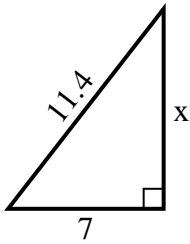
Answers

1. _____
2. _____
3. _____
4. _____
5. _____
6. _____
7. _____
8. _____
9. _____
10. _____
11. _____
12. _____

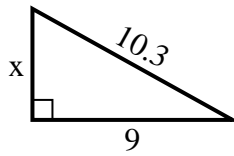


Find the value of X.

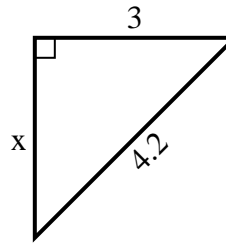
1) Perimeter = 27.4 u



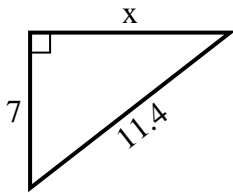
2) Perimeter = 24.3 u



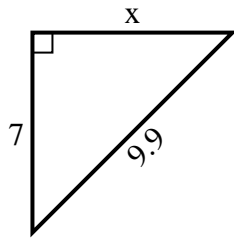
3) Perimeter = 10.2 u



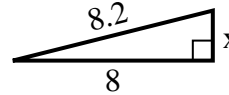
4) Perimeter = 27.4 u



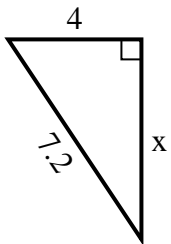
5) Perimeter = 23.9 u



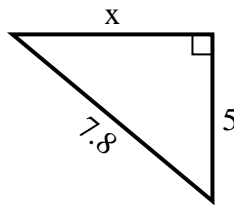
6) Perimeter = 18.2 u



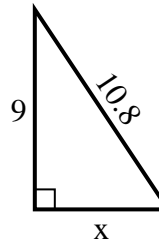
7) Perimeter = 17.2 u



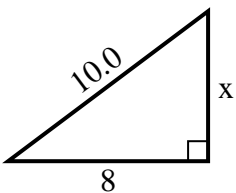
8) Perimeter = 18.8 u



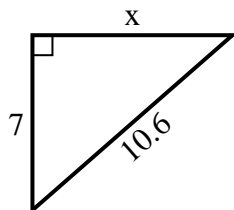
9) Perimeter = 25.8 u



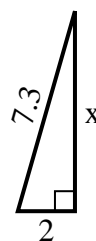
10) Perimeter = 24 u



11) Perimeter = 25.6 u



12) Perimeter = 16.3 u



Answers

1. 9

2. 5

3. 3

4. 9

5. 7

6. 2

7. 6

8. 6

9. 6

10. 6

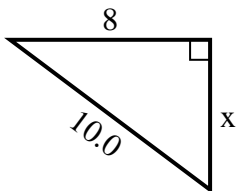
11. 8

12. 7



Find the value of X.

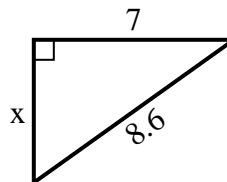
1) Perimeter = 24 u



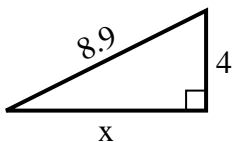
2) Perimeter = 14.3 u



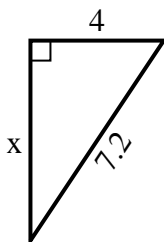
3) Perimeter = 20.6 u



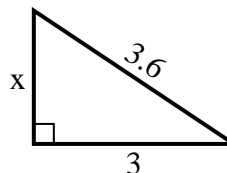
4) Perimeter = 20.9 u



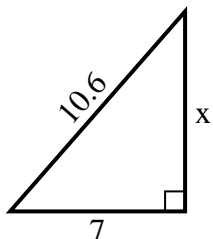
5) Perimeter = 17.2 u



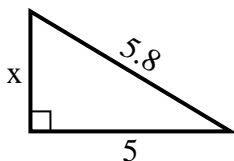
6) Perimeter = 8.6 u



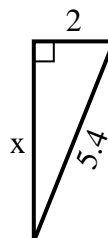
7) Perimeter = 25.6 u



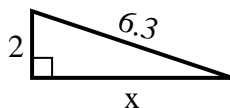
8) Perimeter = 13.8 u



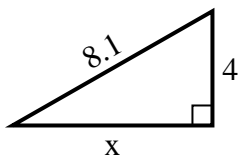
9) Perimeter = 12.4 u



10) Perimeter = 14.3 u



11) Perimeter = 19.1 u



12) Perimeter = 20.2 u



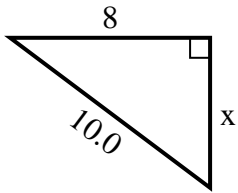
Answers

1. _____
2. _____
3. _____
4. _____
5. _____
6. _____
7. _____
8. _____
9. _____
10. _____
11. _____
12. _____

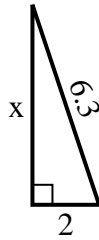


Find the value of X.

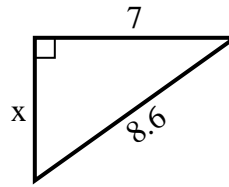
1) Perimeter = 24 u



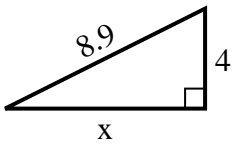
2) Perimeter = 14.3 u



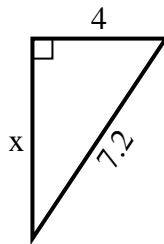
3) Perimeter = 20.6 u



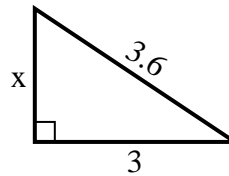
4) Perimeter = 20.9 u



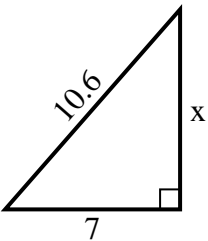
5) Perimeter = 17.2 u



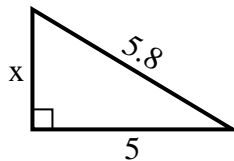
6) Perimeter = 8.6 u



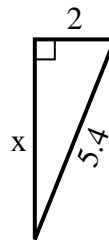
7) Perimeter = 25.6 u



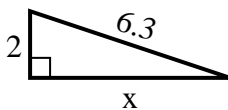
8) Perimeter = 13.8 u



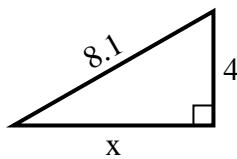
9) Perimeter = 12.4 u



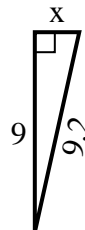
10) Perimeter = 14.3 u



11) Perimeter = 19.1 u



12) Perimeter = 20.2 u



Answers

1. 6

2. 6

3. 5

4. 8

5. 6

6. 2

7. 8

8. 3

9. 5

10. 6

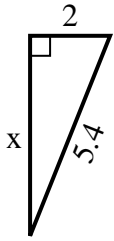
11. 7

12. 2

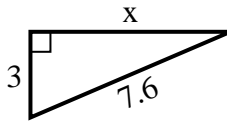


Find the value of X.

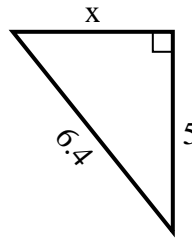
1) Perimeter = 12.4 u



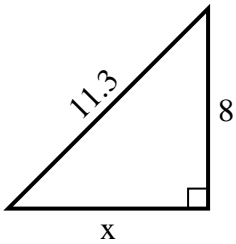
2) Perimeter = 17.6 u



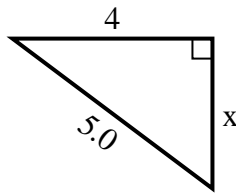
3) Perimeter = 15.4 u



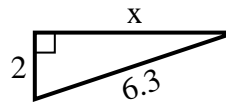
4) Perimeter = 27.3 u



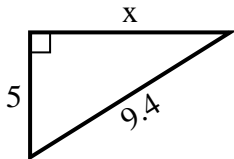
5) Perimeter = 12 u



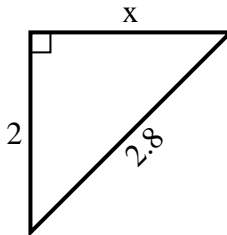
6) Perimeter = 14.3 u



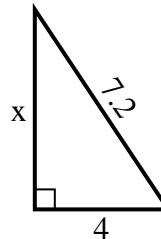
7) Perimeter = 22.4 u



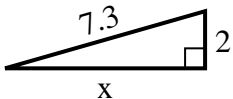
8) Perimeter = 6.8 u



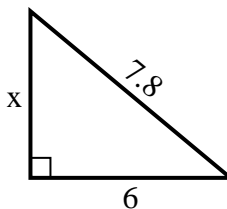
9) Perimeter = 17.2 u



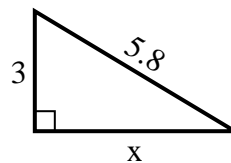
10) Perimeter = 16.3 u



11) Perimeter = 18.8 u



12) Perimeter = 13.8 u



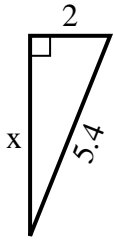
Answers

1. _____
2. _____
3. _____
4. _____
5. _____
6. _____
7. _____
8. _____
9. _____
10. _____
11. _____
12. _____

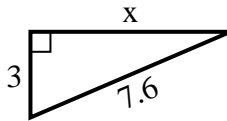


Find the value of X.

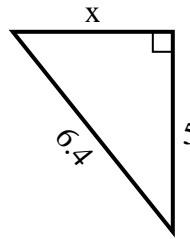
1) Perimeter = 12.4 u



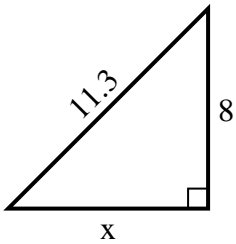
2) Perimeter = 17.6 u



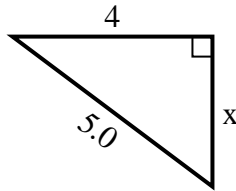
3) Perimeter = 15.4 u



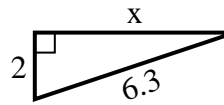
4) Perimeter = 27.3 u



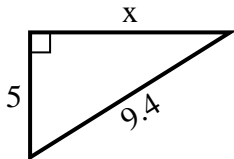
5) Perimeter = 12 u



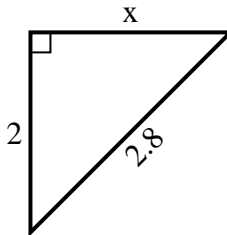
6) Perimeter = 14.3 u



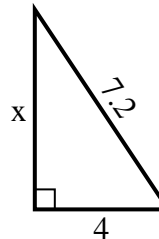
7) Perimeter = 22.4 u



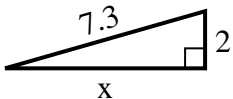
8) Perimeter = 6.8 u



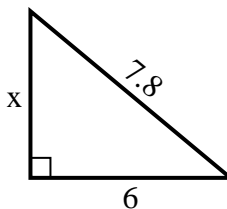
9) Perimeter = 17.2 u



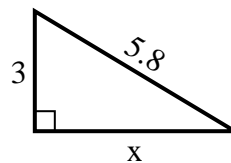
10) Perimeter = 16.3 u



11) Perimeter = 18.8 u



12) Perimeter = 13.8 u



Answers

1. 5

2. 7

3. 4

4. 8

5. 3

6. 6

7. 8

8. 2

9. 6

10. 7

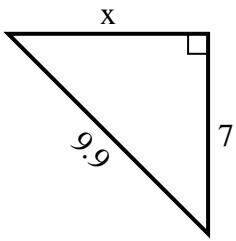
11. 5

12. 5

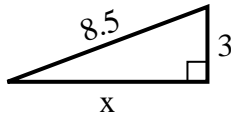


Find the value of X.

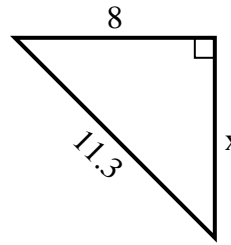
1) Perimeter = 23.9 u



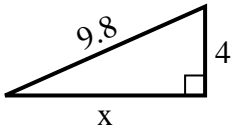
2) Perimeter = 19.5 u



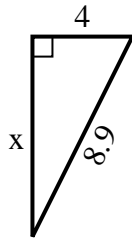
3) Perimeter = 27.3 u



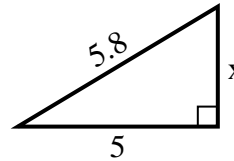
4) Perimeter = 22.8 u



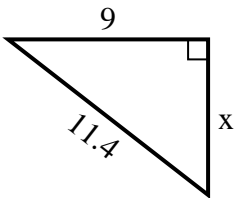
5) Perimeter = 20.9 u



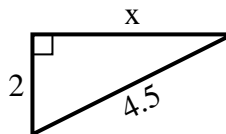
6) Perimeter = 13.8 u



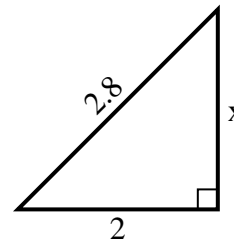
7) Perimeter = 27.4 u



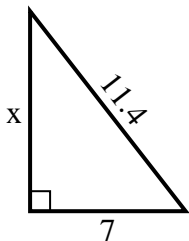
8) Perimeter = 10.5 u



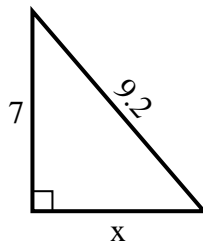
9) Perimeter = 6.8 u



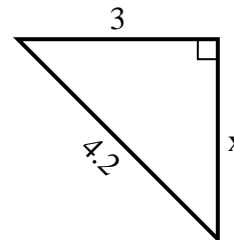
10) Perimeter = 27.4 u



11) Perimeter = 22.2 u



12) Perimeter = 10.2 u



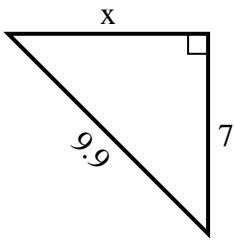
Answers

1. _____
2. _____
3. _____
4. _____
5. _____
6. _____
7. _____
8. _____
9. _____
10. _____
11. _____
12. _____

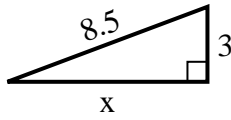


Find the value of X.

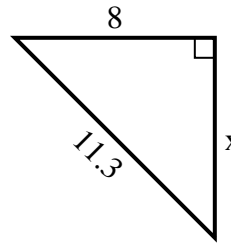
1) Perimeter = 23.9 u



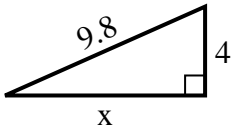
2) Perimeter = 19.5 u



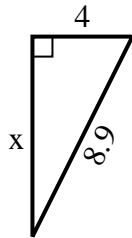
3) Perimeter = 27.3 u



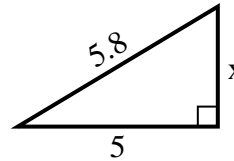
4) Perimeter = 22.8 u



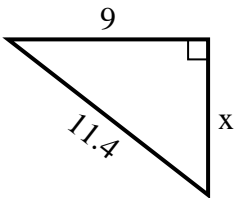
5) Perimeter = 20.9 u



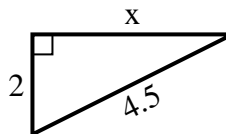
6) Perimeter = 13.8 u



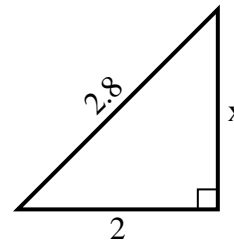
7) Perimeter = 27.4 u



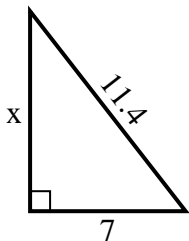
8) Perimeter = 10.5 u



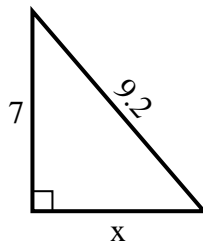
9) Perimeter = 6.8 u



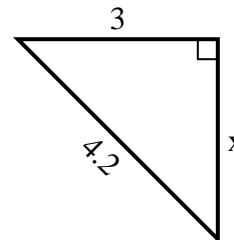
10) Perimeter = 27.4 u



11) Perimeter = 22.2 u



12) Perimeter = 10.2 u



Answers

1. 7
2. 8
3. 8
4. 9
5. 8
6. 3
7. 7
8. 4
9. 2
10. 9
11. 6
12. 3