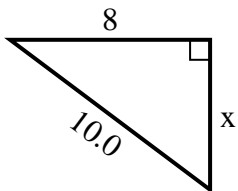




Find the value of X.

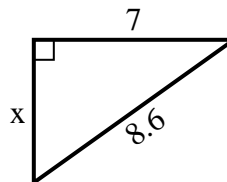
1) Perimeter = 24 u



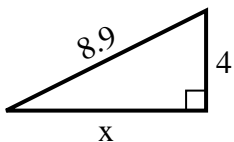
2) Perimeter = 14.3 u



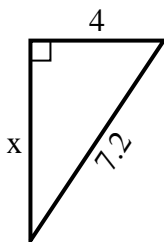
3) Perimeter = 20.6 u



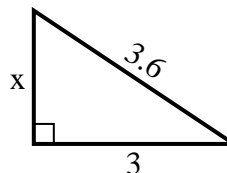
4) Perimeter = 20.9 u



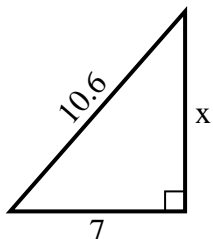
5) Perimeter = 17.2 u



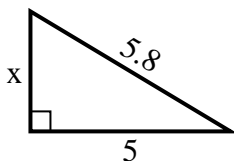
6) Perimeter = 8.6 u



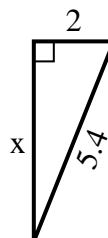
7) Perimeter = 25.6 u



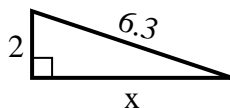
8) Perimeter = 13.8 u



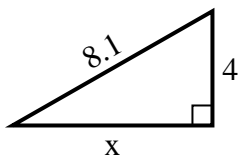
9) Perimeter = 12.4 u



10) Perimeter = 14.3 u



11) Perimeter = 19.1 u



12) Perimeter = 20.2 u



Answers

1. \_\_\_\_\_

2. \_\_\_\_\_

3. \_\_\_\_\_

4. \_\_\_\_\_

5. \_\_\_\_\_

6. \_\_\_\_\_

7. \_\_\_\_\_

8. \_\_\_\_\_

9. \_\_\_\_\_

10. \_\_\_\_\_

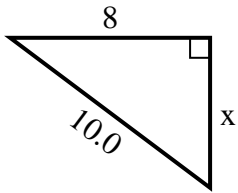
11. \_\_\_\_\_

12. \_\_\_\_\_

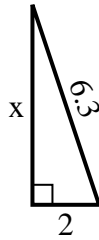


Find the value of X.

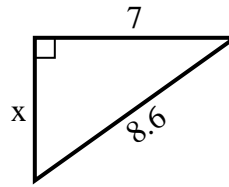
1) Perimeter = 24 u



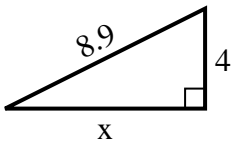
2) Perimeter = 14.3 u



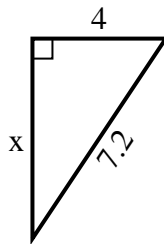
3) Perimeter = 20.6 u



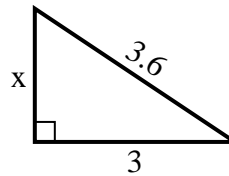
4) Perimeter = 20.9 u



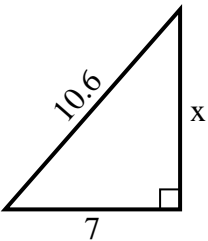
5) Perimeter = 17.2 u



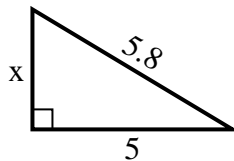
6) Perimeter = 8.6 u



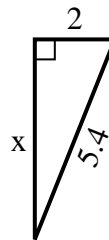
7) Perimeter = 25.6 u



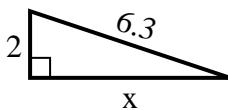
8) Perimeter = 13.8 u



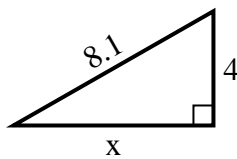
9) Perimeter = 12.4 u



10) Perimeter = 14.3 u



11) Perimeter = 19.1 u



12) Perimeter = 20.2 u



Answers

1. 6

2. 6

3. 5

4. 8

5. 6

6. 2

7. 8

8. 3

9. 5

10. 6

11. 7

12. 2