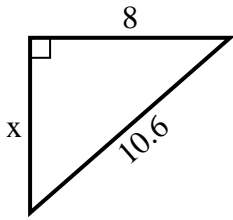


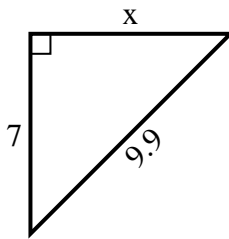


Find the value of X.

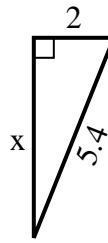
1) Perimeter = 25.6 u



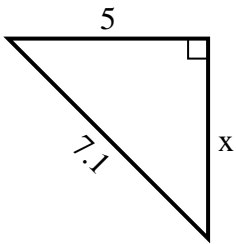
2) Perimeter = 23.9 u



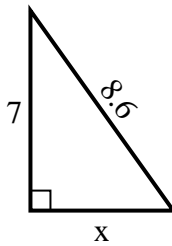
3) Perimeter = 12.4 u



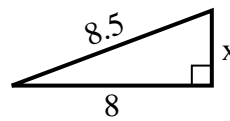
4) Perimeter = 17.1 u



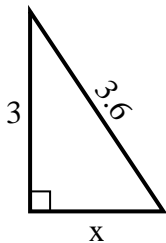
5) Perimeter = 20.6 u



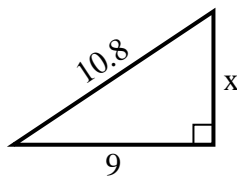
6) Perimeter = 19.5 u



7) Perimeter = 8.6 u



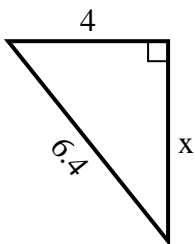
8) Perimeter = 25.8 u



9) Perimeter = 22.8 u



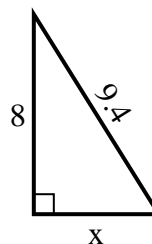
10) Perimeter = 15.4 u



11) Perimeter = 14.3 u



12) Perimeter = 22.4 u



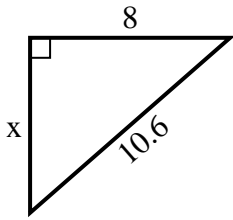
Answers

1. _____
2. _____
3. _____
4. _____
5. _____
6. _____
7. _____
8. _____
9. _____
10. _____
11. _____
12. _____

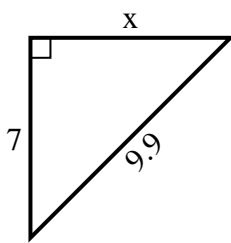


Find the value of X.

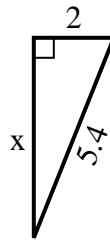
1) Perimeter = 25.6 u



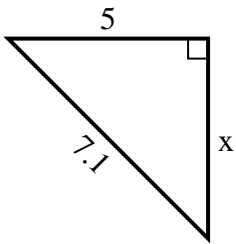
2) Perimeter = 23.9 u



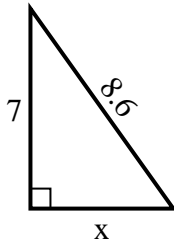
3) Perimeter = 12.4 u



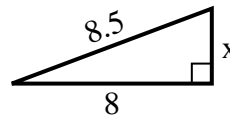
4) Perimeter = 17.1 u



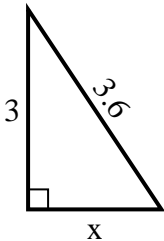
5) Perimeter = 20.6 u



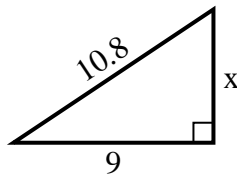
6) Perimeter = 19.5 u



7) Perimeter = 8.6 u



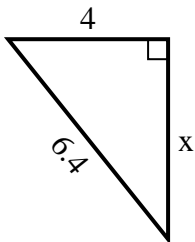
8) Perimeter = 25.8 u



9) Perimeter = 22.8 u



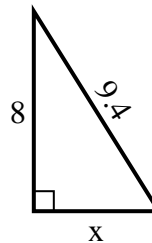
10) Perimeter = 15.4 u



11) Perimeter = 14.3 u



12) Perimeter = 22.4 u



Answers

1. 7

2. 7

3. 5

4. 5

5. 5

6. 3

7. 2

8. 6

9. 4

10. 5

11. 6

12. 5