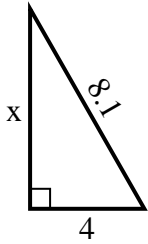


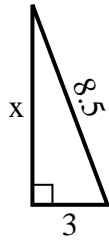


Find the value of X.

1) Perimeter = 19.1 u



2) Perimeter = 19.5 u



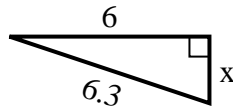
3) Perimeter = 20.2 u



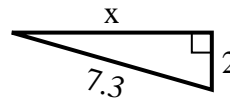
4) Perimeter = 17.6 u



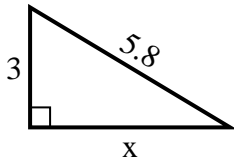
5) Perimeter = 14.3 u



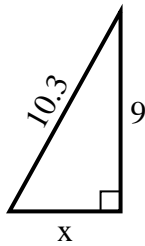
6) Perimeter = 16.3 u



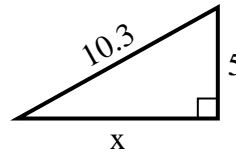
7) Perimeter = 13.8 u



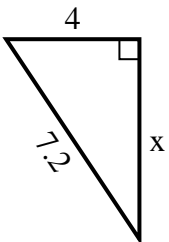
8) Perimeter = 24.3 u



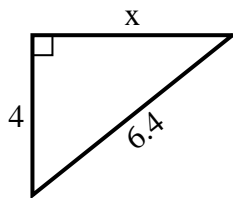
9) Perimeter = 24.3 u



10) Perimeter = 17.2 u



11) Perimeter = 15.4 u



12) Perimeter = 21.5 u



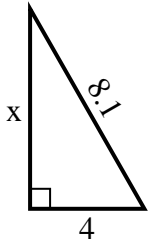
Answers

1. _____
2. _____
3. _____
4. _____
5. _____
6. _____
7. _____
8. _____
9. _____
10. _____
11. _____
12. _____

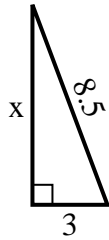


Find the value of X.

1) Perimeter = 19.1 u



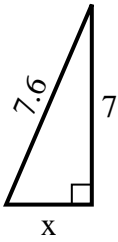
2) Perimeter = 19.5 u



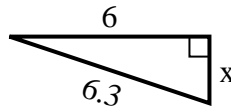
3) Perimeter = 20.2 u



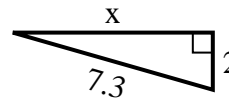
4) Perimeter = 17.6 u



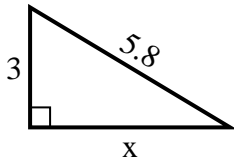
5) Perimeter = 14.3 u



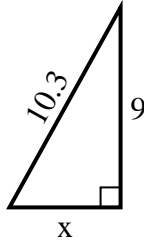
6) Perimeter = 16.3 u



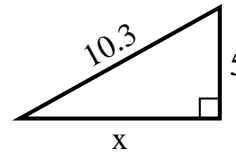
7) Perimeter = 13.8 u



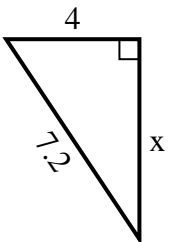
8) Perimeter = 24.3 u



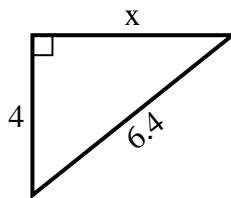
9) Perimeter = 24.3 u



10) Perimeter = 17.2 u



11) Perimeter = 15.4 u



12) Perimeter = 21.5 u



Answers

1. 7

2. 8

3. 2

4. 3

5. 2

6. 7

7. 5

8. 5

9. 9

10. 6

11. 5

12. 3