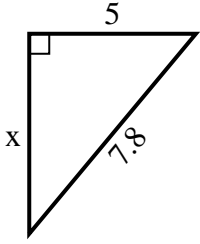


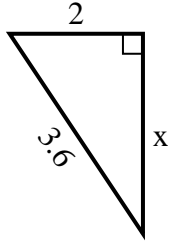


Find the value of X.

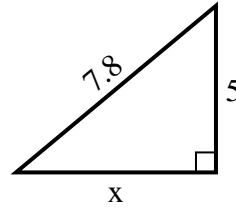
1) area = $15 u^2$



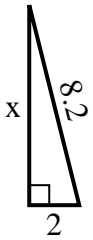
2) area = $3 u^2$



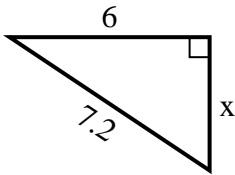
3) area = $15 u^2$



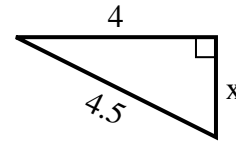
4) area = $8 u^2$



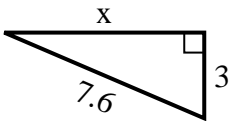
5) area = $12 u^2$



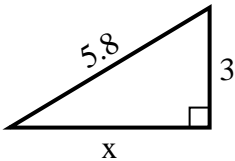
6) area = $4 u^2$



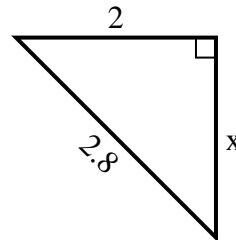
7) area = $10.5 u^2$



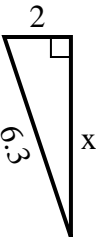
8) area = $7.5 u^2$



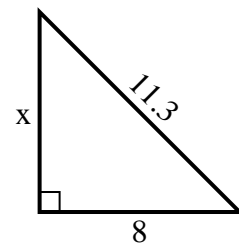
9) area = $2 u^2$



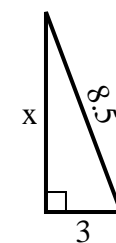
10) area = $6 u^2$



11) area = $32 u^2$



12) area = $12 u^2$



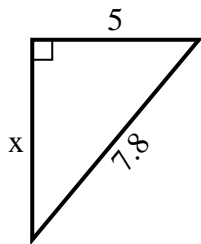
Answers

1. _____
2. _____
3. _____
4. _____
5. _____
6. _____
7. _____
8. _____
9. _____
10. _____
11. _____
12. _____

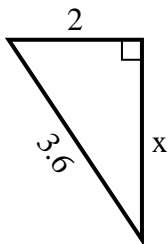


Find the value of X.

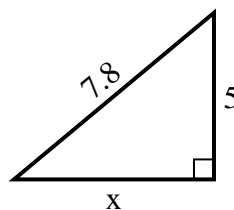
1) area = $15 u^2$



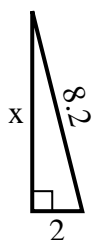
2) area = $3 u^2$



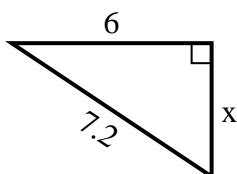
3) area = $15 u^2$



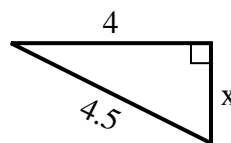
4) area = $8 u^2$



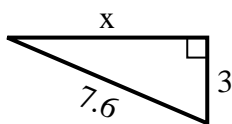
5) area = $12 u^2$



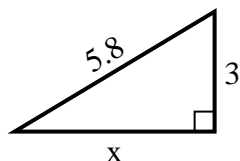
6) area = $4 u^2$



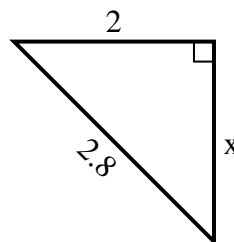
7) area = $10.5 u^2$



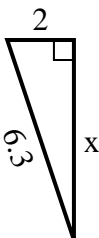
8) area = $7.5 u^2$



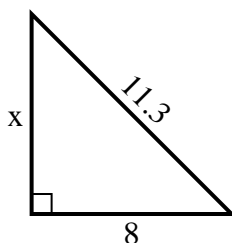
9) area = $2 u^2$



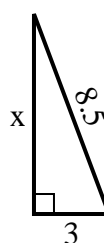
10) area = $6 u^2$



11) area = $32 u^2$



12) area = $12 u^2$



Answers

1. 6
2. 3
3. 6
4. 8
5. 4
6. 2
7. 7
8. 5
9. 2
10. 6
11. 8
12. 8