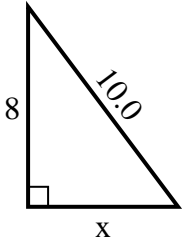


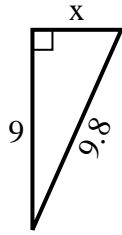


Find the value of X.

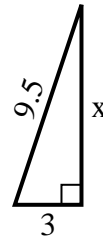
1) Area = $24 u^2$



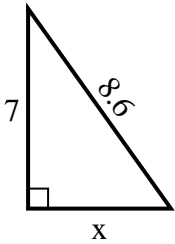
2) Area = $18 u^2$



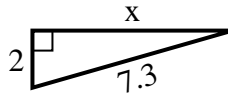
3) Area = $13.5 u^2$



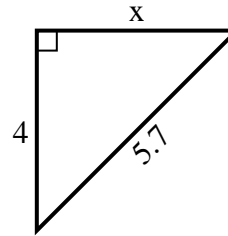
4) Area = $17.5 u^2$



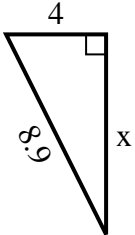
5) Area = $7 u^2$



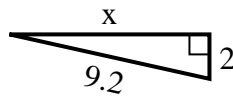
6) Area = $8 u^2$



7) Area = $16 u^2$



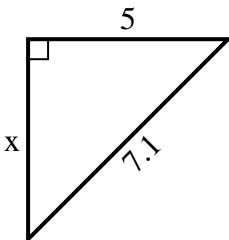
8) Area = $9 u^2$



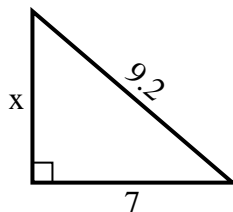
9) Area = $6 u^2$



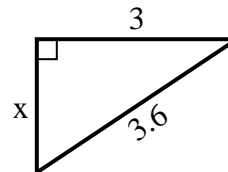
10) Area = $12.5 u^2$



11) Area = $21 u^2$



12) Area = $3 u^2$



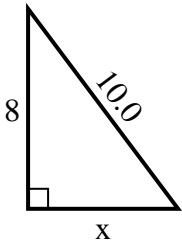
Answers

1. _____
2. _____
3. _____
4. _____
5. _____
6. _____
7. _____
8. _____
9. _____
10. _____
11. _____
12. _____

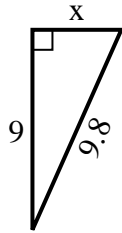


Find the value of X.

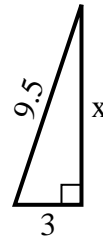
1) Area = $24 u^2$



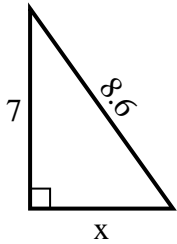
2) Area = $18 u^2$



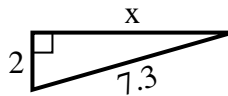
3) Area = $13.5 u^2$



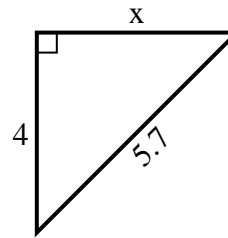
4) Area = $17.5 u^2$



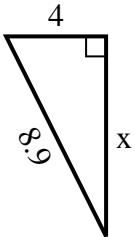
5) Area = $7 u^2$



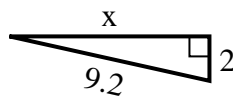
6) Area = $8 u^2$



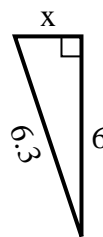
7) Area = $16 u^2$



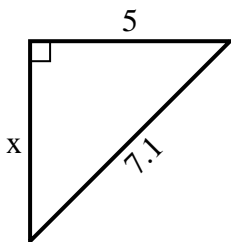
8) Area = $9 u^2$



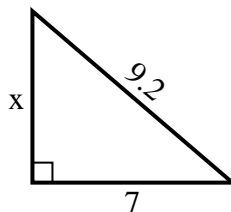
9) Area = $6 u^2$



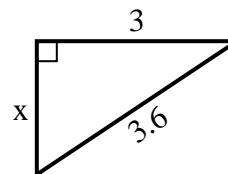
10) Area = $12.5 u^2$



11) Area = $21 u^2$



12) Area = $3 u^2$



Answers

1. 6

2. 4

3. 9

4. 5

5. 7

6. 4

7. 8

8. 9

9. 2

10. 5

11. 6

12. 2