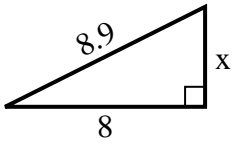


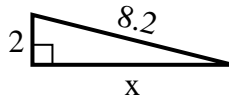


Find the value of X.

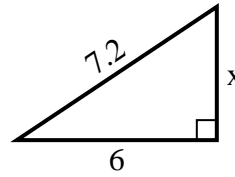
1) Area =  $16 u^2$



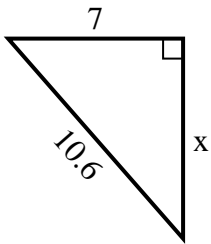
2) Area =  $8 u^2$



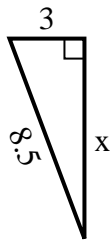
3) Area =  $12 u^2$



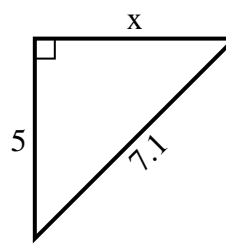
4) Area =  $28 u^2$



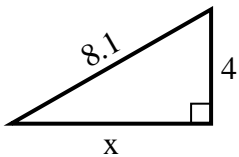
5) Area =  $12 u^2$



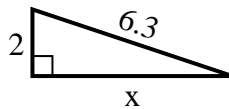
6) Area =  $12.5 u^2$



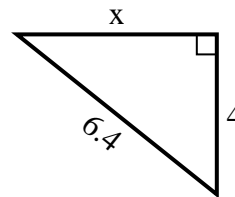
7) Area =  $14 u^2$



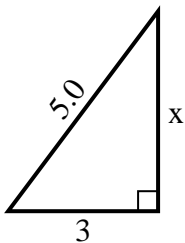
8) Area =  $6 u^2$



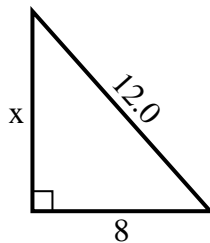
9) Area =  $10 u^2$



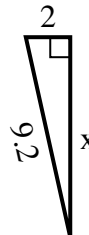
10) Area =  $6 u^2$



11) Area =  $36 u^2$



12) Area =  $9 u^2$



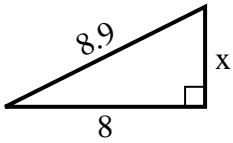
Answers

1. \_\_\_\_\_
2. \_\_\_\_\_
3. \_\_\_\_\_
4. \_\_\_\_\_
5. \_\_\_\_\_
6. \_\_\_\_\_
7. \_\_\_\_\_
8. \_\_\_\_\_
9. \_\_\_\_\_
10. \_\_\_\_\_
11. \_\_\_\_\_
12. \_\_\_\_\_

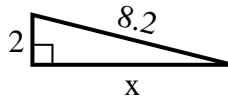


Find the value of X.

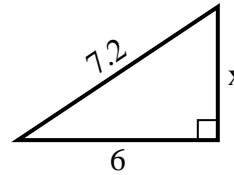
1) Area =  $16 u^2$



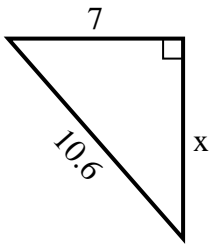
2) Area =  $8 u^2$



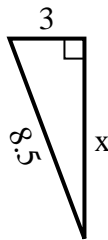
3) Area =  $12 u^2$



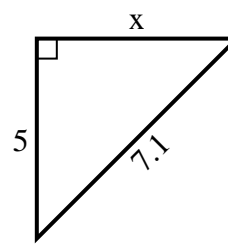
4) Area =  $28 u^2$



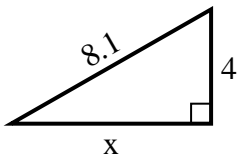
5) Area =  $12 u^2$



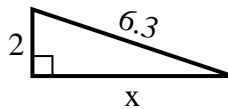
6) Area =  $12.5 u^2$



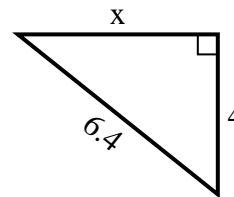
7) Area =  $14 u^2$



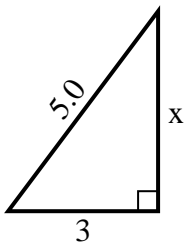
8) Area =  $6 u^2$



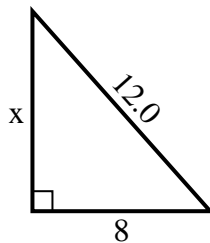
9) Area =  $10 u^2$



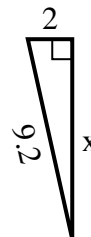
10) Area =  $6 u^2$



11) Area =  $36 u^2$



12) Area =  $9 u^2$



Answers

1. 4

2. 8

3. 4

4. 8

5. 8

6. 5

7. 7

8. 6

9. 5

10. 4

11. 9

12. 9