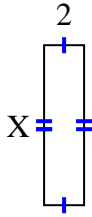




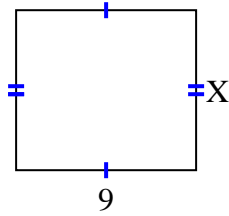
Find the value of X for each figure. Each figure is in centimeters (cm). Not to scale.

Answers

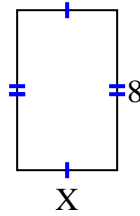
1) Area =  $16 \text{ cm}^2$



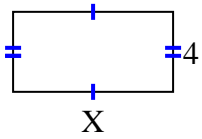
2) Area =  $72 \text{ cm}^2$



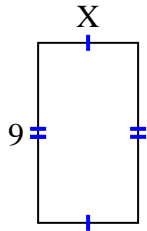
3) Area =  $40 \text{ cm}^2$



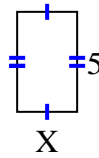
4) Area =  $32 \text{ cm}^2$



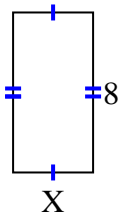
5) Area =  $45 \text{ cm}^2$



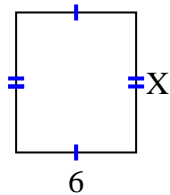
6) Area =  $15 \text{ cm}^2$



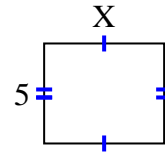
7) Area =  $32 \text{ cm}^2$



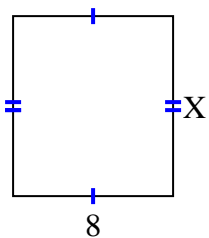
8) Area =  $42 \text{ cm}^2$



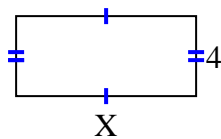
9) Area =  $30 \text{ cm}^2$



10) Area =  $72 \text{ cm}^2$



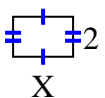
11) Area =  $36 \text{ cm}^2$



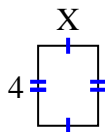
12) Area =  $4 \text{ cm}^2$



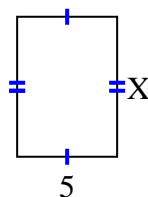
13) Area =  $6 \text{ cm}^2$



14) Area =  $12 \text{ cm}^2$



15) Area =  $35 \text{ cm}^2$



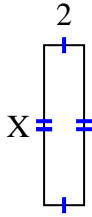
1. \_\_\_\_\_
2. \_\_\_\_\_
3. \_\_\_\_\_
4. \_\_\_\_\_
5. \_\_\_\_\_
6. \_\_\_\_\_
7. \_\_\_\_\_
8. \_\_\_\_\_
9. \_\_\_\_\_
10. \_\_\_\_\_
11. \_\_\_\_\_
12. \_\_\_\_\_
13. \_\_\_\_\_
14. \_\_\_\_\_
15. \_\_\_\_\_



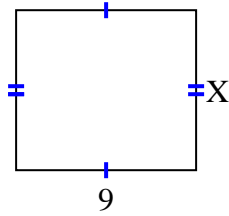
Find the value of X for each figure. Each figure is in centimeters (cm). Not to scale.

Answers

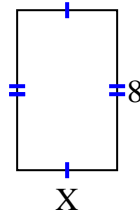
1) Area =  $16 \text{ cm}^2$



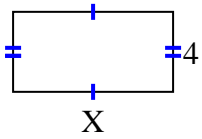
2) Area =  $72 \text{ cm}^2$



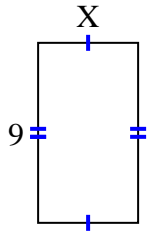
3) Area =  $40 \text{ cm}^2$



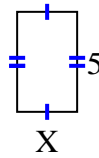
4) Area =  $32 \text{ cm}^2$



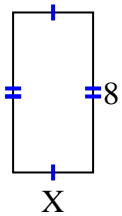
5) Area =  $45 \text{ cm}^2$



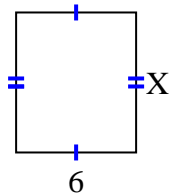
6) Area =  $15 \text{ cm}^2$



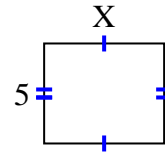
7) Area =  $32 \text{ cm}^2$



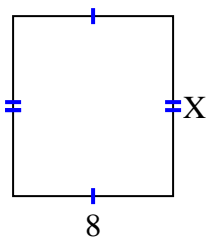
8) Area =  $42 \text{ cm}^2$



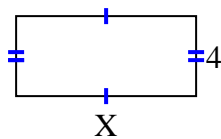
9) Area =  $30 \text{ cm}^2$



10) Area =  $72 \text{ cm}^2$



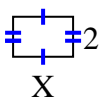
11) Area =  $36 \text{ cm}^2$



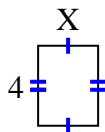
12) Area =  $4 \text{ cm}^2$



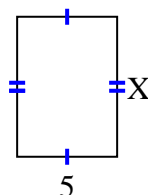
13) Area =  $6 \text{ cm}^2$



14) Area =  $12 \text{ cm}^2$



15) Area =  $35 \text{ cm}^2$



1. 8
2. 8
3. 5
4. 8
5. 5
6. 3
7. 4
8. 7
9. 6
10. 9
11. 9
12. 2
13. 3
14. 3
15. 7