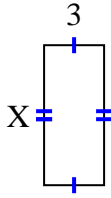




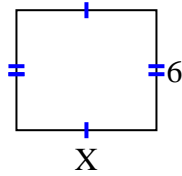
Find the value of X for each figure. Each figure is in centimeters (cm). Not to scale.

Answers

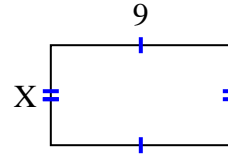
1) Area = 21 cm^2



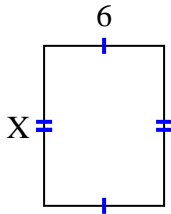
2) Area = 42 cm^2



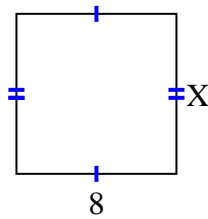
3) Area = 45 cm^2



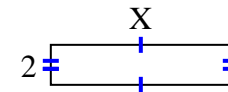
4) Area = 48 cm^2



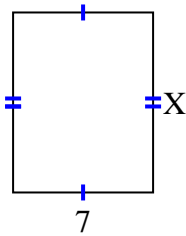
5) Area = 64 cm^2



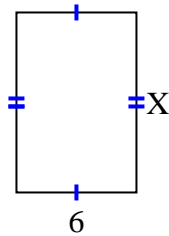
6) Area = 18 cm^2



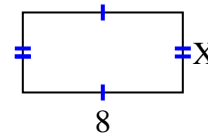
7) Area = 63 cm^2



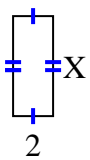
8) Area = 54 cm^2



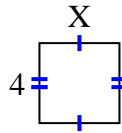
9) Area = 32 cm^2



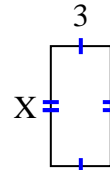
10) Area = 10 cm^2



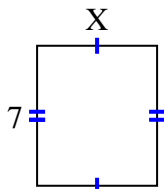
11) Area = 16 cm^2



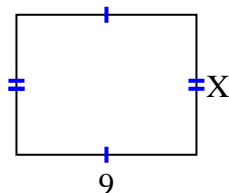
12) Area = 18 cm^2



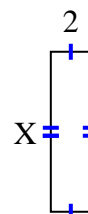
13) Area = 42 cm^2



14) Area = 63 cm^2



15) Area = 16 cm^2



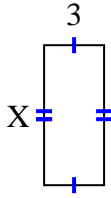
1. _____
2. _____
3. _____
4. _____
5. _____
6. _____
7. _____
8. _____
9. _____
10. _____
11. _____
12. _____
13. _____
14. _____
15. _____



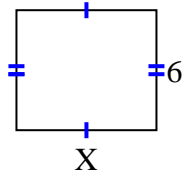
Find the value of X for each figure. Each figure is in centimeters (cm). Not to scale.

Answers

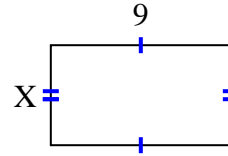
1) Area = 21 cm^2



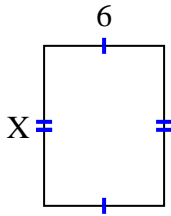
2) Area = 42 cm^2



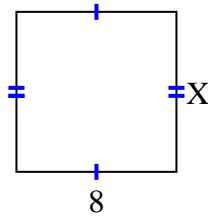
3) Area = 45 cm^2



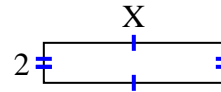
4) Area = 48 cm^2



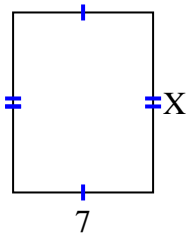
5) Area = 64 cm^2



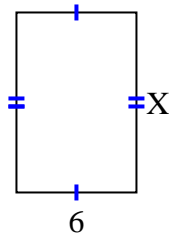
6) Area = 18 cm^2



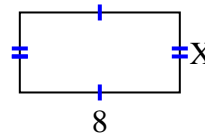
7) Area = 63 cm^2



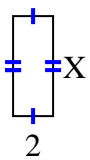
8) Area = 54 cm^2



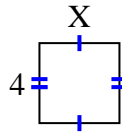
9) Area = 32 cm^2



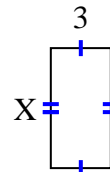
10) Area = 10 cm^2



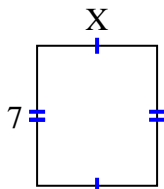
11) Area = 16 cm^2



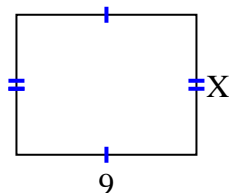
12) Area = 18 cm^2



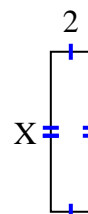
13) Area = 42 cm^2



14) Area = 63 cm^2



15) Area = 16 cm^2



1. 7
2. 7
3. 5
4. 8
5. 8
6. 9
7. 9
8. 9
9. 4
10. 5
11. 4
12. 6
13. 6
14. 7
15. 8