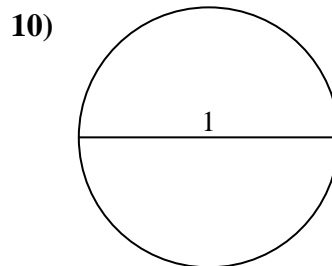
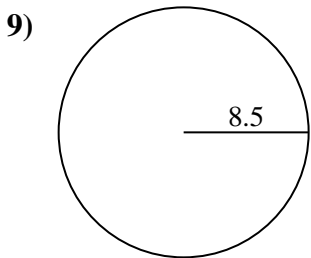
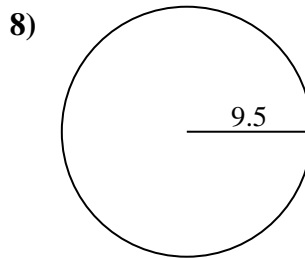
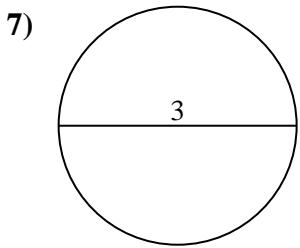
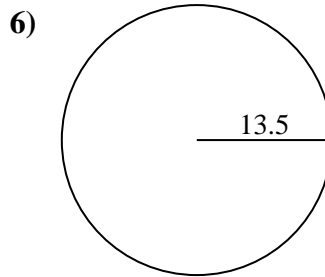
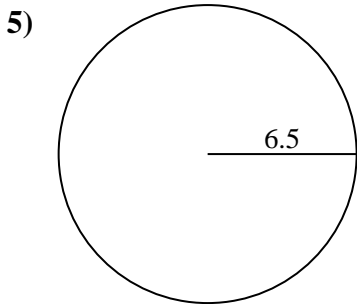
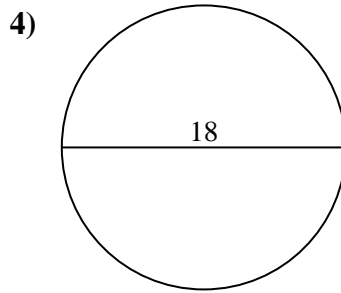
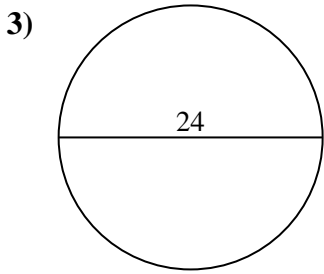
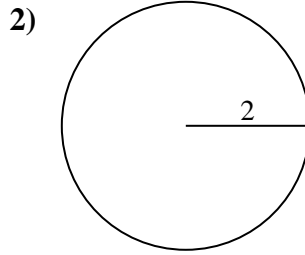
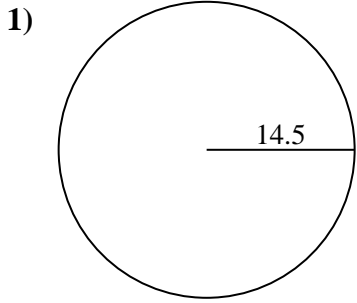




Find the circumference (in cm) of each circle. Circles are not to scale.



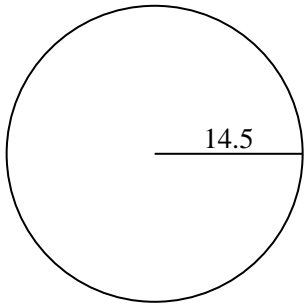
Answers

- 1. _____
- 2. _____
- 3. _____
- 4. _____
- 5. _____
- 6. _____
- 7. _____
- 8. _____
- 9. _____
- 10. _____

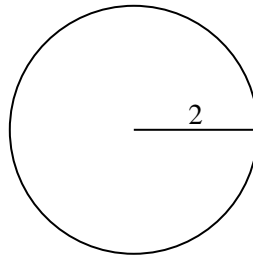


Find the circumference (in cm) of each circle. Circles are not to scale.

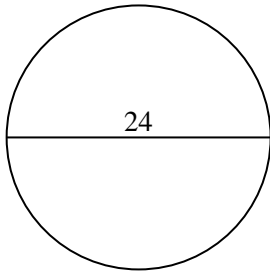
1)



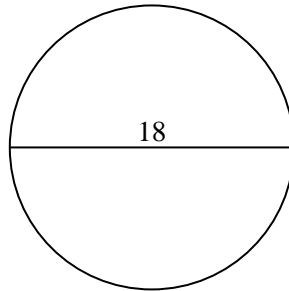
2)



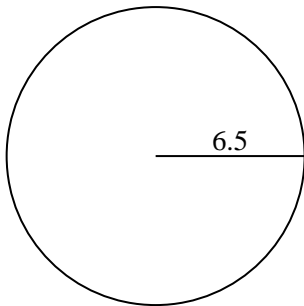
3)



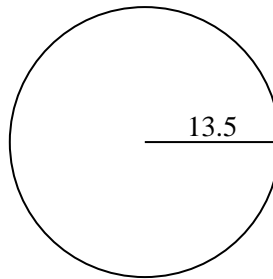
4)



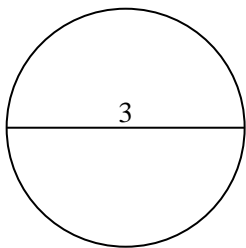
5)



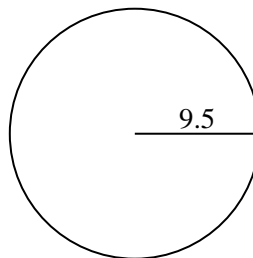
6)



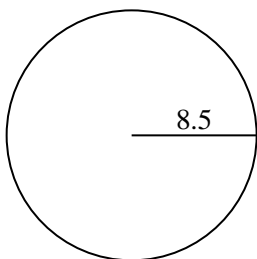
7)



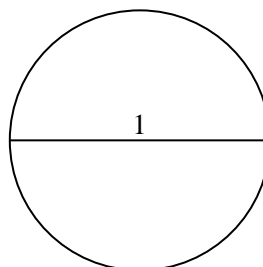
8)



9)



10)

**Answers**1. **91.11 cm**2. **12.57 cm**3. **75.4 cm**4. **56.55 cm**5. **40.84 cm**6. **84.82 cm**7. **9.42 cm**8. **59.69 cm**9. **53.41 cm**10. **3.14 cm**



Find the circumference (in cm) of each circle. Circles are not to scale.

9.42 cm

75.4 cm

53.41 cm

40.84 cm

3.14 cm

84.82 cm

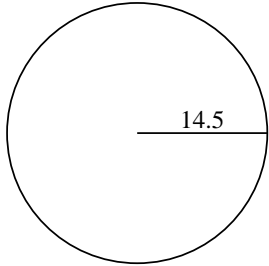
59.69 cm

56.55 cm

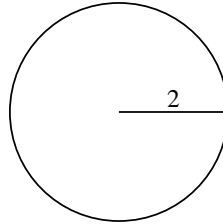
12.57 cm

91.11 cm

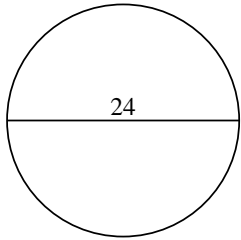
1)



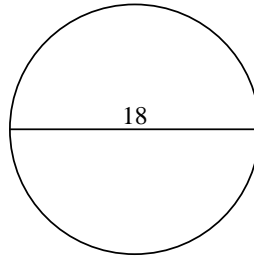
2)



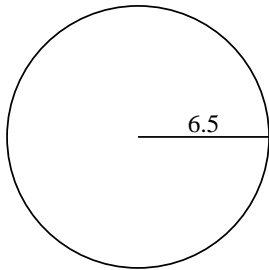
3)



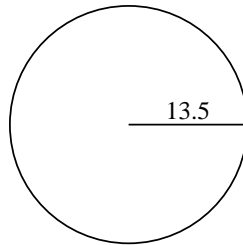
4)



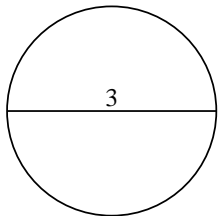
5)



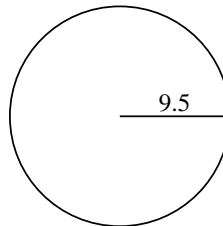
6)



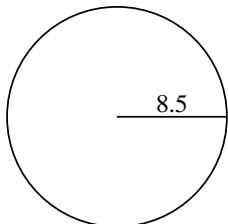
7)



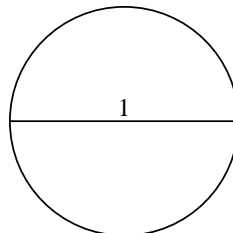
8)



9)



10)



Answers

1. _____

2. _____

3. _____

4. _____

5. _____

6. _____

7. _____

8. _____

9. _____

10. _____