



Determine if the angle shown is 'less', 'more' or 'equal' to 90°.

Ex)



1)



2)



Answers

Ex. less

1. \_\_\_\_\_

2. \_\_\_\_\_

3. \_\_\_\_\_

4. \_\_\_\_\_

5. \_\_\_\_\_

6. \_\_\_\_\_

7. \_\_\_\_\_

8. \_\_\_\_\_

9. \_\_\_\_\_

10. \_\_\_\_\_

11. \_\_\_\_\_

12. \_\_\_\_\_

13. \_\_\_\_\_

14. \_\_\_\_\_

15. \_\_\_\_\_

16. \_\_\_\_\_

17. \_\_\_\_\_

18. \_\_\_\_\_

19. \_\_\_\_\_

20. \_\_\_\_\_

3)



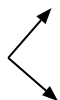
4)



5)



6)



7)




8)



9)



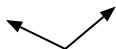
10)



11)



12)



13)



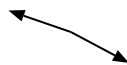
14)



15)



16)



17)



18)



19)



20)





Determine if the angle shown is 'less', 'more' or 'equal' to 90°.

Ex)



1)



2)



Answers

Ex. less

3)



4)



5)



1. less

6)



7)



8)



2. less

3. less

4. less

5. less

6. equal

7. more

8. less

9)



10)



11)

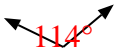


9. equal

10. more

11. less

12)



13)



14)



12. more

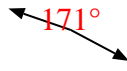
13. equal

14. more

15)



16)



17)



15. equal

16. more

17. equal

18)



19)



20)



18. more

19. equal

20. more