



Determine if the angle shown is 'less', 'more' or 'equal' to 90°.

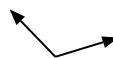
Ex)



1)



2)



Answers

Ex. less

1. _____

2. _____

3. _____

4. _____

5. _____

6. _____

7. _____

8. _____

9. _____

10. _____

11. _____

12. _____

13. _____

14. _____

15. _____

16. _____

17. _____

18. _____

19. _____

20. _____

3)



4)



5)



6)



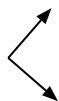
7)



8)



9)



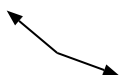
10)



11)



12)



13)



14)



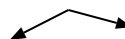
15)



16)



17)



18)



19)



20)





Determine if the angle shown is 'less', 'more' or 'equal' to 90°.

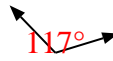
Ex)



1)



2)



Answers

Ex. less

3)



4)



5)



1. equal

6)



7)



8)



2. more

3. equal

4. equal

5. more

6. less

7. less

8. equal

9)



10)



11)

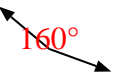


9. equal

10. less

11. more

12)



13)



14)



12. more

13. equal

14. less


15)



16)



17)



15. more

16. equal

17. more

18)



19)



20)



18. less

19. less

20. less