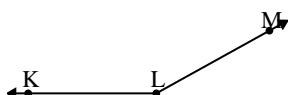




Solve each problem.

Answers

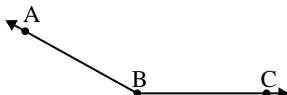
1)



Which choice best represents $\angle KLM$?

- A. 95°
- B. 41°
- C. 19°
- D. 151°

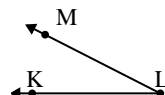
2)



Which choice best represents $\angle ABC$?

- A. 62°
- B. 151°
- C. 90°
- D. 9°

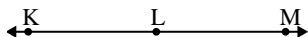
3)



Which choice best represents $\angle KLM$?

- A. 94°
- B. 27°
- C. 140°
- D. 177°

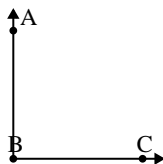
4)



Which choice best represents $\angle KLM$?

- A. 141°
- B. 36°
- C. 89°
- D. 180°

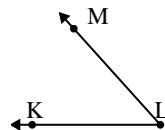
5)



Which choice best represents $\angle ABC$?

- A. 90°
- B. 6°
- C. 130°
- D. 44°

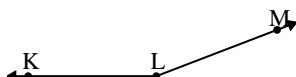
6)



Which choice best represents $\angle KLM$?

- A. 93°
- B. 48°
- C. 150°
- D. 127°

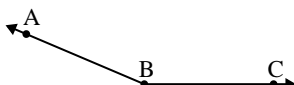
7)



Which choice best represents $\angle KLM$?

- A. 54°
- B. 159°
- C. 97°
- D. 21°

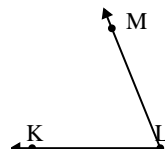
8)



Which choice best represents $\angle ABC$?

- A. 157°
- B. 72°
- C. 26°
- D. 127°

9)



Which choice best represents $\angle KLM$?

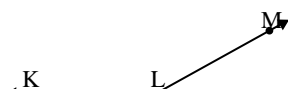
- A. 173°
- B. 110°
- C. 137°
- D. 68°

- 1. _____
- 2. _____
- 3. _____
- 4. _____
- 5. _____
- 6. _____
- 7. _____
- 8. _____
- 9. _____



Solve each problem.

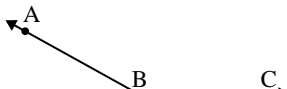
1)



Which choice best represents $\angle KLM$?

- A. 95°
- B. 41°
- C. 19°
- D. 151°

2)



Which choice best represents $\angle ABC$?

- A. 62°
- B. 151°
- C. 90°
- D. 9°

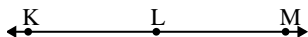
3)



Which choice best represents $\angle KLM$?

- A. 94°
- B. 27°
- C. 140°
- D. 177°

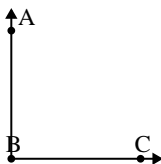
4)



Which choice best represents $\angle KLM$?

- A. 141°
- B. 36°
- C. 89°
- D. 180°

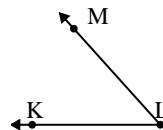
5)



Which choice best represents $\angle ABC$?

- A. 90°
- B. 6°
- C. 130°
- D. 44°

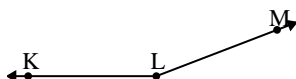
6)



Which choice best represents $\angle KLM$?

- A. 93°
- B. 48°
- C. 150°
- D. 127°

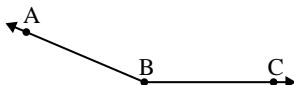
7)



Which choice best represents $\angle KLM$?

- A. 54°
- B. 159°
- C. 97°
- D. 21°

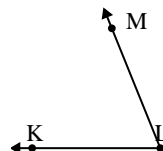
8)



Which choice best represents $\angle ABC$?

- A. 157°
- B. 72°
- C. 26°
- D. 127°

9)



Which choice best represents $\angle KLM$?

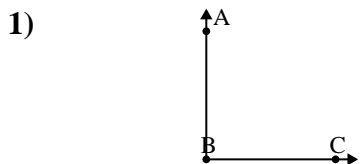
- A. 173°
- B. 110°
- C. 137°
- D. 68°

Answers

- 1. **D**
- 2. **B**
- 3. **B**
- 4. **D**
- 5. **A**
- 6. **B**
- 7. **B**
- 8. **A**
- 9. **D**

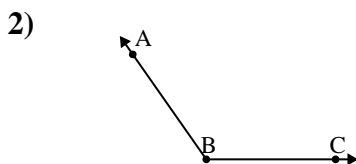


Solve each problem.



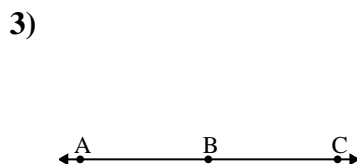
Which choice best represents $\angle ABC$?

- A. 179°
- B. 0°
- C. 58°
- D. 90°



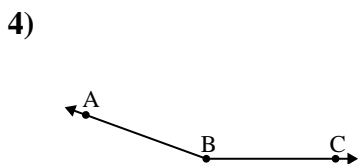
Which choice best represents $\angle ABC$?

- A. 47°
- B. 102°
- C. 125°
- D. 18°



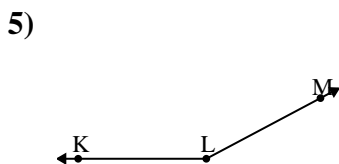
Which choice best represents $\angle ABC$?

- A. 116°
- B. 84°
- C. 180°
- D. 138°



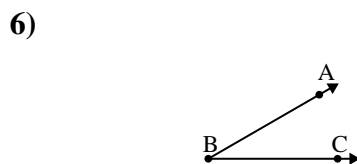
Which choice best represents $\angle ABC$?

- A. 92°
- B. 113°
- C. 54°
- D. 160°



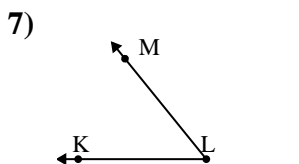
Which choice best represents $\angle KLM$?

- A. 152°
- B. 95°
- C. 9°
- D. 34°



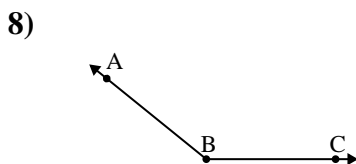
Which choice best represents $\angle ABC$?

- A. 154°
- B. 30°
- C. 53°
- D. 99°



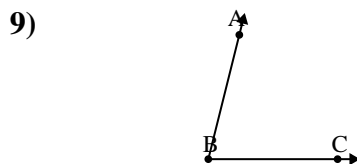
Which choice best represents $\angle KLM$?

- A. 173°
- B. 109°
- C. 51°
- D. 25°



Which choice best represents $\angle ABC$?

- A. 165°
- B. 76°
- C. 141°
- D. 14°



Which choice best represents $\angle ABC$?

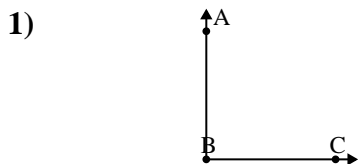
- A. 76°
- B. 18°
- C. 162°
- D. 141°

Answers

- 1. _____
- 2. _____
- 3. _____
- 4. _____
- 5. _____
- 6. _____
- 7. _____
- 8. _____
- 9. _____

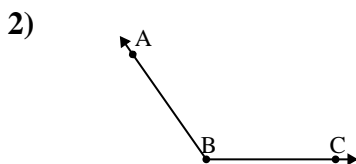


Solve each problem.



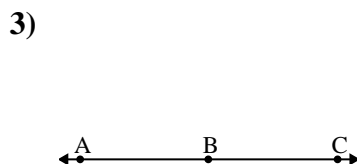
Which choice best represents $\angle ABC$?

- A. 179°
- B. 0°
- C. 58°
- D. 90°



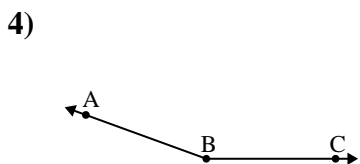
Which choice best represents $\angle ABC$?

- A. 47°
- B. 102°
- C. 125°
- D. 18°



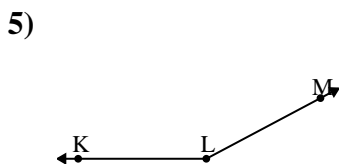
Which choice best represents $\angle ABC$?

- A. 116°
- B. 84°
- C. 180°
- D. 138°



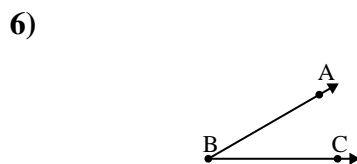
Which choice best represents $\angle ABC$?

- A. 92°
- B. 113°
- C. 54°
- D. 160°



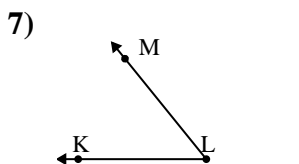
Which choice best represents $\angle KLM$?

- A. 152°
- B. 95°
- C. 9°
- D. 34°



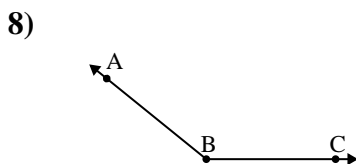
Which choice best represents $\angle ABC$?

- A. 154°
- B. 30°
- C. 53°
- D. 99°



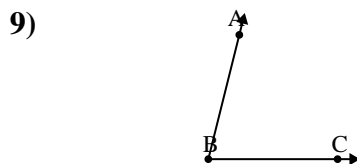
Which choice best represents $\angle KLM$?

- A. 173°
- B. 109°
- C. 51°
- D. 25°



Which choice best represents $\angle ABC$?

- A. 165°
- B. 76°
- C. 141°
- D. 14°



Which choice best represents $\angle ABC$?

- A. 76°
- B. 18°
- C. 162°
- D. 141°

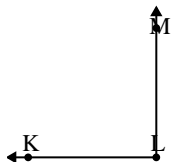
Answers

- 1. **D**
- 2. **C**
- 3. **C**
- 4. **D**
- 5. **A**
- 6. **B**
- 7. **C**
- 8. **C**
- 9. **A**



Solve each problem.

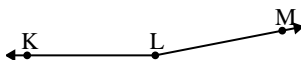
1)



Which choice best represents $\angle KLM$?

- A. 31°
- B. 141°
- C. 90°
- D. 176°

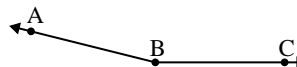
2)



Which choice best represents $\angle KLM$?

- A. 122°
- B. 169°
- C. 22°
- D. 95°

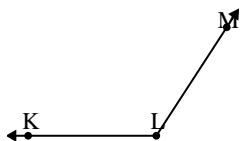
3)



Which choice best represents $\angle ABC$?

- A. 166°
- B. 58°
- C. 134°
- D. 29°

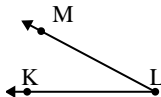
4)



Which choice best represents $\angle KLM$?

- A. 53°
- B. 26°
- C. 123°
- D. 5°

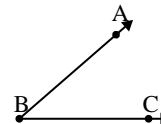
5)



Which choice best represents $\angle KLM$?

- A. 163°
- B. 28°
- C. 88°
- D. 136°

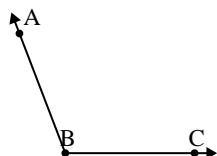
6)



Which choice best represents $\angle ABC$?

- A. 125°
- B. 162°
- C. 87°
- D. 41°

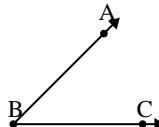
7)



Which choice best represents $\angle ABC$?

- A. 75°
- B. 27°
- C. 111°
- D. 149°

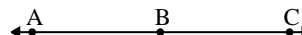
8)



Which choice best represents $\angle ABC$?

- A. 45°
- B. 112°
- C. 146°
- D. 20°

9)



Which choice best represents $\angle ABC$?

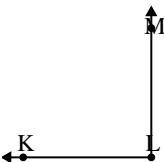
- A. 77°
- B. 135°
- C. 180°
- D. 98°

Answers

- 1. _____
- 2. _____
- 3. _____
- 4. _____
- 5. _____
- 6. _____
- 7. _____
- 8. _____
- 9. _____

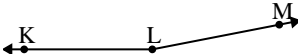


Solve each problem.

1) 

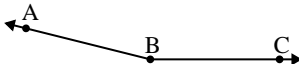
Which choice best represents $\angle KLM$?

A. 31°
 B. 141°
 C. 90°
 D. 176°

2) 

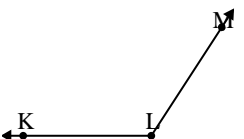
Which choice best represents $\angle KLM$?

A. 122°
 B. 169°
 C. 22°
 D. 95°

3) 

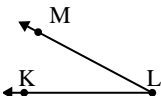
Which choice best represents $\angle ABC$?

A. 166°
 B. 58°
 C. 134°
 D. 29°

4) 

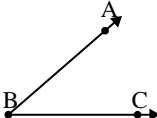
Which choice best represents $\angle KLM$?

A. 53°
 B. 26°
 C. 123°
 D. 5°

5) 

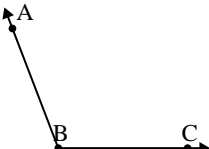
Which choice best represents $\angle KLM$?

A. 163°
 B. 28°
 C. 88°
 D. 136°

6) 

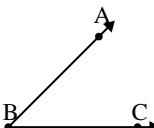
Which choice best represents $\angle ABC$?

A. 125°
 B. 162°
 C. 87°
 D. 41°

7) 


Which choice best represents $\angle ABC$?

A. 75°
 B. 27°
 C. 111°
 D. 149°

8) 

Which choice best represents $\angle ABC$?

A. 45°
 B. 112°
 C. 146°
 D. 20°

9) 

Which choice best represents $\angle ABC$?

A. 77°
 B. 135°
 C. 180°
 D. 98°

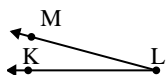
Answers

1. **C**
2. **B**
3. **A**
4. **C**
5. **B**
6. **D**
7. **C**
8. **A**
9. **C**



Solve each problem.

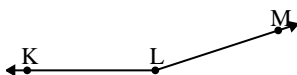
1)



Which choice best represents $\angle KLM$?

- A. 54°
- B. 158°
- C. 87°
- D. 15°

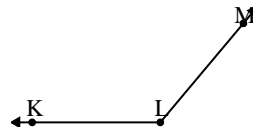
2)



Which choice best represents $\angle KLM$?

- A. 86°
- B. 162°
- C. 133°
- D. 14°

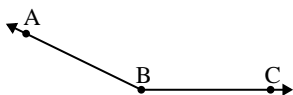
3)



Which choice best represents $\angle KLM$?

- A. 32°
- B. 169°
- C. 130°
- D. 63°

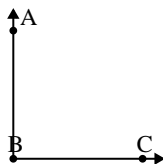
4)



Which choice best represents $\angle ABC$?

- A. 154°
- B. 5°
- C. 114°
- D. 84°

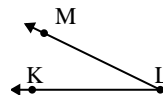
5)



Which choice best represents $\angle ABC$?

- A. 21°
- B. 167°
- C. 90°
- D. 144°

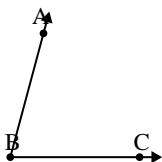
6)



Which choice best represents $\angle KLM$?

- A. 26°
- B. 111°
- C. 4°
- D. 171°

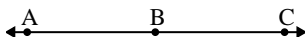
7)



Which choice best represents $\angle ABC$?

- A. 75°
- B. 100°
- C. 54°
- D. 166°

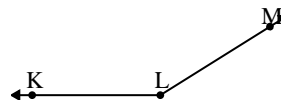
8)



Which choice best represents $\angle ABC$?

- A. 79°
- B. 180°
- C. 138°
- D. 47°

9)



Which choice best represents $\angle KLM$?

- A. 86°
- B. 148°
- C. 50°
- D. 27°

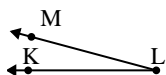
Answers

1. _____
2. _____
3. _____
4. _____
5. _____
6. _____
7. _____
8. _____
9. _____



Solve each problem.

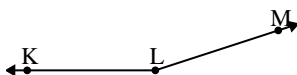
1)



Which choice best represents $\angle KLM$?

- A. 54°
- B. 158°
- C. 87°
- D. 15°

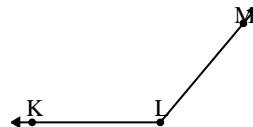
2)



Which choice best represents $\angle KLM$?

- A. 86°
- B. 162°
- C. 133°
- D. 14°

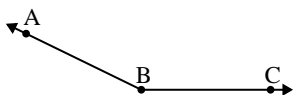
3)



Which choice best represents $\angle KLM$?

- A. 32°
- B. 169°
- C. 130°
- D. 63°

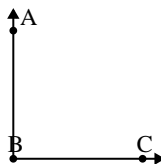
4)



Which choice best represents $\angle ABC$?

- A. 154°
- B. 5°
- C. 114°
- D. 84°

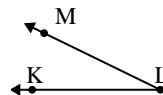
5)



Which choice best represents $\angle ABC$?

- A. 21°
- B. 167°
- C. 90°
- D. 144°

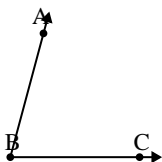
6)



Which choice best represents $\angle KLM$?

- A. 26°
- B. 111°
- C. 4°
- D. 171°

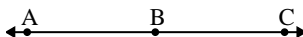
7)



Which choice best represents $\angle ABC$?

- A. 75°
- B. 100°
- C. 54°
- D. 166°

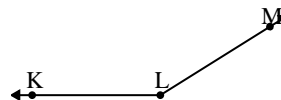
8)



Which choice best represents $\angle ABC$?

- A. 79°
- B. 180°
- C. 138°
- D. 47°

9)



Which choice best represents $\angle KLM$?

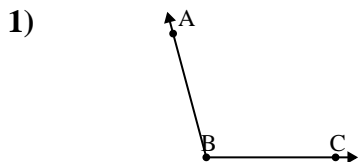
- A. 86°
- B. 148°
- C. 50°
- D. 27°

Answers

- 1. **D**
- 2. **B**
- 3. **C**
- 4. **A**
- 5. **C**
- 6. **A**
- 7. **A**
- 8. **B**
- 9. **B**

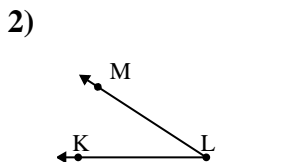


Solve each problem.



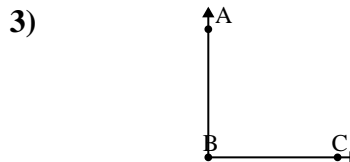
Which choice best represents $\angle ABC$?

- A. 105°
- B. 51°
- C. 77°
- D. 169°



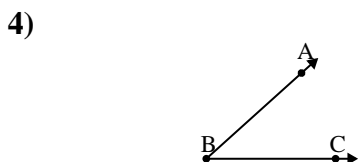
Which choice best represents $\angle KLM$?

- A. 114°
- B. 33°
- C. 169°
- D. 66°



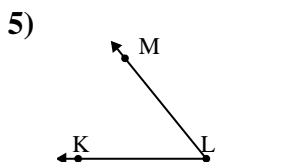
Which choice best represents $\angle ABC$?

- A. 160°
- B. 23°
- C. 90°
- D. 135°



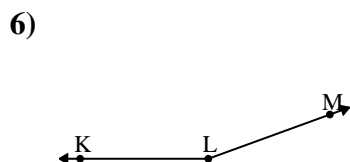
Which choice best represents $\angle ABC$?

- A. 176°
- B. 4°
- C. 128°
- D. 42°



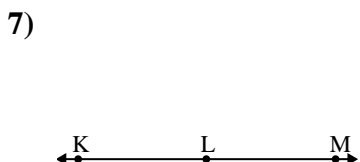
Which choice best represents $\angle KLM$?

- A. 116°
- B. 29°
- C. 73°
- D. 51°



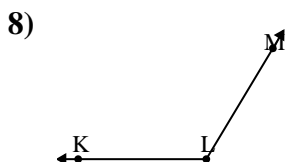
Which choice best represents $\angle KLM$?

- A. 73°
- B. 160°
- C. 116°
- D. 51°



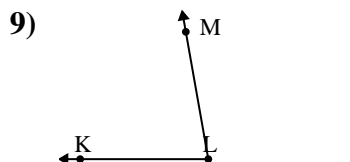
Which choice best represents $\angle KLM$?

- A. 9°
- B. 72°
- C. 180°
- D. 114°



Which choice best represents $\angle KLM$?

- A. 121°
- B. 164°
- C. 10°
- D. 63°



Which choice best represents $\angle KLM$?

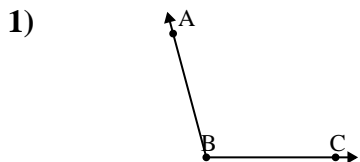
- A. 53°
- B. 80°
- C. 137°
- D. 1°

Answers

- 1. _____
- 2. _____
- 3. _____
- 4. _____
- 5. _____
- 6. _____
- 7. _____
- 8. _____
- 9. _____

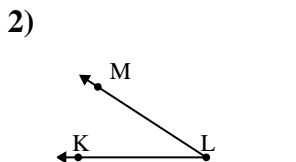


Solve each problem.



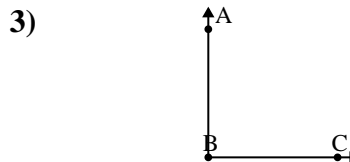
Which choice best represents $\angle ABC$?

- A. 105°
- B. 51°
- C. 77°
- D. 169°



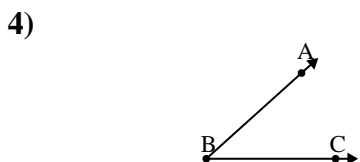
Which choice best represents $\angle KLM$?

- A. 114°
- B. 33°
- C. 169°
- D. 66°



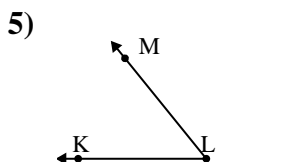
Which choice best represents $\angle ABC$?

- A. 160°
- B. 23°
- C. 90°
- D. 135°



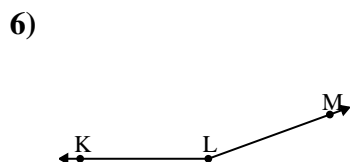
Which choice best represents $\angle ABC$?

- A. 176°
- B. 4°
- C. 128°
- D. 42°



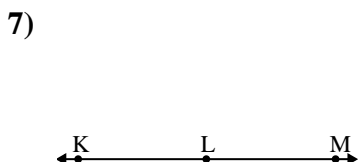
Which choice best represents $\angle KLM$?

- A. 116°
- B. 29°
- C. 73°
- D. 51°



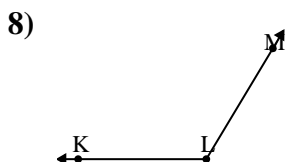
Which choice best represents $\angle KLM$?

- A. 73°
- B. 160°
- C. 116°
- D. 51°



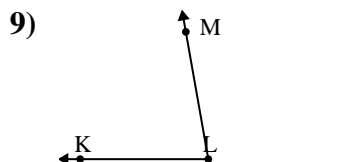
Which choice best represents $\angle KLM$?

- A. 9°
- B. 72°
- C. 180°
- D. 114°



Which choice best represents $\angle KLM$?

- A. 121°
- B. 164°
- C. 10°
- D. 63°



Which choice best represents $\angle KLM$?

- A. 53°
- B. 80°
- C. 137°
- D. 1°

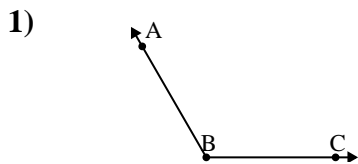
Answers

- 1. **A**
- 2. **B**
- 3. **C**
- 4. **D**
- 5. **D**
- 6. **B**
- 7. **C**
- 8. **A**
- 9. **B**



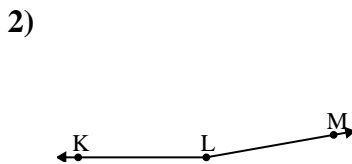
Solve each problem.

Answers



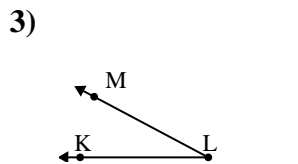
Which choice best represents $\angle ABC$?

- A. 120°
- B. 97°
- C. 175°
- D. 56°



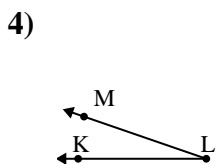
Which choice best represents $\angle KLM$?

- A. 30°
- B. 135°
- C. 170°
- D. 100°



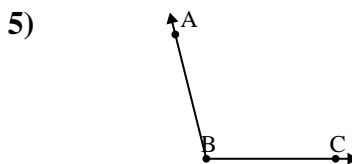
Which choice best represents $\angle KLM$?

- A. 28°
- B. 126°
- C. 52°
- D. 3°



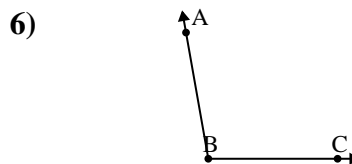
Which choice best represents $\angle KLM$?

- A. 134°
- B. 177°
- C. 19°
- D. 92°



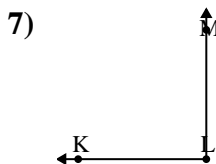
Which choice best represents $\angle ABC$?

- A. 138°
- B. 54°
- C. 168°
- D. 104°



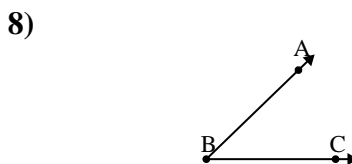
Which choice best represents $\angle ABC$?

- A. 41°
- B. 100°
- C. 68°
- D. 125°



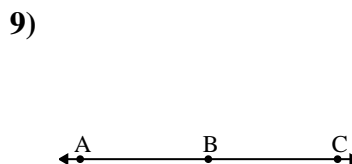
Which choice best represents $\angle KLM$?

- A. 121°
- B. 19°
- C. 90°
- D. 65°



Which choice best represents $\angle ABC$?

- A. 125°
- B. 92°
- C. 44°
- D. 68°



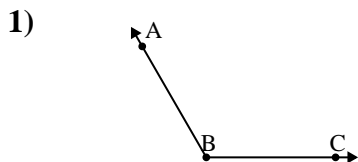
Which choice best represents $\angle ABC$?

- A. 149°
- B. 43°
- C. 180°
- D. 82°

- 1. _____
- 2. _____
- 3. _____
- 4. _____
- 5. _____
- 6. _____
- 7. _____
- 8. _____
- 9. _____

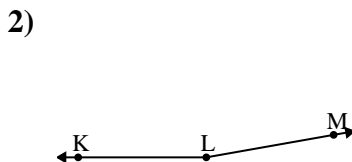


Solve each problem.



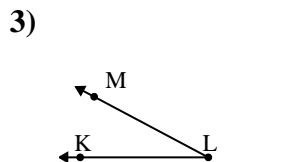
Which choice best represents $\angle ABC$?

- A. 120°
- B. 97°
- C. 175°
- D. 56°



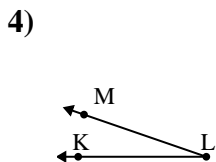
Which choice best represents $\angle KLM$?

- A. 30°
- B. 135°
- C. 170°
- D. 100°



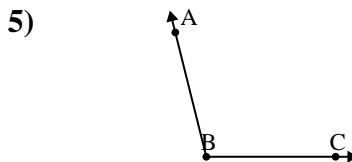
Which choice best represents $\angle KLM$?

- A. 28°
- B. 126°
- C. 52°
- D. 3°



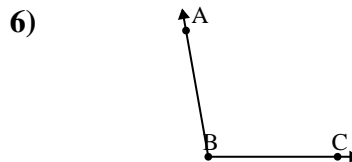
Which choice best represents $\angle KLM$?

- A. 134°
- B. 177°
- C. 19°
- D. 92°



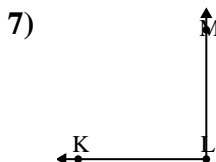
Which choice best represents $\angle ABC$?

- A. 138°
- B. 54°
- C. 168°
- D. 104°



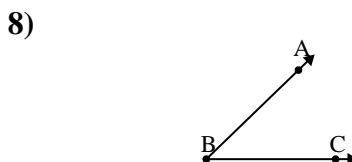
Which choice best represents $\angle ABC$?

- A. 41°
- B. 100°
- C. 68°
- D. 125°



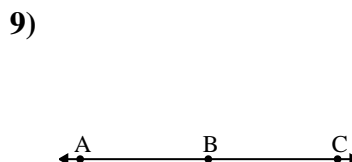
Which choice best represents $\angle KLM$?

- A. 121°
- B. 19°
- C. 90°
- D. 65°



Which choice best represents $\angle ABC$?

- A. 125°
- B. 92°
- C. 44°
- D. 68°



Which choice best represents $\angle ABC$?

- A. 149°
- B. 43°
- C. 180°
- D. 82°

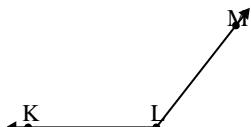
Answers

- 1. **A**
- 2. **C**
- 3. **A**
- 4. **C**
- 5. **D**
- 6. **B**
- 7. **C**
- 8. **C**
- 9. **C**



Solve each problem.

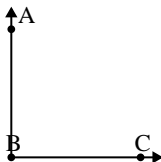
1)



Which choice best represents $\angle KLM$?

- A. 128°
- B. 21°
- C. 158°
- D. 47°

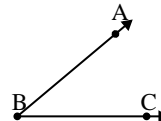
2)



Which choice best represents $\angle ABC$?

- A. 23°
- B. 173°
- C. 124°
- D. 90°

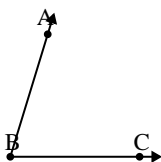
3)



Which choice best represents $\angle ABC$?

- A. 123°
- B. 84°
- C. 160°
- D. 40°

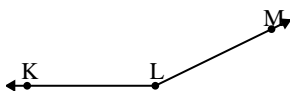
4)



Which choice best represents $\angle ABC$?

- A. 131°
- B. 35°
- C. 106°
- D. 73°

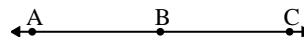
5)



Which choice best represents $\angle KLM$?

- A. 92°
- B. 121°
- C. 38°
- D. 154°

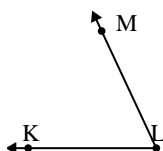
6)



Which choice best represents $\angle ABC$?

- A. 146°
- B. 97°
- C. 180°
- D. 34°

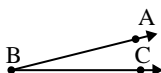
7)



Which choice best represents $\angle KLM$?

- A. 136°
- B. 27°
- C. 106°
- D. 65°

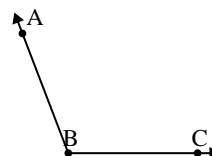
8)



Which choice best represents $\angle ABC$?

- A. 175°
- B. 90°
- C. 14°
- D. 149°

9)



Which choice best represents $\angle ABC$?

- A. 7°
- B. 149°
- C. 177°
- D. 111°

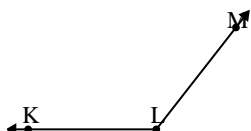
Answers

1. _____
2. _____
3. _____
4. _____
5. _____
6. _____
7. _____
8. _____
9. _____



Solve each problem.

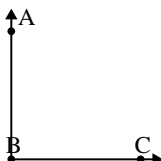
1)



Which choice best represents $\angle KLM$?

- A. 128°
- B. 21°
- C. 158°
- D. 47°

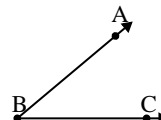
2)



Which choice best represents $\angle ABC$?

- A. 23°
- B. 173°
- C. 124°
- D. 90°

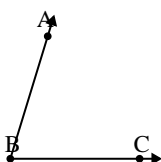
3)



Which choice best represents $\angle ABC$?

- A. 123°
- B. 84°
- C. 160°
- D. 40°

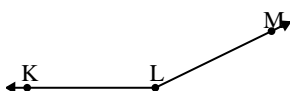
4)



Which choice best represents $\angle ABC$?

- A. 131°
- B. 35°
- C. 106°
- D. 73°

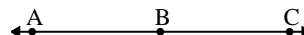
5)



Which choice best represents $\angle KLM$?

- A. 92°
- B. 121°
- C. 38°
- D. 154°

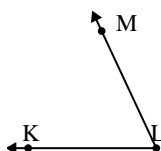
6)



Which choice best represents $\angle ABC$?

- A. 146°
- B. 97°
- C. 180°
- D. 34°

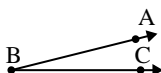
7)



Which choice best represents $\angle KLM$?

- A. 136°
- B. 27°
- C. 106°
- D. 65°

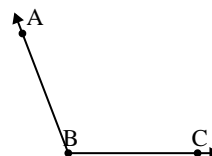
8)



Which choice best represents $\angle ABC$?

- A. 175°
- B. 90°
- C. 14°
- D. 149°

9)



Which choice best represents $\angle ABC$?

- A. 7°
- B. 149°
- C. 177°
- D. 111°

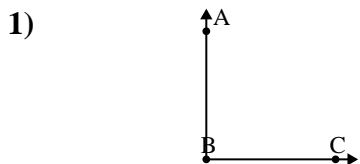
Answers

- 1. **A**
- 2. **D**
- 3. **D**
- 4. **D**
- 5. **D**
- 6. **C**
- 7. **D**
- 8. **C**
- 9. **D**



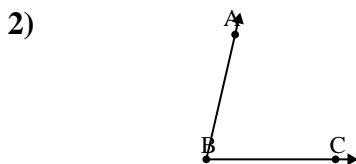
Solve each problem.

Answers



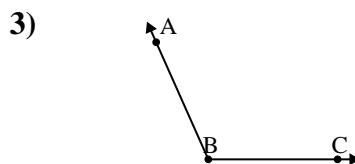
Which choice best represents $\angle ABC$?

- A. 90°
- B. 153°
- C. 113°
- D. 40°



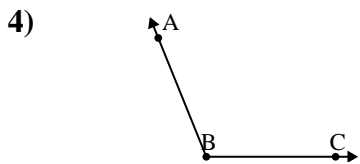
Which choice best represents $\angle ABC$?

- A. 142°
- B. 114°
- C. 20°
- D. 77°



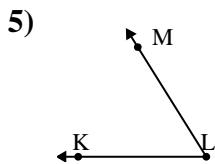
Which choice best represents $\angle ABC$?

- A. 79°
- B. 162°
- C. 39°
- D. 114°



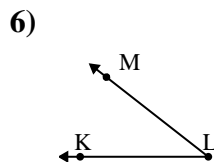
Which choice best represents $\angle ABC$?

- A. 23°
- B. 112°
- C. 168°
- D. 47°



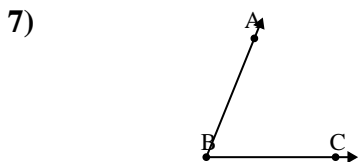
Which choice best represents $\angle KLM$?

- A. 58°
- B. 34°
- C. 10°
- D. 99°



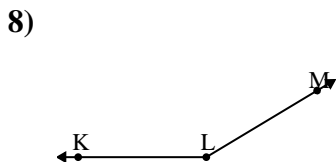
Which choice best represents $\angle KLM$?

- A. 124°
- B. 7°
- C. 38°
- D. 77°



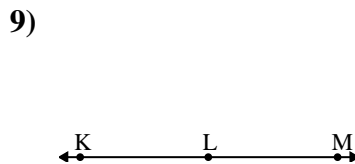
Which choice best represents $\angle ABC$?

- A. 13°
- B. 111°
- C. 149°
- D. 68°



Which choice best represents $\angle KLM$?

- A. 46°
- B. 149°
- C. 81°
- D. 13°



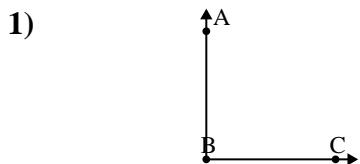
Which choice best represents $\angle KLM$?

- A. 154°
- B. 49°
- C. 107°
- D. 180°

- 1. _____
- 2. _____
- 3. _____
- 4. _____
- 5. _____
- 6. _____
- 7. _____
- 8. _____
- 9. _____

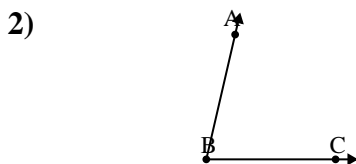


Solve each problem.



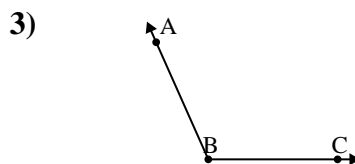
Which choice best represents $\angle ABC$?

- A. 90°
- B. 153°
- C. 113°
- D. 40°



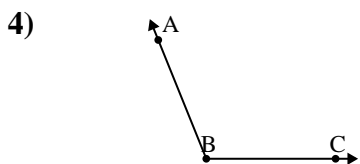
Which choice best represents $\angle ABC$?

- A. 142°
- B. 114°
- C. 20°
- D. 77°



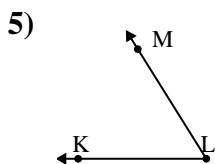
Which choice best represents $\angle ABC$?

- A. 79°
- B. 162°
- C. 39°
- D. 114°



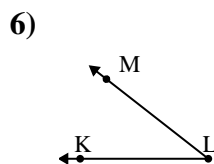
Which choice best represents $\angle ABC$?

- A. 23°
- B. 112°
- C. 168°
- D. 47°



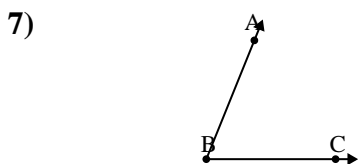
Which choice best represents $\angle KLM$?

- A. 58°
- B. 34°
- C. 10°
- D. 99°



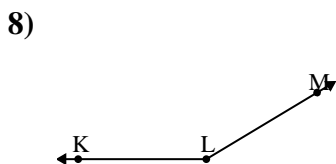
Which choice best represents $\angle KLM$?

- A. 124°
- B. 7°
- C. 38°
- D. 77°



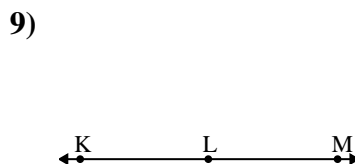
Which choice best represents $\angle ABC$?

- A. 13°
- B. 111°
- C. 149°
- D. 68°



Which choice best represents $\angle KLM$?

- A. 46°
- B. 149°
- C. 81°
- D. 13°



Which choice best represents $\angle KLM$?

- A. 154°
- B. 49°
- C. 107°
- D. 180°

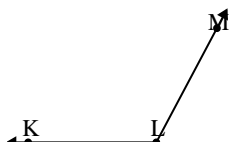
Answers

- 1. **A**
- 2. **D**
- 3. **D**
- 4. **B**
- 5. **A**
- 6. **C**
- 7. **D**
- 8. **B**
- 9. **D**



Solve each problem.

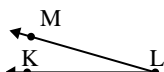
1)



Which choice best represents $\angle KLM$?

- A. 43°
- B. 118°
- C. 158°
- D. 97°

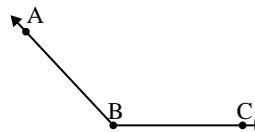
2)



Which choice best represents $\angle KLM$?

- A. 176°
- B. 50°
- C. 16°
- D. 98°

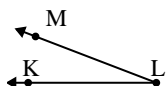
3)



Which choice best represents $\angle ABC$?

- A. 133°
- B. 172°
- C. 60°
- D. 32°

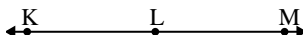
4)



Which choice best represents $\angle KLM$?

- A. 21°
- B. 165°
- C. 108°
- D. 66°

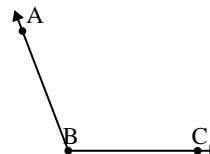
5)



Which choice best represents $\angle KLM$?

- A. 25°
- B. 63°
- C. 154°
- D. 180°

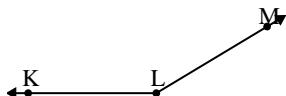
6)



Which choice best represents $\angle ABC$?

- A. 35°
- B. 111°
- C. 174°
- D. 138°

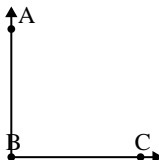
7)



Which choice best represents $\angle KLM$?

- A. 149°
- B. 123°
- C. 171°
- D. 29°

8)



Which choice best represents $\angle ABC$?

- A. 69°
- B. 39°
- C. 137°
- D. 90°

9)



Which choice best represents $\angle ABC$?

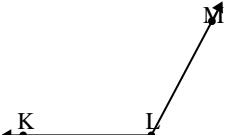
- A. 13°
- B. 172°
- C. 60°
- D. 106°

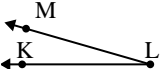
Answers

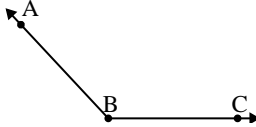
1. _____
2. _____
3. _____
4. _____
5. _____
6. _____
7. _____
8. _____
9. _____

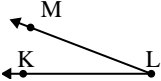


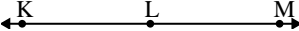
Solve each problem.

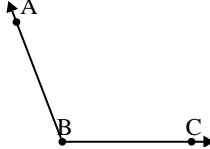
1) 
Which choice best represents $\angle KLM$?
A. 43°
B. 118°
C. 158°
D. 97°

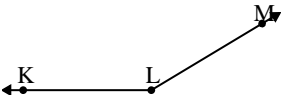
2) 
Which choice best represents $\angle KLM$?
A. 176°
B. 50°
C. 16°
D. 98°

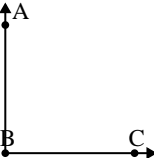
3) 
Which choice best represents $\angle ABC$?
A. 133°
B. 172°
C. 60°
D. 32°


4) 
Which choice best represents $\angle KLM$?
A. 21°
B. 165°
C. 108°
D. 66°

5) 
Which choice best represents $\angle KLM$?
A. 25°
B. 63°
C. 154°
D. 180°

6) 
Which choice best represents $\angle ABC$?
A. 35°
B. 111°
C. 174°
D. 138°

7) 
Which choice best represents $\angle KLM$?
A. 149°
B. 123°
C. 171°
D. 29°

8) 
Which choice best represents $\angle ABC$?
A. 69°
B. 39°
C. 137°
D. 90°

9) 
Which choice best represents $\angle ABC$?
A. 13°
B. 172°
C. 60°
D. 106°

Answers

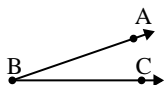
1. **B**
2. **C**
3. **A**
4. **A**
5. **D**
6. **B**
7. **A**
8. **D**
9. **A**



Solve each problem.

Answers

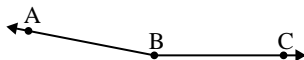
1)



Which choice best represents $\angle ABC$?

- A. 137°
- B. 19°
- C. 43°
- D. 92°

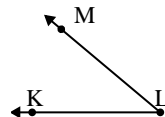
2)



Which choice best represents $\angle ABC$?

- A. 140°
- B. 61°
- C. 169°
- D. 108°

3)




Which choice best represents $\angle KLM$?

- A. 10°
- B. 93°
- C. 70°
- D. 40°

- 1. _____
- 2. _____
- 3. _____
- 4. _____
- 5. _____
- 6. _____
- 7. _____
- 8. _____
- 9. _____

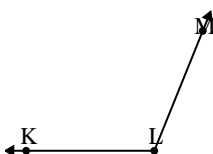
4)



Which choice best represents $\angle ABC$?

- A. 93°
- B. 13°
- C. 38°
- D. 70°

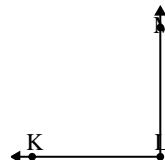
5)



Which choice best represents $\angle KLM$?

- A. 26°
- B. 173°
- C. 112°
- D. 89°

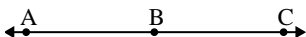
6)



Which choice best represents $\angle KLM$?

- A. 29°
- B. 50°
- C. 155°
- D. 90°

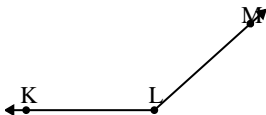
7)



Which choice best represents $\angle ABC$?

- A. 45°
- B. 154°
- C. 180°
- D. 0°

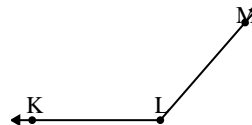
8)



Which choice best represents $\angle KLM$?

- A. 138°
- B. 44°
- C. 22°
- D. 104°

9)



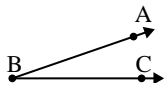
Which choice best represents $\angle KLM$?

- A. 45°
- B. 93°
- C. 131°
- D. 172°



Solve each problem.

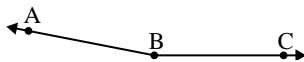
1)



Which choice best represents $\angle ABC$?

- A. 137°
- B. 19°
- C. 43°
- D. 92°

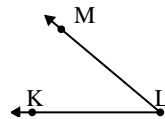
2)



Which choice best represents $\angle ABC$?

- A. 140°
- B. 61°
- C. 169°
- D. 108°


3)



Which choice best represents $\angle KLM$?

- A. 10°
- B. 93°
- C. 70°
- D. 40°

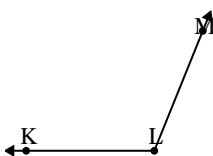
4)



Which choice best represents $\angle ABC$?

- A. 93°
- B. 13°
- C. 38°
- D. 70°

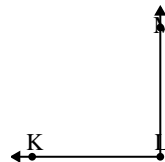
5)



Which choice best represents $\angle KLM$?

- A. 26°
- B. 173°
- C. 112°
- D. 89°

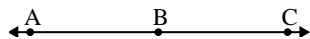
6)



Which choice best represents $\angle KLM$?

- A. 29°
- B. 50°
- C. 155°
- D. 90°

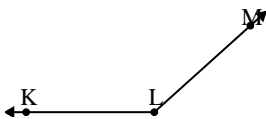
7)



Which choice best represents $\angle ABC$?

- A. 45°
- B. 154°
- C. 180°
- D. 0°

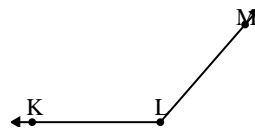
8)



Which choice best represents $\angle KLM$?

- A. 138°
- B. 44°
- C. 22°
- D. 104°

9)



Which choice best represents $\angle KLM$?

- A. 45°
- B. 93°
- C. 131°
- D. 172°

Answers

- 1. **B**
- 2. **C**
- 3. **D**
- 4. **B**
- 5. **C**
- 6. **D**
- 7. **C**
- 8. **A**
- 9. **C**