



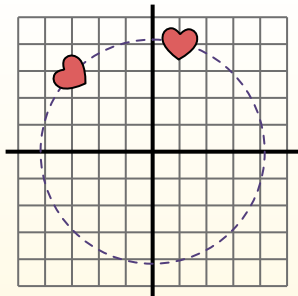
Rotate each shape. Answer as the new coordinates.

θ = Angle of Rotation

Rotation Formula

$$x1 = x \times \cos(\theta) - y \times \sin(\theta)$$

$$y1 = x \times \sin(\theta) + y \times \cos(\theta)$$



In the example to the right the shape is at coordinates (1,4). Lets find the coordinates if we rotated the shape 60°.

1. $x1 = 1 \times \cos(60) - 4 \times \sin(60)$
 $y1 = 1 \times \sin(60) + 4 \times \cos(60)$

2. $x1 = 1 \times 0.5 - 4 \times 0.87$
 $y1 = 1 \times 0.87 + 4 \times 0.5$

3. $x1 = 0.5 - 3.48$
 $y1 = 0.87 + 2$

4. $x1 = -2.98$
 $y1 = 2.87$

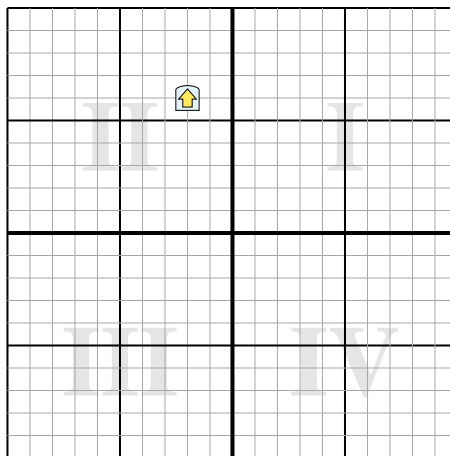
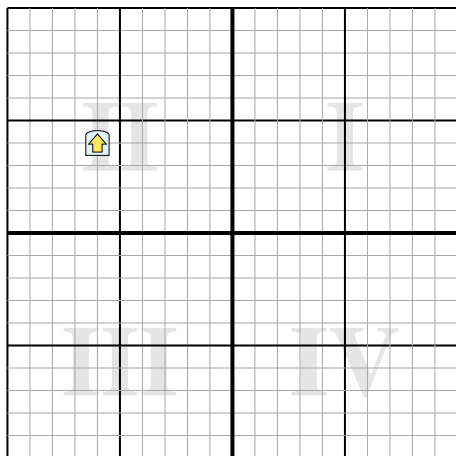
5. Looking at shape, we can see that rotated 60° it is at (-2.98 , 2.87).

Answers

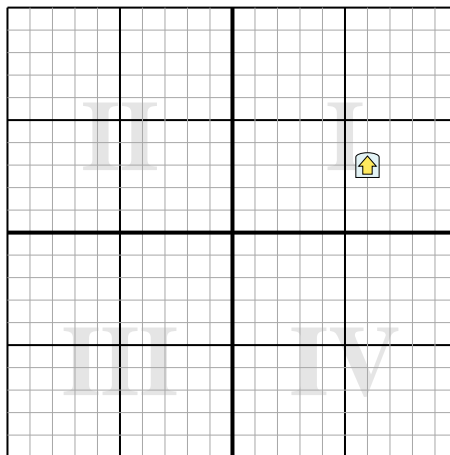
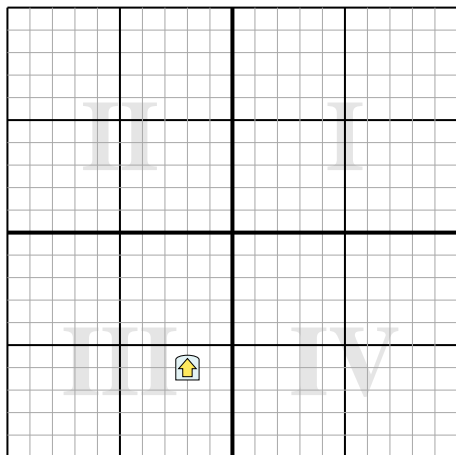
1. _____
2. _____
3. _____
4. _____

1) Rotate the shape -124° around the point (0,0).

2) Rotate the shape -131° around the point (0,0).



3) Rotate the shape 46° around the point (0,0). 4) Rotate the shape 64° around the point (0,0).





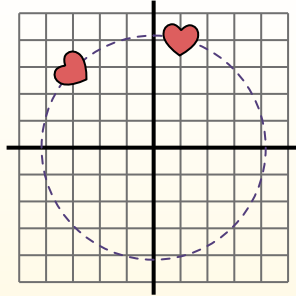
Rotate each shape. Answer as the new coordinates.

θ = Angle of Rotation

Rotation Formula

$$x1 = x \times \cos(\theta) - y \times \sin(\theta)$$

$$y1 = x \times \sin(\theta) + y \times \cos(\theta)$$



In the example to the right the shape is at coordinates (1,4). Lets find the coordinates if we rotated the shape 60°.

1. $x1 = 1 \times \cos(60) - 4 \times \sin(60)$
 $y1 = 1 \times \sin(60) + 4 \times \cos(60)$

2. $x1 = 1 \times 0.5 - 4 \times 0.87$
 $y1 = 1 \times 0.87 + 4 \times 0.5$

3. $x1 = 0.5 - 3.48$
 $y1 = 0.87 + 2$

4. $x1 = -2.98$
 $y1 = 2.87$

5. Looking at shape, we can see that rotated 60° it is at (-2.98 , 2.87).

Answers

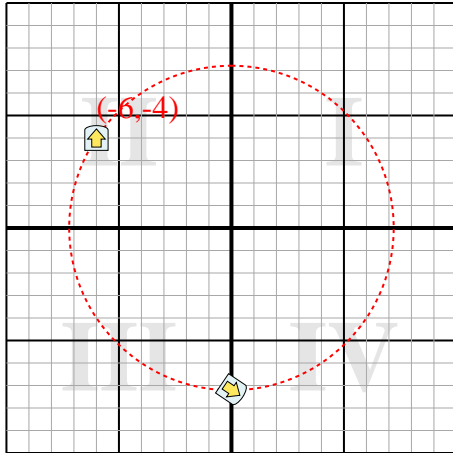
1. (0,-7.2)

2. (-3.2,-5.4)

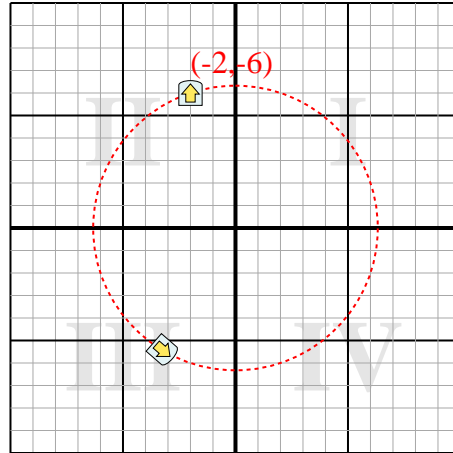
3. (-5.7,-2.7)

4. (5.3,-4.1)

1) Rotate the shape -124° around the point (0,0).



2) Rotate the shape -131° around the point (0,0).



3) Rotate the shape 46° around the point (0,0). 4) Rotate the shape 64° around the point (0,0).

