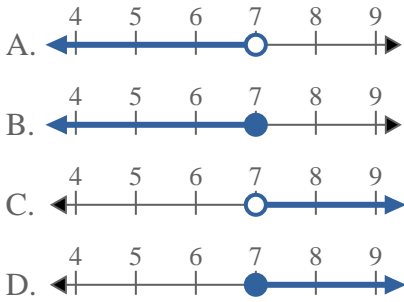


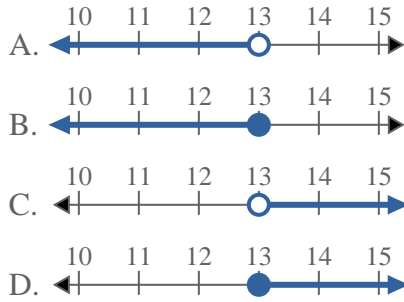


Solve each problem.

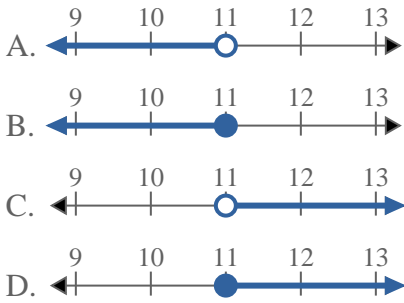
1) Which option best shows $X > 7$



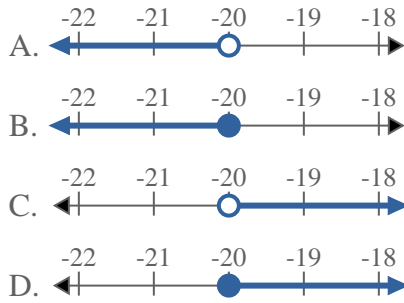
2) Which option best shows $X \geq 13$



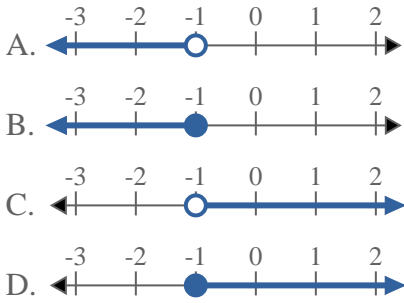
3) Which option best shows $X < 11$



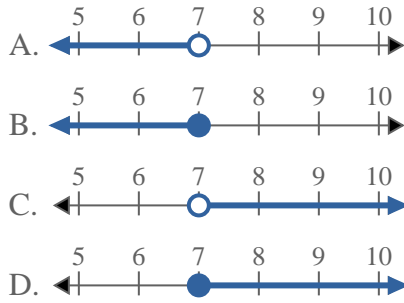
4) Which option best shows $X \leq -20$



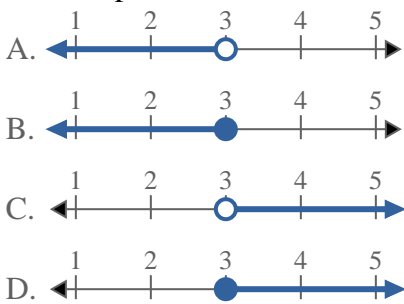
5) Which option best shows $X \leq -1$



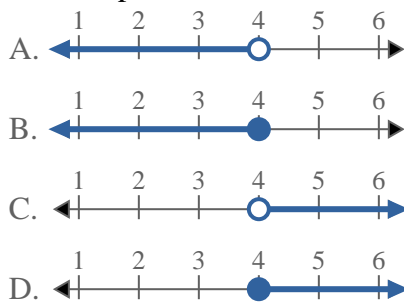
6) Which option best shows $X < 7$



7) Which option best shows $X \leq 3$



8) Which option best shows $X > 4$



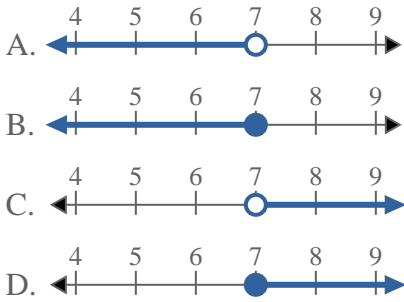
Answers

1. _____
2. _____
3. _____
4. _____
5. _____
6. _____
7. _____
8. _____

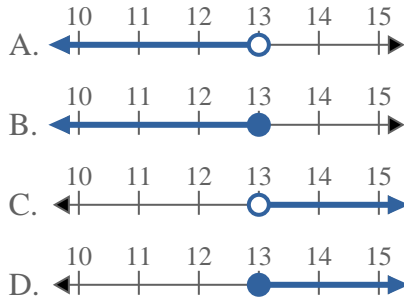


Solve each problem.

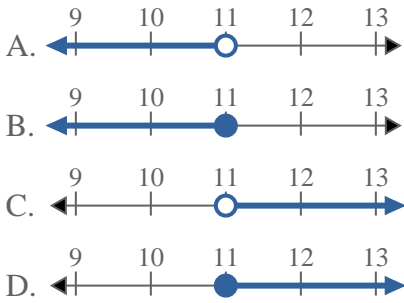
1) Which option best shows $X > 7$



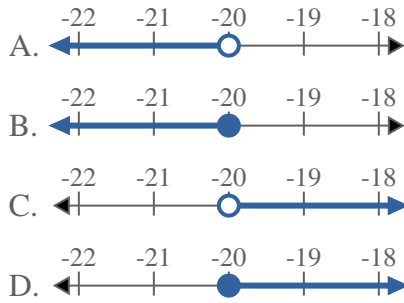
2) Which option best shows $X \geq 13$



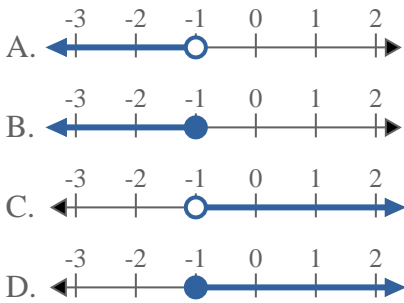
3) Which option best shows $X < 11$



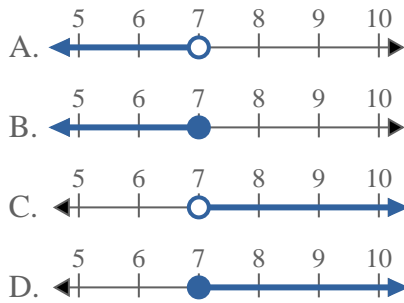
4) Which option best shows $X \leq -20$



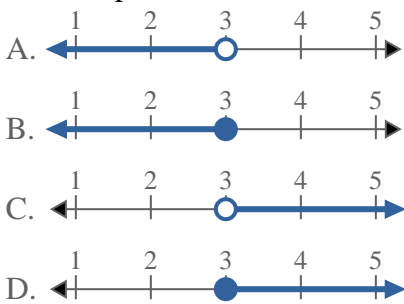
5) Which option best shows $X \leq -1$



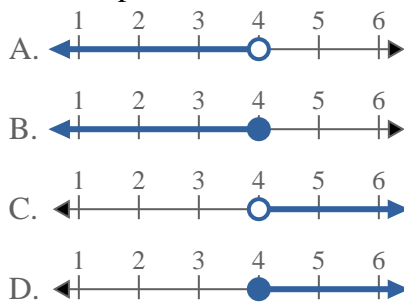
6) Which option best shows $X < 7$



7) Which option best shows $X \leq 3$



8) Which option best shows $X > 4$



Answers

1. **C**
2. **D**
3. **A**
4. **B**
5. **B**
6. **A**
7. **B**
8. **C**