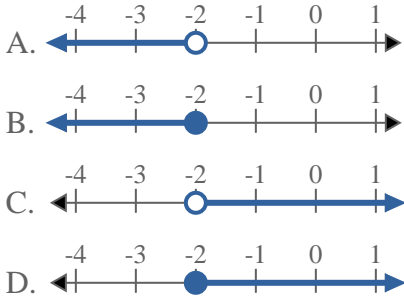


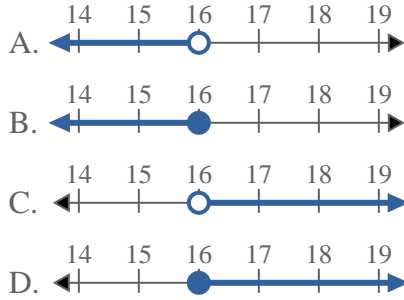


Solve each problem.

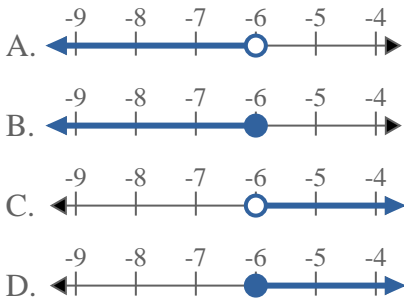
1) Which option best shows $X < -2$



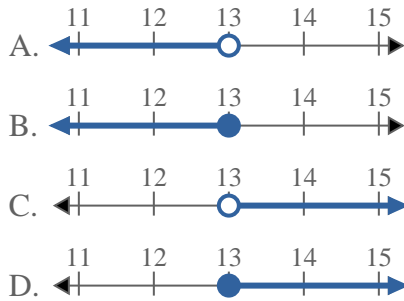
2) Which option best shows $X \leq 16$



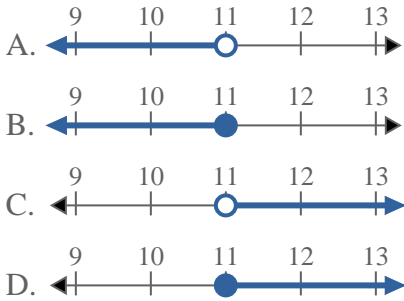
3) Which option best shows $X < -6$



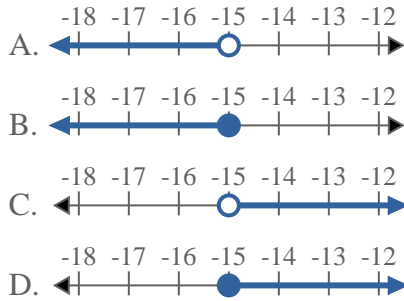
4) Which option best shows $X \leq 13$



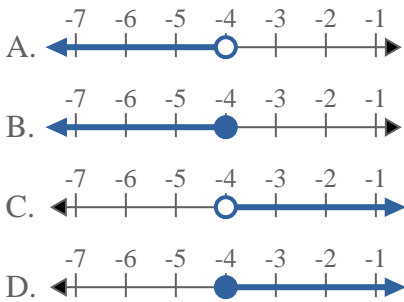
5) Which option best shows $X < 11$



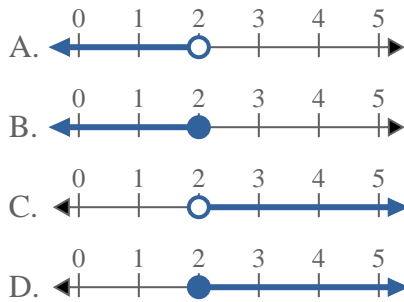
6) Which option best shows $X \leq -15$



7) Which option best shows $X \geq -4$



8) Which option best shows $X > 2$



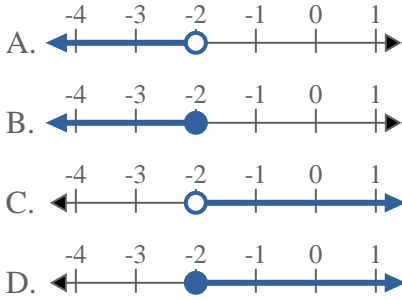
Answers

1. _____
2. _____
3. _____
4. _____
5. _____
6. _____
7. _____
8. _____

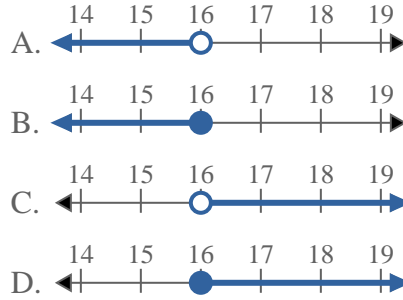


Solve each problem.

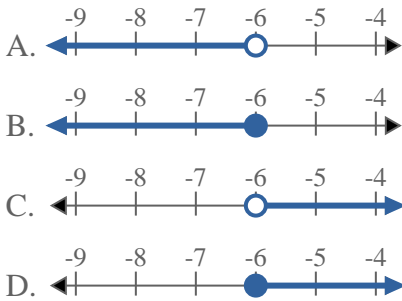
1) Which option best shows $X < -2$



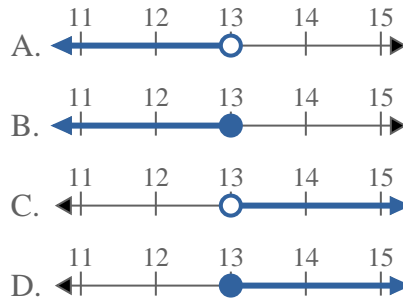
2) Which option best shows $X \leq 16$



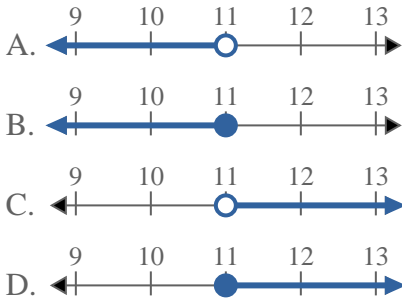
3) Which option best shows $X < -6$



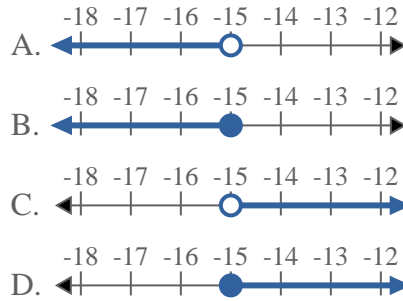
4) Which option best shows $X \leq 13$



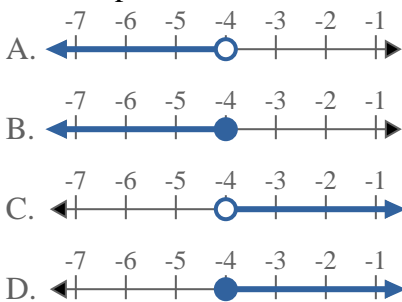
5) Which option best shows $X < 11$



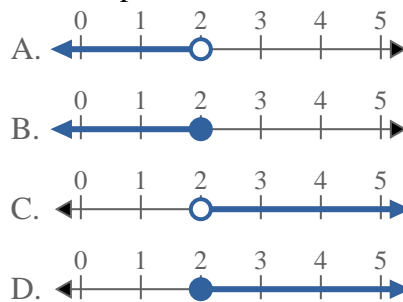
6) Which option best shows $X \leq -15$



7) Which option best shows $X \geq -4$



8) Which option best shows $X > 2$



Answers

1. **A**
2. **B**
3. **A**
4. **B**
5. **A**
6. **B**
7. **D**
8. **C**