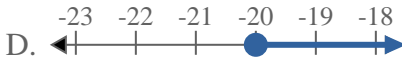
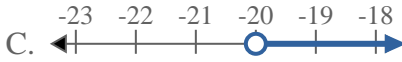


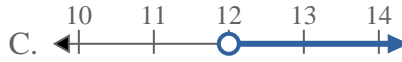


Solve each problem.

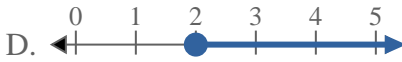
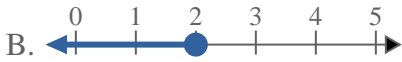
1) Which option best shows  $X > -20$



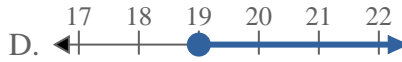
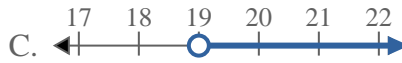
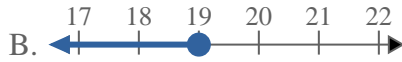
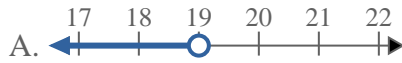
2) Which option best shows  $X > 12$



3) Which option best shows  $X \leq 2$



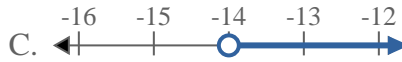
4) Which option best shows  $X > 19$



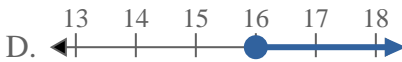
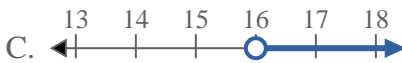
5) Which option best shows  $X \geq -10$



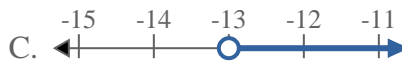
6) Which option best shows  $X < -14$



7) Which option best shows  $X \leq 16$



8) Which option best shows  $X < -13$



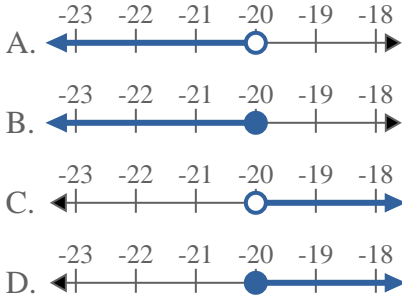
Answers

1. \_\_\_\_\_
2. \_\_\_\_\_
3. \_\_\_\_\_
4. \_\_\_\_\_
5. \_\_\_\_\_
6. \_\_\_\_\_
7. \_\_\_\_\_
8. \_\_\_\_\_

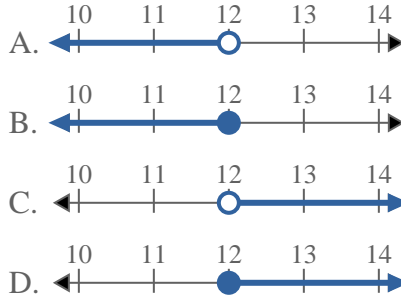


Solve each problem.

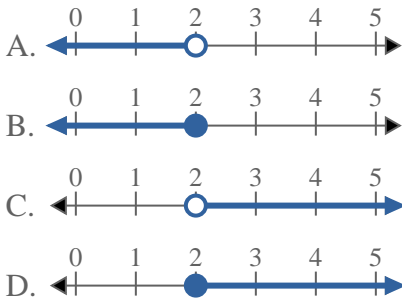
1) Which option best shows  $X > -20$



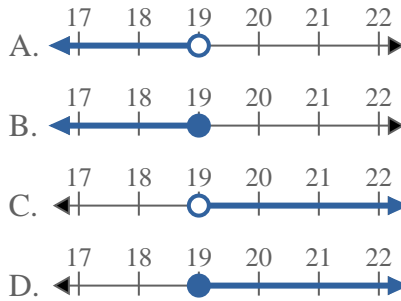
2) Which option best shows  $X > 12$



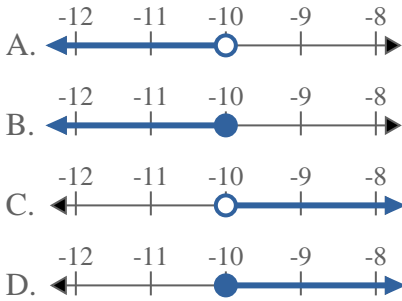
3) Which option best shows  $X \leq 2$



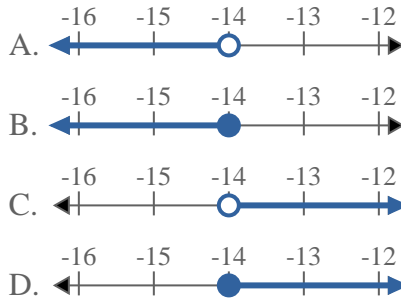
4) Which option best shows  $X > 19$



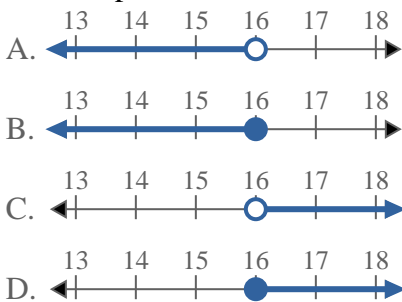
5) Which option best shows  $X \geq -10$



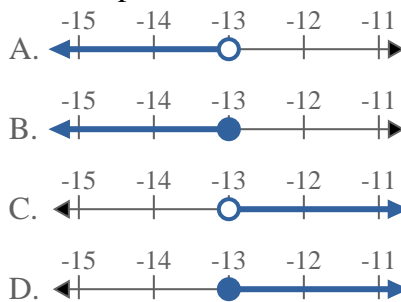
6) Which option best shows  $X < -14$



7) Which option best shows  $X \leq 16$



8) Which option best shows  $X < -13$



Answers

1.     **C**
2.     **C**
3.     **B**
4.     **C**
5.     **D**
6.     **A**
7.     **B**
8.     **A**